



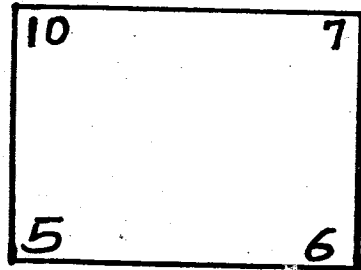
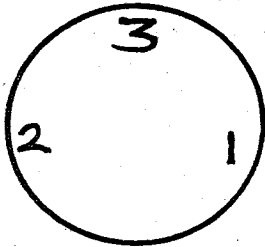
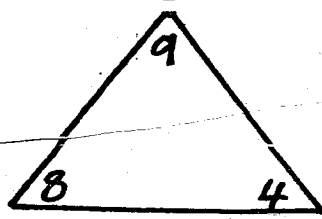

TISMAR EARLY YEARS' ASSESSEMENT

PRE-PRIMARY (PP1) - TERM 3 - 2021

NUMBER WORK ACTIVITIES

NAME: SCHOOL:

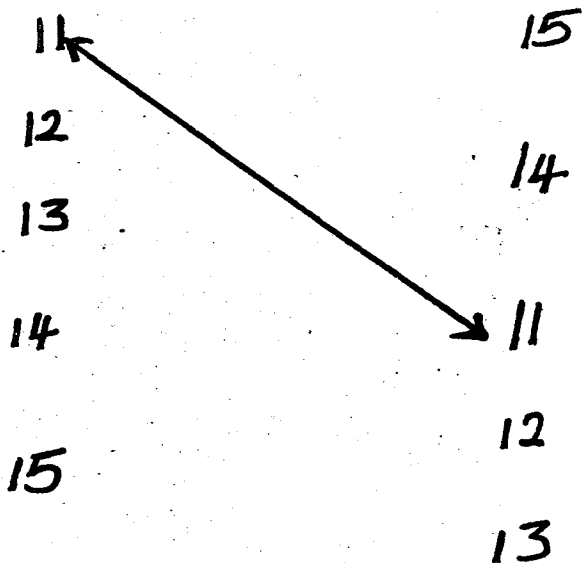
1. Recognize the shapes and number inside



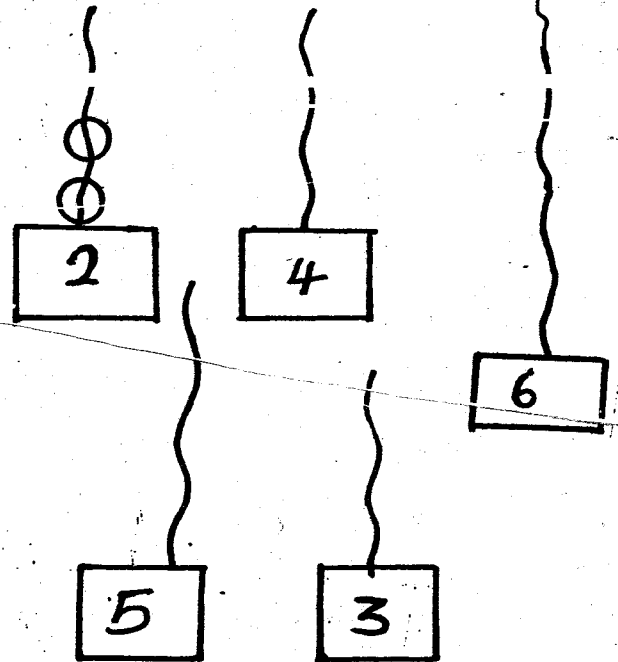
2. Fill in the missing

1 _____, 3 _____,
5 _____, 7 _____, 9 _____

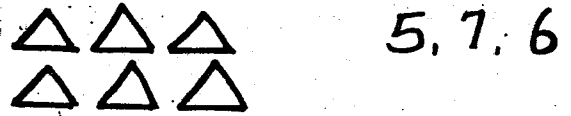
3. Match and read



4. Draw the balls



5. count and circle



6. Put together

$$OO + OOO = \underline{\quad}$$

$$CC C + CCCC = \underline{\quad}$$

$$\text{Two circles with dots} + \text{Two circles with dots} = \underline{\quad}$$