

COMPETENCY BASED CURRICULUM

GRADE ONE - YEAR 2021

GDI

**SASON
007**

MATHEMATICAL ACTIVITIES

Name: _____

Learners number

--	--	--	--	--

Gender

Boy

Girl

County name _____ County code

--	--	--	--

Sub-county name _____ Sub-county code

--	--	--	--

School name _____ School code

--	--	--	--

TOTAL MARKS SCORED	
--------------------------	--

ASSESSMENT RUBRIC


Exceeds Expectations	Meets Expectations	Approaches Expectations	Below Expectation
30 out of 30 Marks	20 to 29 Marks	10 to 19 Marks	0 to 9 Marks

MATHEMATICS ACTIVITIES

Numbers (1-12)

(30 marks)

1. Count and match (5 marks)



5



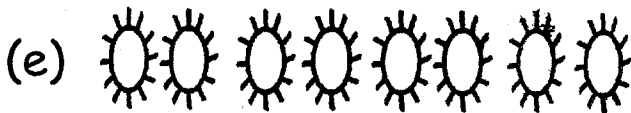
8



7



4



3

2. Add (7 marks)

$1 + 2 = \underline{\quad}$

$1 + 5 = \underline{\quad}$

$2 + 3 = \underline{\quad}$


$3 + 3 = \underline{\quad}$

$$\begin{array}{r} 8 \\ + 2 \\ \hline \end{array}$$

$$\begin{array}{r} 9 \\ + 1 \\ \hline \end{array}$$

$$\begin{array}{r} 7 \\ + 0 \\ \hline \end{array}$$

3.



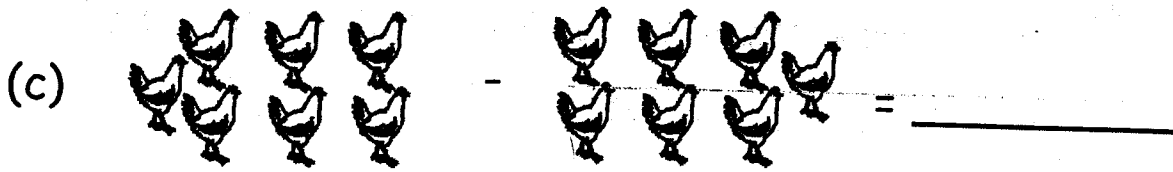
How many eggs are in the basket? (1 mark)

4. Salome has 5 apples and Shammah has 4 apples. How many apples do they have altogether? (1 mark)

5. Take away

(a). $5 - 4 = \underline{\quad}$

(b). $7 - 0 = \underline{\quad}$

(c) 

6. Write the next number (2 marks)

(a) 99 - _____

(b) 89 - _____

7. What is the place value of 2? (2 marks)

21 - _____


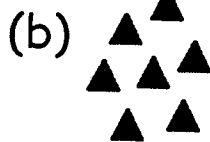

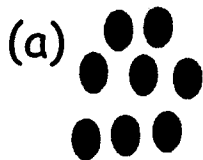
12 - _____

8. Write the missing number (1 mark)

1, 3, 5, 7, 9, _____

9. A bicycle has _____ wheels (1 mark)

10. Circle the group that has more objects (2 marks)



11. Write the numbers in words (3 marks)

12 - _____

10 - _____

5 - _____


12. Write the numbers in ascending order (2 marks)

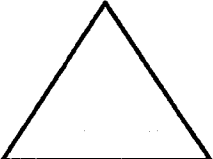
9, 7, 6, 8, - _____

22, 12, 2, 20 - _____

MEASUREMENT (13 - 23) (15 marks)

13. How many objects have straight sides? _____




14.  How many sides does this shape have?
_____ (1 mark)

15. Write "heavier" or "lighter"


(a) A chair is _____ than a mobile phone

(b) I am _____ than my mother.

(c) The book is _____ than a pencil.

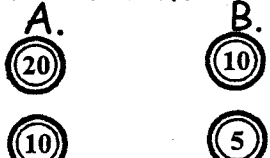
16.  Which container holds more?
_____ (1 mark)

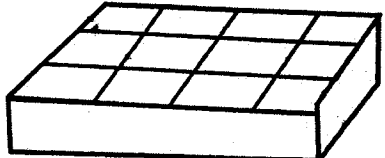
17. Name the tool used for telling time _____ (1 mark)

18.  At what time of the day? _____ (1 mark)
(morning, noon, evening)

19. How many days of the week do you go to school? _____

20. The last month of the year is _____

21.  Match the coin in A with that
in B _____ (3 marks)

22.  How many pieces have been used to
cover the box below? _____ (1 mark)

23. Which one is longer? _____ (1 mark)



GEOMETRY (24-25) (5 marks)

24. Name the shapes (3 marks)

(a)  _____

(b)  _____

(c)  _____

25. What shape is ; (a) Your blackboard _____

(b) An egg _____