

CROWN EXAMINATION TEST MONITORING LEARNER'S PROGRESS

GRADE 1 - TERM III - YEAR 2021

INTERGRATED LEARNING AREAS (50 marks)

Name: _____ School: _____

The grid below is to be filled by the teacher after marking the learner's work


Exceeds expectation	Meets expectation	Approaching expectation	Below expectation

HYGIENE AND NUTRITION

ACTIVITIES (20 marks)

1. Name three things we use to clean our body (3 mks)

2. Match the following forms of medicine with their names. (4 mks)




Ointment



Capsules



Syrup



Tablets

3. Name two healthy food you eat at home. (2 mks)

4. Draw a tooth. (2 mks)

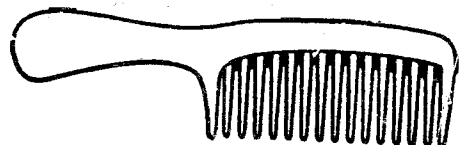
5. Cows gives us _____ and _____ (2 mks)

6. Tick the things we use to clean our teeth. (3 mks)

- Sugar
- Salty water
- Toothbrush
- Nail
- Toothpaste

7. Name two things that can cut you when using them. (2 mks)

8. The picture below shows a _____



(knife, comb)

(1 mks)

9. Name one food that we get from plant.

_____ (1 mks)

ENVIRONMENTAL ACTIVITIES.

(20Marks)


1. Name these weather conditions

(3 mks)

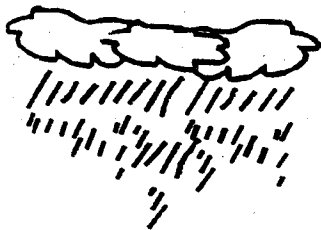
(a)



(b)

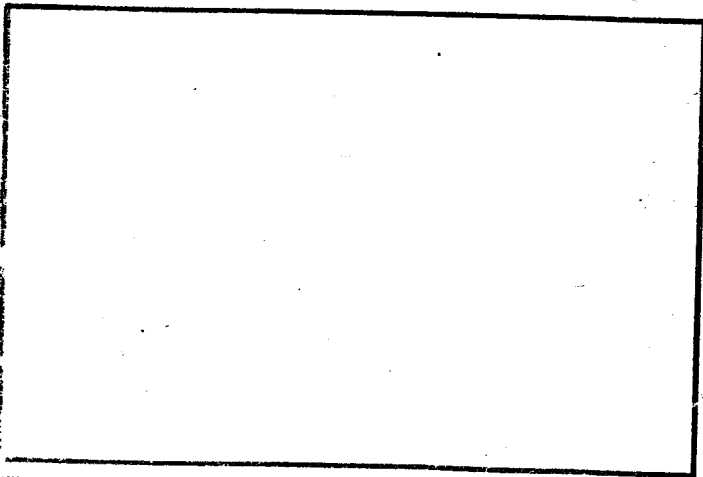


(c)



2. Write two things we can see in the sky during the day. (2 mks)

3. Draw and colour a moon. (2 mks)




4. Match these sources of water with their names. (3 mks)

(a)



Rainfall

(b)



River

(c)



Dam

5. Name these items we use to store water. (4 mks)

(a)



(b)

