

COMPETENCY BASED CURRICULUM

GRADE TWO - YEAR 2021

GD2

SASON
007

MATHEMATICAL ACTIVITIES

Name: _____

Learners number

Gender Boy Girl

County name _____ County code

Sub-county name _____ Sub-county code

School name _____ School code

TOTAL MARKS SCORED	
--------------------------	--

ASSESEMENT RUBRIC

Exceeds Expectations	Meets Expectations	Approaches Expectations	Below Expectation
30 out of 30 Marks	20 to 29 Marks	10 to 19 Marks	0 to 9 Marks D)

MATHEMATICS ACTIVITIES

Numbers (1-10)

(40 marks)

1. Match the numbers with words

(5 marks)

(a) 20

Eleven

(b) 17

Nineteen

(c) 16

Twenty

(d) 19

Seventeen

(e) 11

Sixteen

2. Write the missing numbers

(5 marks)

(a) 100 ___ 98 ___ 96

(b) 10, 20, 30, _____

(c) 2, 4, 6, 8 _____

(d) 49, 47, 45, 43, 41, _____

(e) 5, 10, 15, 20, _____

3. Circle the number less than 90


(5 marks)

89 98 77 93 48 99 91 88 69

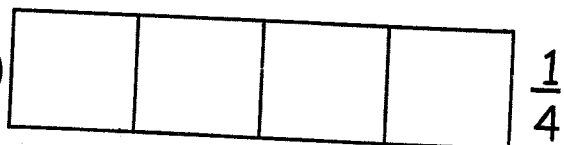
4. Shade

(2 marks)

(a) $\frac{1}{2}$



(b)



5. Add (5 marks)

(a)
$$\begin{array}{r} 17 \\ + 2 \\ \hline \end{array}$$

(b)
$$\begin{array}{r} 90 \\ + 9 \\ \hline \end{array}$$

(c)
$$\begin{array}{r} 34 \\ + 6 \\ \hline \end{array}$$

(d) $9 + 13 + 2 = \underline{\hspace{2cm}}$

(e) $8 + 4 + 9 = \underline{\hspace{2cm}}$

6. Subtract;

(5 marks)

(a) $\square - 24 = 44$

(b) $\square - 30 = 10$

(c)
$$\begin{array}{r} 68 \\ - 12 \\ \hline \end{array}$$

(d)
$$\begin{array}{r} 20 \\ - 20 \\ \hline \end{array}$$

(e) $8 - 5 = \square$

7. Write the place value;

(3 marks)




(a) 32 tens ones



(b) 459 hundreds tens ones

(c) 799 hundreds tens ones

8. Count and write;

(2 mark)

(a)  +  +  =

(b)  +  =

9. Multiply;

(2 marks)

(a) $4 \times 5 = \underline{\hspace{2cm}}$

(b) $3 \times 3 = \underline{\hspace{2cm}}$

10. Write in words

(5 marks)

(a) 3 _____

(d) 14 _____

(b) 7 _____

(e) 30 _____

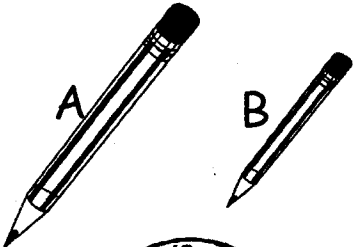
(c) 49 _____


MEASUREMENT - (No.11-15)


(5 marks)

11. Two girls have _____ legs.

12. A year has _____ months.

13.  Which one is longer?





14.  What is the time?

15.  Write more or less.
Cup B holds _____ than cup A.

GEOMETRY

(5 marks)

16. Name the shapes:



(a) _____

(b) _____

(c) _____

(d) _____

(e) _____