



COMPETENCY BASED CURRICULUM MONITORING LEARNER'S PROGRESS GRADE 3 - 007

MATHEMATICAL ACTIVITIES

Name _____

Learner's Number

Gender Boy Girl

School Name _____

TEACHER'S SCORING GUIDE ASSESSMENT RUBRICS

Exceeds expectation	Meets expectation	Approaching expectation	Below expectation

Fill in the missing numbers.

- 207, 209, 211, _____, 215
- 991, 990, _____, 988

Fill in the position of the months of the year.

- March is the _____ month of the year.
- June is the _____ month of the year.

Write the numbers in symbol.

- Sixty five = _____
- Write 44 in words _____
- $6 + 1 + 3 =$ _____
- $520 + 9 =$ _____

Work out:-

- $$\begin{array}{r} 687 \\ + 8 \\ \hline \end{array}$$
- $$\begin{array}{r} 954 \\ + 35 \\ \hline \end{array}$$


11. $827 + 91 =$

Write the next two numbers.


- 565, 563, 561, _____, _____
- 721, 726, 731, _____, _____

How many ones and tens.

- $64 =$ _____ tens and _____ ones
- $9 =$ _____ tens and _____ ones
- What is the time?

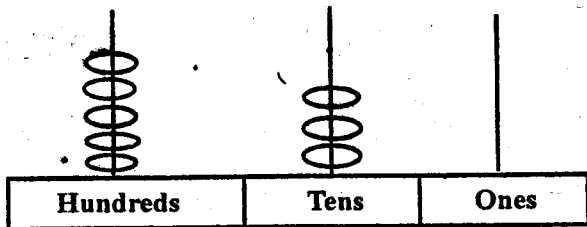


17. _____ minutes past 12



_____ minutes to 11

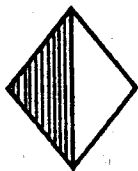
18.



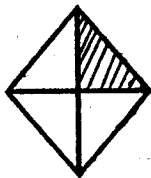
___ hundreds ___ tens ___ ones

Write $\frac{1}{4}$ or $\frac{1}{2}$

19.

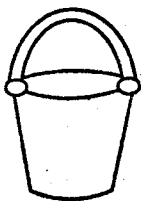


24.

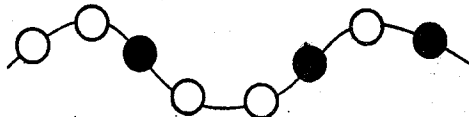


20. Kanze had 354 seedlings. She bought 114 more seedlings. How many seedlings does she have altogether? _____

21. The bucket below can be filled by 20 litre bottles. The bucket holds _____ litres.



22.



Which part of the set is shaded?

23. **Subtract:-**

$$85 - 61 = \underline{\quad}$$

24.

$$\begin{array}{r} 90 \\ - 70 \\ \hline \end{array}$$

25. Kamutu bought 84 storybooks. He gave 43 to his friends. How many remained? _____

26. Fill in the missing numbers.

$$\begin{array}{c} \triangle\triangle \\ \triangle\triangle\triangle \end{array} + \begin{array}{c} \triangle\triangle \\ \triangle\triangle\triangle \end{array} = \begin{array}{c} \triangle\triangle \\ \triangle\triangle\triangle \end{array} \begin{array}{c} \triangle\triangle \\ \triangle\triangle\triangle \end{array}$$

$$5 + 5 = \underline{\quad} \times \underline{\quad} = 10$$

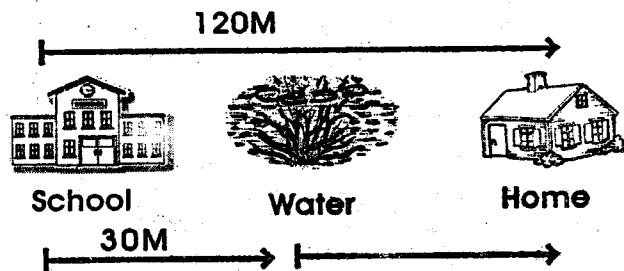
27. Our class teacher put 15 books into 5 boxes. How many books were put in each box _____

28. A class has 64 pupils. The number of boys is 30. How many girls are there? _____

29. $10 \times 9 = \square$ 37. $25 \div 5 = \square$

30.
$$\begin{array}{r} 5 \\ \times 6 \\ \hline \end{array}$$
 39.
$$\begin{array}{r} 7 \\ \times 4 \\ \hline \end{array}$$

31. $15 \div 3 = \square$ 41. $12 \div \square = 4$



32. What distance does Kalua cover walking from home to the waterpan? _____

33. Hussein walked _____ meters from the school to his home.

34. Who walked the longest distance between Kalua and Hussein?

35. $\frac{1}{2}$ of 32 = _____ 36.
$$\begin{array}{r} 58 \\ + 13 \\ \hline \end{array}$$

37. Draw the next pattern.



38. Share among three _____

