

SCHOOL BASED EVALUATION TEST

STANDARD FIVE - YEAR 2021

SASON
007

SCIENCE

5


READ THESE INSTRUCTIONS CAREFULLY

1. Use an ordinary pencil only.
2. Make sure that you have written on the answer sheet:-

Time : 1 Hr. 40 Min.

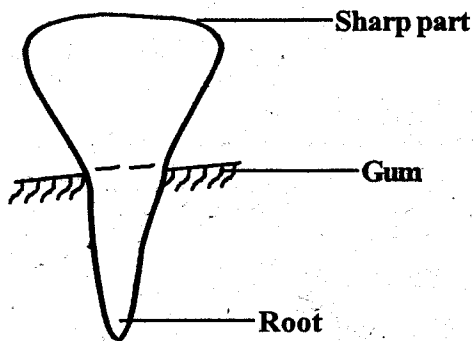
I) YOUR NAME

(II) NAME OF YOUR SCHOOL

1. People who see things that are far away better than those that are near are _____.
A. side sighted
B. short sighted
C. long sighted
D. medium sighted
2. Movements that people make with their body parts to tell others something are called
A. noise B. words
C. gestures D. shaking
3. A bee _____ the enemy in order to scare it away.
A. stings B. bites
C. kills D. swallows
4. Taking water from one place to where it will be used is called _____ water.
A. filtering B. boiling
C. sieving D. transporting
5. Which one is not a type of soil?
A. Clay soil B. Sand soil
C. Loam soil D. Brown soil
6. The way we behave when taking meals is called
A. good behaviour B. eating behaviour
C. food manners D. table manners
7. Which material can reflect light?
A. Mirror
B. Wood
C. Clay soil
D. Black board
8. Sound travel in _____ direction.
A. all direction
B. two directions
C. some directions
D. one directions
9. Name the tool shown below.

A. hammer B. axe
C. rake D. scissors
10. A house for pig is called a _____.
A. pig sty B. kennel
C. shed D. stable
11. Which of the following foods destroys teeth?
A. Meat B. Coconuts
C. Biscuits D. Oranges

12. Sight is the ability to _____.
- A. see B. hear
C. smell D. touch

13. Name the type of the tooth shown below.



- A. molar B. canine
C. incisor D. pre-molar

14. Which one is **not** a way of caring for teeth?

- A. Visiting a dentist
B. Brushing your teeth
C. Eating fruits
D. Taking sweet foods

15. Which one is **true**?

- A. AIDS has no cure
B. AIDS is not a killer disease
C. AIDS has cure
D. AIDS is not a disease

16. Which one is **not** needed for good health?

- A. Food B. Rest
C. Light D. Exercise

17. _____ is needed to make our muscles strong.

- A. Sleep B. Rest
C. Exercise D. Fight

18. Which one of the following is needed by sick people?

- A. Witchdoctor B. Medicine
C. Sleep D. Exercise

19. Which one is **not** a use of plants to people?

- A. Get food
B. Get furniture
C. Get shade
D. Dirt the compound

20. A place where a plant grows is its _____

- A. habitat B. house
C. field D. surrounding

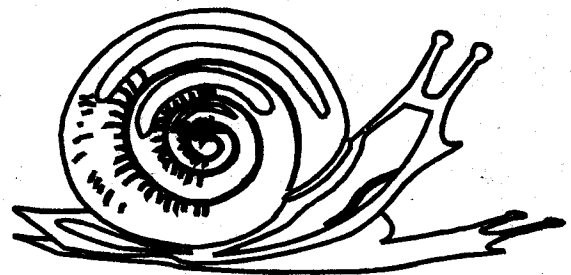
21. The condition of the atmosphere around us is called _____.

- A. rain B. weather
C. chart D. season

22. People who grows crops or look after domestic animals are called _____.

- A. doctors
B. farmers
C. keepers
D. watchmen

23. The animal shown below moves by

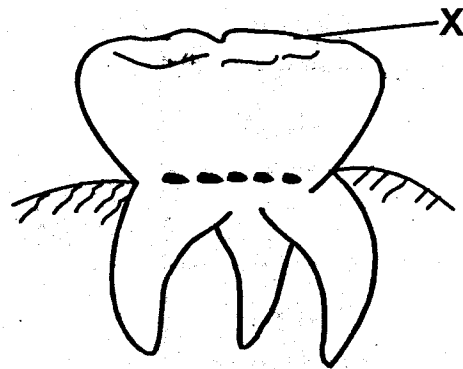


- A. crawling B. hopping
C. leaping D. walking

24. Which one is **not** a way of caring for animals at home?
 A. Watering
 B. Giving food
 C. Beating
 D. Sheltering
25. Which one is the fastest way of transporting water thoroughly?
 A. Donkey
 B. Tanker
 C. Bicycle
 D. Pipes
26. Boiling water helps to _____.
 A. change colour
 B. remove mud
 C. make it clean
 D. kill germs
27. Which type of soil is **best** for modelling?
 A. Clay
 B. Sand
 C. Loam
 D. Loam and sand
28. Things that reflect light are called _____
 A. reflection
 B. reflectors
 C. image
 D. shadows
29. When you pour water in a container of soil, you will see bubbles. This shows
 A. air in the soil
 B. water in the soil
 C. soil in the bubbles
 D. bubbles in water











Use the diagram below to answer questions

30 - 32;




30. Name the type of the tooth shown above.
 A. molar B. pre-molar
 C. canine D. incisor
31. Name part of the tooth marked X.
 A. ridges B. gum
 C. jaw bone D. roots
32. The above type of tooth is used for _____
 A. grinding food
 B. biting food
 C. tearing food
 D. crushing food
33. The letter **D** in the word AIDS means _____
 A. diseases
 B. deficiency
 C. diarrhoea
 D. dirt
34. Which one is **not** a type of crop?
 A. Cereals
 B. Legumes
 C. Vegetables
 D. weeds
35. Which crop can give oil?
 A. Sugarcane B. Sunflower
 C. Sisal D. Wheat

Use the chart below to answer questions 36 - 39.

	Morning	Afternoon
Monday		
Tuesday		
Wednesday		
Thursday		
Friday		

36. Name the best day to wash clothes.
 A. Monday B. Tuesday
 C. Thursday D. Friday
37. Which day was rainy throughout?
 A. Monday B. Wednesday
 C. Tuesday D. Thursday
38. Which two days was the weather the same?
 A. Tuesday and Friday
 B. Wednesday and Thursday
 C. Monday and Tuesday
 D. Tuesday and Wednesday
39. Which day did people use umbrellas throughout the day?
 A. Tuesday B. Monday
 C. Wednesday D. Thursday
40. Which one is not done during rainy season?
 A. Harvesting B. Weeding
 C. Planting D. Spraying
41. Which one is not a way of storing water?
 A. Bottle B. Pot
 C. Tap D. Tank

42. Things that make work easier are called ____
 A. machines B. logs
 C. spanner D. jembe
43. Hearing is the ability to ____
 A. hear B. see
 C. think D. touch
44. Name the food shown below.



- A. cassava B. maize cob
 C. pineapple D. banana
45. Jane was shouting while she was eating. This was ____
 A. good manners B. bad manners
 C. fair manners D. nice manners
46. Food is good for ____
 A. weak body B. good health
 C. poor health D. big stomach
47. An adults has how many teeth?
 A. 32 B. 28
 C. 12 D. 18
48. People with AIDS should be ____
 A. isolated
 B. thrown away from houses
 C. denied food
 D. shown care and love
49. What do we call the felling out of the first set of teeth?
 A. Pulling out teeth B. Plucking of teeth
 C. Losing teeth D. Shedding of teeth
50. Teeth should be brushed ____
 A. once in a day B. after every meal
 C. twice in a day D. all the time