

# SCHOOL BASED EVALUATION TEST

## STANDARD FIVE - YEAR 2021

### SOCIAL STUDIES & C.R.E

5

SASON  
007

Time : 2 Hours 15 Minutes

#### READ THESE INSTRUCTIONS CAREFULLY

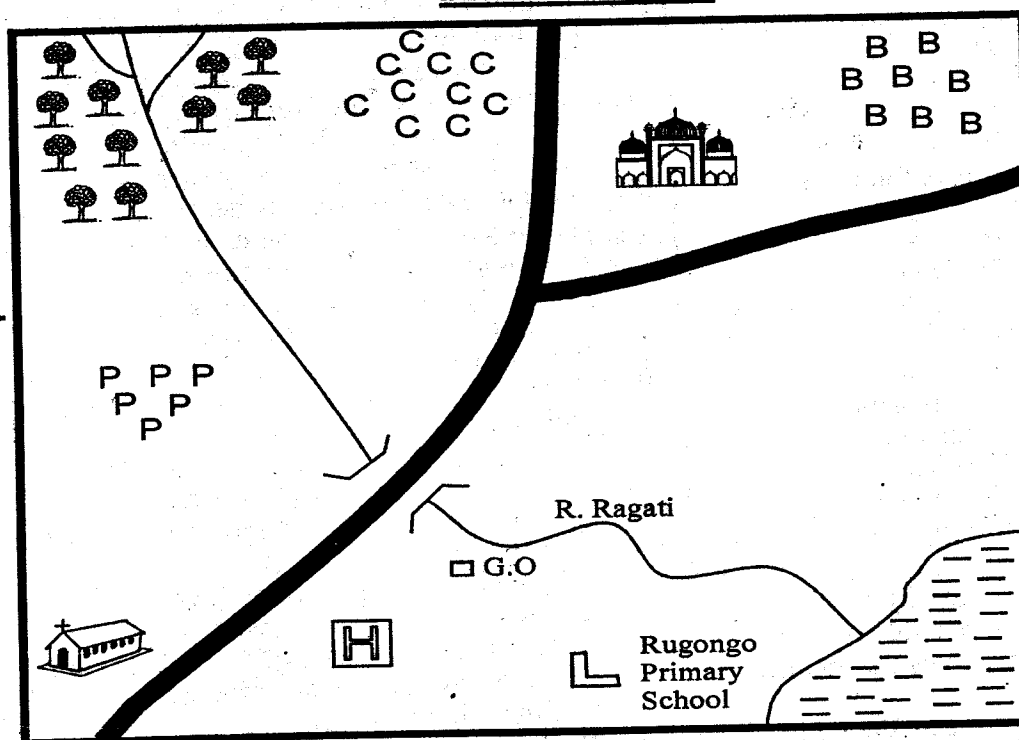
1. Use an ordinary pencil only.
2. Make sure that you have written on the answer sheet:-

(I) YOUR NAME

(II) NAME OF YOUR SCHOOL

#### RAGATI AREA

Key:



	Mosque
	Church
GO	Government Office
	Forest
PPP	Pyrethrum
	Lake
H	Hospital
BBB	Beans

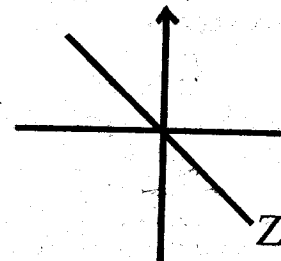
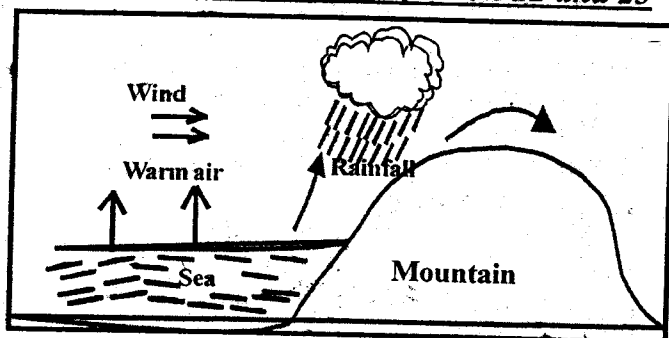
SCALE: 0 1 2 3 4 5 6 7 8 9 10 km

Study the map of RAGATI AREA above and use it to answer questions 1 - 7;

1. What is the direction of the mosque from Rugongo primary school?  
A. North East      B. South  
C. South West      D. North
2. The cash crop grown in Ragati area that is used to make insecticides is \_\_\_\_\_.  
A. coffee      B. tea  
C. pyrethrum      D. cotton
3. The most common means of transport is \_\_\_\_\_.  
A. river      B. road  
C. air strip      D. lake
4. People of Ragati area are treated in the \_\_\_\_\_.  
A. hospital      B. school  
C. mosque      D. church
5. People of Ragati area are \_\_\_\_\_.  
A. Christians and Hindu
6. B. Christians and Muslims  
C. Muslims and Pagans  
D. Hindus and Muslims  
Which one of the following crops is grown in Ragati area?  
A. Tea      B. Maize  
C. Cotton      D. Beans
7. Ragati area is headed by a \_\_\_\_\_.  
A. Governor      B. C  
C. D.O      D. D.C
8. The following are eastern Bantus except  
A. Abasuba      B. Agikuyu  
C. Pokomo      D. Taita
9. Areas with many people are said to be \_\_\_\_\_ populated.  
A. densely      B. sparsely  
C. fever      D. more
10. \_\_\_\_\_ were done when baby was born in the past.

11. \_\_\_\_\_ marked the beginning of adulthood.  
 A. Marriages B. Ululation  
 C. Drama D. Games
12. There are \_\_\_\_\_ counties in Kenya.  
 A. 47 B. 5 C. 12 D. 4
13. People of the same age form an \_\_\_\_\_.  
 A. age - group B. clan  
 C. school D. community
14. Father, mother and children form a \_\_\_\_\_ family.  
 A. single parent B. nuclear  
 C. extended D. street
15. Vegetation that grows on its own is called;  
 A. artificial vegetation  
 B. natural vegetation  
 C. planted vegetation  
 D. national vegetation
16. Papyrus reeds vegetation is found in \_\_\_\_\_ areas.  
 A. dry B. cool  
 C. swampy D. warm
17. Which one of the following neighbour Kenya to the north west?  
 A. Ethiopia B. Indian ocean  
 C. South Sudan D. Fanzania
18. The following are similar except  
 A. lakes B. hills  
 C. mountain D. valleys
19. Which one of the following is not a type of soil?  
 A. sand soil B. Loamy soil  
 C. Alluvial soil D. Fertile soil
20. Which of the following gives the meaning of soil erosion?  
 A. Breaking of the top soil by the wind  
 B. Carrying away of the top soil by the wind or water.  
 C. Monocropping on the land  
 D. Keeping a large number of animals in a small area
21. Cutting down of trees without replacing them is called  
 A. over crowding B. deforestation  
 C. afforestation D. monocroping
22. The type of rainfall shown above is  
 A. relief rainfall  
 B. cyclonic rainfall  
 C. convectional rainfall  
 D. orographic rainfall
23. Where is this type of rainfall experienced  
 A. Along the coast B. Around Taita hills  
 C. Near Nakuru D. Around Nairobi
24. The height above the sea level is  
 A. longitude B. relief  
 C. latitude D. altitude
25. A natural home for wildlife is known as  
 A. forest B. sanctuary  
 C. game park D. habitat
26. A governor of a county is elected every after  
 A. five years B. ten years  
 C. seven years D. two years
27. In the past people were treated by \_\_\_\_\_  
 A. medicine people B. seers  
 C. witch doctors D. sorcerers
28. A person who loves his ore her country is called  
 A. refugee B. rebel  
 C. stranger D. patriot
29. A place where a river starts from is called \_\_\_\_  
 A. delta B. source  
 C. confluence D. mouth
30. Beef animals are kept in special areas called;  
 A. strips B. dairies  
 C. stalls D. ranches
31. All these colours are found on the National flag **except**;  
 A. green B. yellow  
 C. red D. white
32. Which is the first line of the second stanza of our Kenya National Anthem?  
 A. Oh God of all creation  
 B. Bless this our land and Nation  
 C. Let all with one accord  
 D. Let one and all arise
33. North, South, East and West are known as  
 A. cardinal points B. direction points  
 C. compass points D. compass needles
34. The direction marked Z is called \_\_\_\_\_


Use the diagram to answer question 22 and 23



35. All the following are uses of trees. Which one is **not**?  
 A. Trees provide timber  
 B. Trees provide shade  
 C. Some trees provide medicine  
 D. Trees provide education

36. Planting of trees where they were cut referred to as \_\_\_\_\_  
 A. afforestation      B. reafforestation  
 C. deforestation      D. agriculture

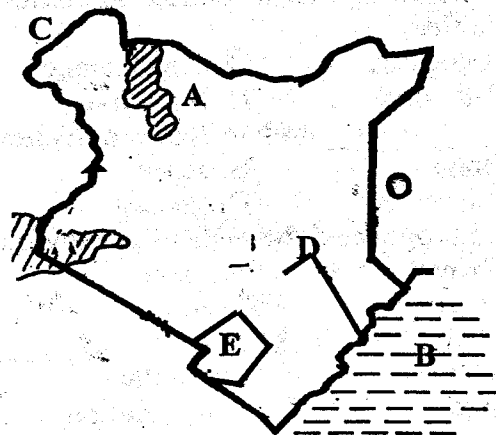
Use the diagram below to answer question 37:



37. The road sign in the diagram means  
 A. No right turn      B. No way through  
 C. Bumps ahead      D. No U-turn
38. On the first May every year, we celebrated  
 A. Labour day      B. Madaraka day  
 C. Mashujaa day      D. Jamhuri day
39. Counting of people is done after \_\_\_\_\_ years.  
 A. 10      B. 5      C. 20      D. 2
40. The current president of Kenya is \_\_\_\_\_  
 A. Mzee Jomo Kenyatta  
 B. William Ruto  
 C. Daniel Moi  
 D. Uhuru Kenyatta
41. \_\_\_\_\_ is in charge of a ward.  
 A. MP      B. Governor  
 C. Senator      D. M.C.A
42. Elections are done after \_\_\_\_\_ years.  
 A. 10      B. 5      C. 15      D. 3
43. Which one of these games was **not** played in the past?  
 A. Wrestling      B. Throwing of spears  
 C. Football      D. Jumping
44. The needle of a compass always point to the  
 A. North      B. South  
 C. East      D. West
45. The direction between South and West is \_\_\_\_  
 A. North East      B. West South  
 C. South West      D. North West
46. A person who live his/her country because of war or famine is called a \_\_\_\_\_.  
 A. citizen      B. refugee  
 C. Christians      D. patriot
47. A person who loves her country is said to be  
 A. loyal      B. honest  
 C. patriotic      D. lover
48. The following are qualities of a good citizen. Which one is **not**?  
 A. Patriotic      B. Honest  
 C. Corrupt      D. Loyal
49. The white colour of our National flag symbolizes \_\_\_\_\_.  
 A. peace      B. land  
 C. blood      D. people

50. \_\_\_\_\_ is the head of our county assembly.  
 A. Judge      B. Speaker  
 C. President      D. Chief
51. In Kenya the election day is also called  
 A. nomination day      B. choosing day  
 C. polling day      D. electing day

Use the map of Kenya to answer questions 52 - 57:



52. The lake marked A is \_\_\_\_\_  
 A. L. Turkana      B. L. Victoria  
 C. L. Magadi      D. L. Lotikipi
53. The feature marked B is the  
 A. costal lowlands      B. Indian ocean  
 C. plateaus      D. Tanzani
54. The country bordering Kenya at C is the  
 A. Tanzania      B. Sudan  
 C. Ethiopia      D. Southern Sudan
55. The river D is  
 A. River Sabaki      B. River Athi  
 C. River Voi      D. River Tana
56. The county marked E is  
 A. Kwale county      B. Taita Taveta  
 C. Kilifi      D. Mombasa
57. The largest national park found at E is the  
 A. Amboseli  
 B. Tsavo national park  
 C. Boni  
 D. Marsabit
58. One of the following means of communication was used in the past. Which one?  
 A. Radio      B. Smoke  
 C. Television      D. Letter
59. Our deputy president is called \_\_\_\_\_  
 A. Uhuru Kenyatta      B. William Ruto  
 C. Raila Odinga      D. Daniel Moi
60. An instrument used for measuring temperature is called .  
 A. raingauge      B. thermometer  
 C. windvane      D. windsock

**SECTION II - C.R.E.**

61. The first people to be created were \_\_\_\_\_  
A. Cain and Abel  
B. Moses and Abraham  
C. Leah and Moses  
D. Adam and Eve
62. Jesus raised Lazarus after \_\_\_\_\_ days.  
A. 3      B. 5      C. 4      D. 2
63. The following was the place where Jesus was crucified?  
A. Golgotha      B. Gethsemane  
C. Mt. Sinai      D. Mt. Olive
64. \_\_\_\_\_ invited Jesus in his house.  
A. John      B. Jesse  
C. Solomon      D. Andrew
65. Who prophesied the birth of our saviour?  
A. Daniel      B. Isaiah  
C. Hezekiah      D. Joshua
66. The first book in the Bible is \_\_\_\_\_.  
A. Genesis      B. Matthew  
C. Acts      D. Revelation
67. If Lyaosi finds twenty shillings in the field, she should \_\_\_\_\_.  
A. buy sweets      B. take it home  
C. give it to the teacher      D. save it
68. Jesus prayed with His disciples in the garden of \_\_\_\_\_.  
A. Canaan      B. Sinai  
C. Eden      D. Gethsemane
69. Jesus gave \_\_\_\_\_ and authority to His disciples.  
A. obey      B. power  
C. kindness      D. magic
70. During the baptism of Jesus in river Jordan, what came upon Jesus?  
A. Pigeon      B. Sparrow  
C. An eagle      D. Dove
71. An example of a Holy place is \_\_\_\_\_.  
A. church      B. jail  
C. school      D. palace
72. Lazarus sisters lived in \_\_\_\_\_.  
A. Judea      B. Bethany  
C. Bethsaida      D. Jerusalem
73. Moses led Israelites from \_\_\_\_\_.  
A. Egypt      B. Jerusalem  
C. Canaan      D. Nineveh
74. God tested Abraham's \_\_\_\_\_ by asking him to sacrifice His only son.  
A. faith      B. courage  
C. kindness      D. generosity
75. Moses brother was called \_\_\_\_\_.  
A. Joshua      B. Moses  
C. Aaron      D. David
76. Who visited Jesus at night?  
A. Judas      B. Nicodemus  
C. Paul      D. Mary
77. Jesus fed five thousand people with;  
A. two fish and five loaves of bread  
B. two fish and two loaves of bread  
C. two loaves and five fish  
D. twelve baskets
78. We respond to Jesus' salvation by;  
A. killing animals  
B. obeying God's command  
C. hating our enemies  
D. going to school
79. Jesus performed His first miracle in;  
A. Jerusalem      B. Bethlehem  
C. Egypt      D. Cana
80. Who of the following was the wise king in Israel?  
A. Saul      B. Jeroboam  
C. Solomon      D. Samuel
81. Jesus told one of His disciples to take care of the sheep which disciple was this?  
A. John      B. James  
C. Peter      D. Simon
82. The disciple who was loved most by Jesus was;  
A. Peter      B. Philip  
C. Thomas      D. John
83. Moses was given the ten commandments by God on Mt.  
A. Sinai      B. Zion  
C. Bethlehem      D. Canaan
84. Jesus used parables in His preaching. The parable of Good Samaritan is an example of a ;  
A. good neighbours      B. friendship  
C. young children      D. Samaritan people
85. The \_\_\_\_\_ son shared his food with pigs.  
A. bad      B. prodigal  
C. beloved      D. hated
86. The Holy Spirit came during the;  
A. Passover      B. Christmas  
C. Last Supper      D. Pentecost
87. The first four books of the Bible are called  
A. Law books      B. Epistles books  
C. Gospel books      D. Historical books
88. The word Emmanuel means \_\_\_\_\_.  
A. Messiah      B. God with us  
C. son of God      D. God without us
89. Desiring what somebody else has, is called;  
A. stealing      B. borrowing  
C. destroying      D. coveting
90. Who ordered the killing of John the Baptist?  
A. Nebuchanezzar      B. Herod  
C. Pharaoh      D. Pilate