



# SKY FLYER EXAMINATIONS SERIES STANDARD FIVE

YEAR 2021

SOCIAL STUDIES/R.E

SKF21G

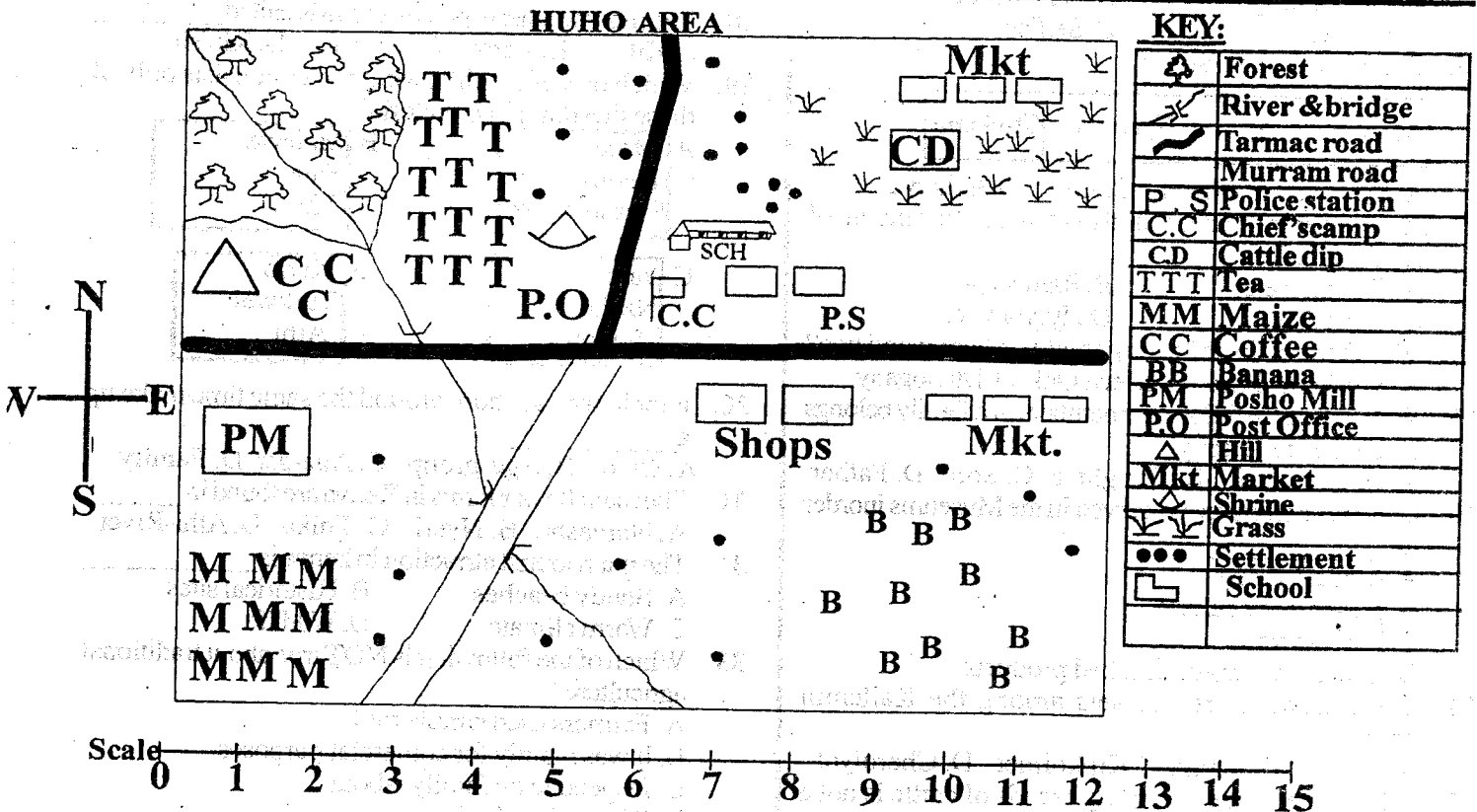
**READ THESE INSTRUCTIONS CAREFULLY**

**Time: 2hr 15min**

- You have been given this question paper and a separate answer sheet. The question paper contains 50 questions.
- Make sure that you have written on the answer sheet

(i) Your name \_\_\_\_\_

(ii) Name of your school \_\_\_\_\_



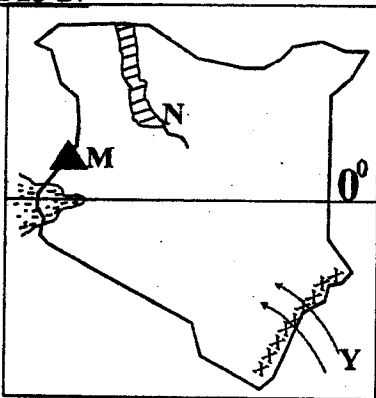
**Study the Map of Huho Area above and use it to answer questions 1 - 7.**

- Huho area is headed by \_\_\_\_\_  
A. Governor B. Chief C. D.O D. D.C
- People in Huho area are likely to be \_\_\_\_\_  
A. Christians B. Muslims  
C. Traditionalists D. Pagans
- The following crops are grown in Huho area except?  
A. Maize B. bean C. Coffee D. Tea
- What is the direction of the posho mill from the cattle dip?  
A. South West B. North East  
C. South East D. North West
- The following economic activities are carried out in Huho Area except?  
A. Farming B. Trading  
C. Cattle keeping D. Mining
- In Huho area there is no \_\_\_\_\_  
A. post office B. school  
C. hospital D. police station
- The main means of transport in Huho area is likely to be \_\_\_\_\_  
A. Road B. air C. pipeline D. water
- Which type of soil is described below?  
i) Has big particles  
ii) Has large air spaces  
iii) Is the best for building houses.  
The soil described below is \_\_\_\_\_  
A. Clay B. Alluvial C. Sand D. Red volcanic
- Which country below does not border Kenya?  
A. Djibouti B. Somalia C. Uganda D. Tanzania
- The following are elements of a good map. Which one is NOT?  
A. Compass B. Colour C. Frame D. Title
- The following are benefits of forests. Which one is Not?  
A. Trees provide raw materials for Industries  
B. Forests are homes for wild animals  
C. Forests are hideout for criminals  
D. Forests are water catchment areas

12. The largest language group in Kenya is \_\_\_\_\_  
 A. Bantus B. Nilotes C. Semites D. Cushites
13. The original homeland of the Cushites was \_\_\_\_\_  
 A. Congo forest B. Horn of Africa  
 C. Nile valley D. South Sudan
14. The largest county in Kenya is \_\_\_\_\_ while the smallest is \_\_\_\_\_ respectively.  
 A. Mombasa, Marsabit B. Marsabit, Nairobi  
 C. Marsabit, Mombasa D. Turkana, Nairobi
15. The following are qualities of a good citizen except?  
 A. Law abiding B. Hardworking  
 C. Helpful D. Selfish
16. Complete the box below

Maasai	X	Njemps	Turkana
--------	---	--------	---------

- A. Samburu B. Nandi C. Luo D. Agikuyu
17. The weather instrument used to measure the amount of rainfall is called?  
 A. Thermometer B. Rain gauge  
 C. Windsock D. Hygrometer
18. Which one of the following is NOT a hard wood tree?  
 A. Mvule B. Pine C. Meru Oak D. Mahogany
19. Who among the following members of a family belongs to an extended family?  
 A. Grandmother B. Daughter C. Son D. Father
20. Cultural artefacts are preserved in the Museums in order to: \_\_\_\_\_  
 A. Attract tourists  
 B. preserve our culture  
 C. Foreign trade  
 D. Use them to make finished products
21. The following are age-sets among the Kallenjin except?  
 A. Chumo B. Maina C. Kipkoimet D. Cheruiyot
22. Which one of the following breeds of cattle is not a dairy breed?  
 A. Hereford B. Freshian C. Jersey D. Ayrshire
- Study the map of Kenya below and use it to answer questions 23-27**



23. The line marked 0° is called \_\_\_\_\_  
 A. Tropic of cancer B. Prime meridian  
 C. Longitude D. Equator
24. The natural vegetation marked XXX is likely to be \_\_\_\_\_

- A. Rainforest B. Savannah woodland  
 C. Mangrove D. Mountain vegetation
25. The mountain marked M is called \_\_\_\_\_  
 A. Mt. Marsabit B. Mt. Elgon  
 C. Mt. Ndoto D. Mt. Kenya
26. The route marked Y was used by the \_\_\_\_\_ during their migration.  
 A. Agikuyu B. Luo C. Arabs D. Cushites
27. Name the river marked N \_\_\_\_\_  
 A. R. Kerio B. R. Tana  
 C. R. Turkwel D. R. Malewa
28. The most southerly part of Kenya is called \_\_\_\_\_  
 A. Kilifi B. Lamu C. Vanga D. Kibish
29. Which one of the following boxes consists only of those that drain in L. Victoria?  
 A. 

Mara
Kerio
Ewaso Nyiro

 B. 

Malewa
Yala
Kuja

  
 C. 

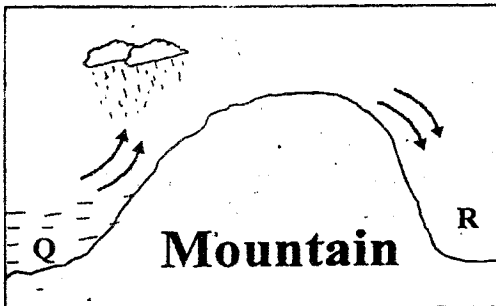
Yala
Nzoia
Sondu

 D. 

Kerio
Turkwel
Athi
30. People who are born around the same time make up a \_\_\_\_\_  
 A. Clan B. Age-group C. Age-set D. Family
31. The main flower farms in Kenya are found in \_\_\_\_\_  
 A. Naivasha B. Nyeri C. Thika D. Athi-River
32. The main tourist attraction in Kenya is \_\_\_\_\_  
 A. Sandy beaches B. Historical sites  
 C. Warm climate D. Wildlife
33. Which of the following is NOT true about traditional agriculture?  
 A. Farmers used simple tools  
 B. It was mainly for commercial purposes  
 C. Depended on family labour  
 D. Was mainly for home use
34. The following are relief regions in Kenya. Which one is the smallest?  
 A. Nyika Plateau B. Coastal lowlands  
 C. Highlands D. Lake Basin
35. Which one of the following towns in Kenya is NOT crossed by the Equator?  
 A. Hagadera B. Nanyuki C. Nairobi D. Maseno
36. The main factor that influences population distribution in Kenya is \_\_\_\_\_  
 A. Climate B. Vegetation  
 C. Mining activities D. Pets and diseases
37. Which one of the following aspects of our culture do we need to preserve?  
 A. Female circumcision  
 B. Traditional ways of greeting.  
 C. Wife inheritance  
 D. Polygamy.
38. In the past communities interacted through all the following ways except?  
 A. Trade B. Wars and raids  
 C. Baptism services D. Games and sports

39. Which one of the following areas is associated with large scale tea growing?  
A. Kericho B. Machako C. Kiambu D. Kajiado
40. The following are methods of rearing chicken except?  
A. Herding B. Free range  
C. Fold system D. Battery system

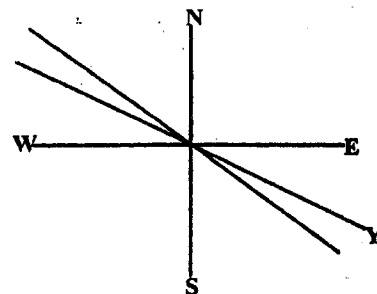
Use the diagram below to answer questions 41-43



41. The above diagram shows the formation of \_\_\_\_\_  
A. Orographic rain fall B. Sea breeze  
C. Land breeze D. Convectional rainfall
42. The main economic activity carried out in the side marked R is \_\_\_\_\_  
A. Cash crop farming B. Pastoralism  
C. Mining D. Dairy farming
43. The side marked Q is called \_\_\_\_\_  
A. Rainshadow B. Leeward side  
C. Rainy side D. Windward side
44. The type of trade where goods are exchanged for other goods is called \_\_\_\_\_  
A. Money trade B. Currency trade  
C. Barter trade D. Traditional trade
45. The following are members of the county assembly except?  
A. Speaker B. Deputy speaker  
C. M.C.A D. Governor
46. The following are causes of conflicts in the society except?  
A. Corruption B. Fairness in courts  
C. Discrimination D. Tribalism
47. The official counting of people in a country is called \_\_\_\_\_  
A. Population density B. National elections  
C. Referendum D. Population census
48. Which one of the following crop is harvested by a machine called combined harvester \_\_\_\_\_  
A. Tea B. Coffe C. Wheat D. Cotton
49. The steep sides of the Rift Valley are called \_\_\_\_\_  
A. Escarpments B. Ranges C. Inselbergs D. Ridges
50. The following methods were used to teach children in the african traditional society except?  
A. Story telling B. Project writing  
C. Proverbs and riddles D. Songs and dances
51. Which one of the following is an example of traditional industries?  
A. Tyre making B. Paper manufacturing  
C. Boat making D. Textile industry
52. In Kenya, it is the duty of the \_\_\_\_\_ to

maintain law and order.

- A. The president B. Kenya police  
C. Judge D. Council of elders
53. The colour of the national flag that symbolises peace is \_\_\_\_\_  
A. Red B. Green C. Black D. White
54. On 12th of december every year, kenyans celebrate \_\_\_\_\_  
A. Mashujaa day B. Jamhuri day  
C. Labour day D. Madaraka day
55. The growing of flowers for sale is called \_\_\_\_\_  
A. Horticulture B. Agriculture  
C. Floriculture D. Market gardening
56. Every child has a right to \_\_\_\_\_  
A. Education B. Vote  
C. Get employment D. Get married
57. The following crops do well in black cotton except?  
A. Tea B. Coffee C. Pyrethrum D. Cotton
58. The first president of Kenya was \_\_\_\_\_  
A. Uhuru Kenyatta B. Mwai Kibaki  
C. Jomo Kenyatta D. Daniel Moi
59. Which one of the following is a traditional method of preservation  
A. canning B. Refrigeration C. Sundrying D. Freezing
60. Identify the compass point named Y.



- A. ESE B. SSE C. SE D. EES  
**C. R. E**

61. Which of the following statements is TRUE?  
A. God knew us after we were born  
B. God knew us after creating the universe.  
C. God knew us before we were born  
D. God knew us after we were baptized
62. Which of these pairs of things were created on the 3<sup>rd</sup> day?  
A. Sea and sea creatures B. Land and sea  
C. Birds and land D. Plants and man
63. "I am fearfully and wonderfully made," These words were said by  
A. Solomon B. Moses  
C. David D. Abraham
64. In African Traditional societies shrines were used for \_\_\_\_\_  
A. Confirmation B. Saying the lord's prayer  
C. Baptism D. Worship
65. During which of the following occasions did Jesus wash His disciples Feet?  
A. The Easter Monday B. The last supper

- C. The pentecost                      D. Christmas
66. During adolescence, girls \_\_\_\_\_  
 A. experience wet dreams    B. start menstruation  
 C. have chest broadening    D. voice become deep
67. We can respond to the call of Jesus by doing all the following **except**?  
 A. Obeying commandments  
 B. Praying for our enemies  
 C. Preaching God's word  
 D. avoiding those who sin against us
68. Prophet \_\_\_\_\_ condemned King Ahab for taking Naboth's Vineyard  
 A. Jeremiah                      B. Nathan  
 C. Elijah                          D. Isaiah
69. Who among the following used to persecute christians before God called him?  
 A. Saul                              B. Peter  
 C. Judas                            D. Sails
70. Before His arrest Jesus went to pray at \_\_\_\_\_  
 A. the garden of Gethsemane  
 B. the garden of Eden  
 C. Cana of Galilee  
 D. Mount Sinai
71. Which one of the following activities in African Traditional societies marked transition from childhood to adulthood?  
 A. Intiation                          B. Naming  
 C. Birth                              D. Marriage
72. Who among the following was the uncle of Jacob.  
 A. Joseph    B. Jesse    C. Manasseh    D. Laban
73. I live in philippi I welcomed Paul and his friends to my house. Who am I?  
 A. Zipporah                          B. Martha  
 C. Lydia                              D. Rebecca
74. \_\_\_\_\_ was a disciple of Jesus but doubted that Jesus had resurrected.  
 A. Judas Iscariot                      B. Thomas  
 C. John                                D. Peter
75. \_\_\_\_\_ anointed the feet of Jesus with expensive oil.  
 A. Martha                              B. Mary  
 C. Salome                              D. Dorcas
76. "Jesus wept, Whose death made him to weep  
 A. Lazarus                              B. Judas  
 C. Window's son                      D. Jairus' daughter
77. On the pentecost day, the disciples \_\_\_\_\_  
 A. shared bread and wine  
 B. were first called christian  
 C. spoke in strange language  
 D. saw the risen christ
78. Three of the following are beliefs in the Apostle's creed **except**?  
 A. Forgiveness of sins  
 B. Second coming of Jesus  
 C. Suffering of people  
 D. God the father Almighty
79. The MAIN lesson christians learn from the story of King Ahab and Naboth is that  
 A. one should be honest  
 B. one should control his desires  
 C. land belongs to the community  
 D. one should obey the laws of the land
80. The word 'Golgotha' means \_\_\_\_\_  
 A. Calvary                              B. Mountain  
 C. Mountain                            D. Holy place
81. Christians celebrate Easter in remembrance of \_\_\_\_\_  
 A. birth of Christ  
 B. ascension of Christ  
 C. death and resurrection of Christ  
 D. Coming of the holy spirit
82. Irresponsible boy/ girl relationship may lead to three of the following **except**?  
 A. happy life                          B. teenage pregnancy  
 C. drug abuse                          D. HIV infection
83. Fruits of the Holy Spirit are found in the book of  
 A. Luke                                B. Acts  
 C. Galatians                          D. Corinthians
84. Simon Peter was nicknamed the \_\_\_\_\_ by Jesus.  
 A. fire    B. cook    C. danger    D. rock
85. \_\_\_\_\_ is an agreement between God and man  
 A. Promise                              B. Will  
 C. Law                                  D. Covenant
86. After the death of Ruth's husband she was later married by \_\_\_\_\_  
 A. Boaz    B. Mahlon    C. Saul    D. David
87. The worship of other gods or people or things is known as \_\_\_\_\_  
 A. Idolatry                              B. adultery  
 C. respect                              D. worship
88. The man who was brought by his friends to Jesus Jesus through a hole in the roof was \_\_\_\_\_  
 A. paralysed                              B. dumb and deaf  
 C. blind                                D. deaf
89. "Man shall not live by bread alone but by every word that comes from God's mouth. Jesus quoted this during \_\_\_\_\_  
 A. His birth                              B. His death  
 C. His temptation                      D. His resurrection
90. Which sin did Adam and Eve commit?  
 A. Disobeying God's command  
 B. Covering themselves with leaves  
 C. Talking to a snake  
 D. Admiring the fruit.