

8.0 CHEMISTRY (233)



This was the fourth time the subject was tested using the revised curriculum. The subject is tested using two theory papers and one practical paper. Each theory paper is marked out of 80 marks and is taken in 2 hours. The practical paper is marked out of 40 marks and is taken in 2¼ hours.

8.1 CANDIDATES' GENERAL PERFORMANCE

Performance in 2006, 2007, 2008 and 2009 is shown in the table below:

Table 13: Candidates overall performance in Chemistry in the last four years.

Year	Paper	Candidature	Maximum Score	Mean Score	Standard Deviation
2006	1		80	20.79	14.95
	2		80	17.56	13.82
	3		40	11.48	5.10
	Overall	236,831	200	49.82	32.00
2007	1		80	19.67	15.26
	2		80	19.22	13.45
	3		40	11.87	4.95
	Overall	267,719	200	50.78	31.00
2008	1		80	18.28	14.78
	2		80	15.74	13.00
	3		40	11.46	5.42
	Overall	296,937	200	45.48	31.78
2009	1		80	12.49	9.50
	2		80	14.93	12.04
	3		40	10.86	4.55
	Overall	329,730	200	38.23	24.53

From the table it is observed that:

- 8.1.1 The candidature for the subject increased from 296,937 in 2008 to 329,730 in 2009, a increase of 11%.
- 8.1.2 The mean for 233/1 dropped from 18.28 in 2008 to 12.49 in 2009. This was attributed to the candidates' inability to respond appropriately to questions that demanded application of knowledge.
- 8.1.3 The mean for 233/2 dropped slightly from 15.74 in 2008 to 14.93 in 2009.
- 8.1.4 The mean for 233/3 also dropped slightly from 11.46 in 2008 to 10.86 in 2009.
- 8.1.5 The overall mean dropped from 45.48 in 2008 to 38.23 in 2009, a drop attributed mainly to the poor performance in 233/1.

Questions which were poorly performed are discussed below:

8.2 PAPER 1 (233/1)

Question 3

The atomic number of sulphur is 16.

Write the electron arrangement of sulphur in the following:

- (a) H_2S ;
- (b) SO_3^{2-}

In this question, candidates were expected to identify the number of electrons in sulphur in H_2S and SO_3^{2-} hence write the electron arrangement.

Weaknesses

Candidates failed to identify the number of electrons in sulphur in the molecule H_2S and in the radical SO_3^{2-} hence they could not write the correct electron arrangement.

The hydrogen ion usually has a positive charge of +1. Since there are two ions of hydrogen, the total positive charge is +2. H_2S is a neutral molecule. The charge on sulphur must be -2. Sulphur acquires this charge by gaining two electrons. Thus sulphur in H_2S must be having 18 electrons.

In the radical SO_3^{2-} out of a total of -6 charges contributed by oxygen, sulphur was able to neutralize only 4. Sulphur must have been at the oxidation state of +4. Sulphur acquires this oxidation state by losing 4 electrons. Since sulphur initially had 16 electrons, it must now be having 12 electrons.

These weaknesses are normally caused by poor coverage of syllabus. Teachers should endeavor to ensure that the meaning of the term oxidation number is well understood. Familiar examples e.g. CrO_4^{2-} and $\text{Cr}_2\text{O}_7^{2-}$ should be used to explain this term. Candidates should also take time to understand the demands of a question before they begin to write their responses.

Expected Responses

- (a) H_2S 2.8.8
(b) SO_3^{2-} 2.8.2

Question 11

Starting with 50 cm^3 of 2.8 M sodium hydroxide, describe how a sample of pure sodium sulphate crystals can be prepared. (3 marks)

In this question, candidates were required to describe an accurate step by step procedure which can be used to prepare a pure sample of sodium sulphate crystals starting with 50 cm^3 of sodium hydroxide whose concentration is known.

Weaknesses

The candidates could not correctly determine the volume and concentration of sulphuric acid required in order to make a neutral solution. Since they could not make a correct start all other steps whether correct or wrong could not earn marks.

Once more, candidates should read the question carefully and thoughtfully, give it the correct interpretation and then plan on how to proceed in answering it. Questions on preparation of salts require careful step by step procedures. The starting point is very important, if the start is wrong, then the whole procedure is unacceptable and all the marks are lost.

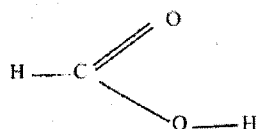
Teachers should expose students to different methods of preparing salts and emphasize on the precautions to be taken in order to achieve the desired salt.

Expected Responses

To 50 cm^3 of 2.8 M sodium hydroxide, add 25 cm^3 of 2.8 M H_2SO_4 or 50 cm^3 of 1.4 M of H_2SO_4 in order to prepare a neutral solution of sodium sulphate. Heat the mixture to concentrate it. Cool it for crystals to form, filter and dry the crystals.

Question 17

The structure of methanoic acid is



What is the total number of electrons used for bonding in a molecule of methanoic acid? Give reasons.

In this question the candidates were required to state the number of electrons used in bonding in a molecule of methanoic acid.

Weaknesses

Majority of the candidates did not know that a single covalent bond is made up of two electrons. This kind of weakness is probably caused by poor teaching. Students learn how a single covalent bond between two hydrogen atoms is formed by sharing two electrons. Models should be used to illustrate bonding in various molecules and a deliberate effort made to show and differentiate between a single, double and triple covalent bonds.

Expected Response

10 electrons

There are three single bonds each consisting of 2 electrons and one double bond consisting of 4 electrons.

Question 24

The boiling points of some compounds of hydrogen with some elements in Groups 4 and 6 of the periodic table are given below.

Compound	Boiling point (°C)	Compound	Boiling point (°C)
CH ₄	-164.0	H ₂ O	100.0
SiH ₄	-112.0	H ₂ S	-61.0

- (a) Which of the compounds CH₄ and SiH₄ has the stronger intermolecular forces?
(d) Explain why the boiling points of H₂O and H₂S show different trends from that of CH₄ and SiH₄.

In this question, candidates were required to:

- (a) Compare the boiling points of CH₄ and SiH₄ and determine which of the two has the stronger intermolecular force of attraction.
(b) Explain why the boiling points of H₂O and H₂S are higher than those of CH₄ and SiH₄.

Weaknesses

- Candidates did not know that the boiling point -112°C is higher than -116°C. Boiling points are a reflection of the strengths of the intermolecular forces of attraction between molecules. In our case, SiH₄ with a boiling point of -112°C has a stronger molecular force of attraction hence requiring more energy to break.
- Candidates did not seem to realize that H₂O and H₂S have much higher boiling points compared to CH₄ and SiH₄. The fact that they have higher boiling points indicate that a different type of bonding exists in them. Both H₂O and H₂S are capable of forming hydrogen bonds. Hydrogen bonds are much stronger than intermolecular forces of attraction and thus require more energy to break them.

The weaknesses shown indicate that the topic is poorly understood by majority of the candidates. Teachers should allocate more time on difficult topics to ensure that the concepts are well understood. More practice is required on questions which show how different types of bonding affect the physical properties of substances. Students with difficulties in understanding these topics should be identified and remedial teaching arranged in order to lift their knowledge of such difficult topics.

Expected Responses

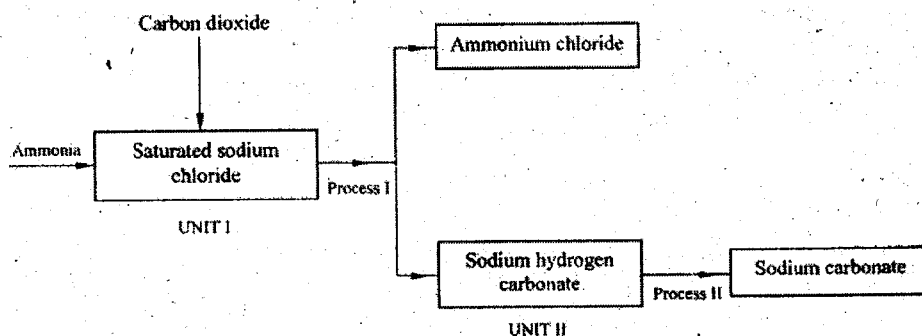
- (a) SiH₄, it has a higher boiling point.
(b) No hydrogen bonding in CH₄ and SiH₄ and that the hydrogen bond in H₂O is stronger than that in H₂S.

8.3 PAPER 2 (233/2)

The most poorly performed questions in this paper were questions 4 and 5. These questions are discussed below:

Question 4

- (a) The schematic diagram shows part of the Solvay process used for the manufacture of Sodium carbonate.



- (i) Explain how the sodium chloride required for this process is obtained from sea water.
- (ii) Two main reactions take place in UNIT 1. The first one is the formation of ammonium hydrogen carbonate.
 - I. Write an equation for this reaction
 - II. Write an equation for the second reaction
- (iii) State how the following are carried out:
 - I. Process I
 - II. Process II
- (iv) In an experiment to determine the percentage purity of the sample of sodium Carbonate produced in the Solvay process, 2.15 g of the sample reacted completely with 40.0 cm³ of 0.5 M sulphuric acid.
 - I. calculate the number of moles of sodium, carbonate that reacted.
 - II. Determine the percentage of sodium carbonate in the sample.
(Na = 23.0, C = 12.0, O = 16.0)

- (b) Name two industrial uses of sodium carbonate (2 marks)

The question required the candidates to:

- Explain how sodium chloride is extracted from sea water.
- Write equations for the reactions which produce ammonium hydrogen carbonate and sodium hydrogen carbonate in the Solvay process.
- Show how ammonium chloride is separated from sodium hydrogen carbonate.
- Determine the percentage of sodium carbonate in the sample obtained.
- State the uses of sodium carbonate.

Weaknesses

- Candidates were not able to recall the method used to extract sodium chloride from sea water. Those who had an idea did not describe the process properly and therefore lost marks.
- The average and below average candidates were not able to write the correct equations for the reactions in which ammonium hydrogen carbonate and sodium hydrogen carbonate are produced.

The kind of weaknesses stated may have occurred due to teaching which is not exhaustive enough. Students and teachers advised that no topic of the set syllabus is exempted from examining. All topics should therefore be given **thorough** coverage during teaching/learning process.

Students are also reminded not to rely on past papers alone. Past papers will generally give an idea of the language used in testing a subject but not the questions that are likely to be set. The questions in the paper will be original and candidates need to be thoroughly prepared.

One of the goals of teaching chemistry is to be able to utilize resources in our environment to obtain goods. Sodium chloride is one of such goods and candidates should have known how it is obtained from the sea water. Equations should always be balanced and have the correct state symbols.

The questions that dealt with separation of mixtures, calculations based on mole concept and the uses of sodium carbonate were well performed.

Expected Responses

4. (a) (i) Pump sea water to shallow ponds, evaporation of H_2O takes place, leaving NaCl to crystallize out.
- (ii) I $\text{NH}_3(\text{g}) + \text{CO}_2(\text{g}) + \text{H}_2\text{O}(\text{l}) \longrightarrow \text{NH}_4\text{HCO}_3(\text{aq})$
 II $\text{NH}_4\text{HCO}_3(\text{aq}) + \text{NaCl}(\text{aq}) \longrightarrow \text{NaHCO}_3(\text{s}) + \text{NH}_4\text{Cl}(\text{aq})$
- (iii) I Filtration
 II Heating
- (iv) I $\text{Na}_2\text{CO}_3(\text{s}) + \text{H}_2\text{SO}_4(\text{aq}) \longrightarrow \text{Na}_2\text{SO}_4(\text{aq}) + \text{CO}_2(\text{g}) + \text{H}_2\text{O}(\text{l})$

$$\text{Moles of } \text{H}_2\text{SO}_4 = \frac{40 \times 0.5}{1000} = 0.02$$

$$\text{Moles of } \text{Na}_2\text{CO}_3 = 0.02$$

$$\text{Mass of } \text{Na}_2\text{CO}_3 = 0.02 \times 106 = 2.12 \text{ g}$$

$$\% \text{ purity} = \frac{2.12}{2.15} \times 100 = 98.6\%$$
- (b) - Glass making
 - Softening water
 - Detergent
 - anti-acid
 - Paper industry etc

Question 5

- (a) Figure 3 shows the changes that take place between states of matter. Some of them have been Identified and others labelled.

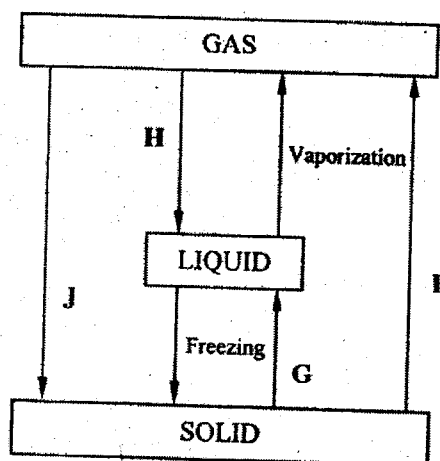


Figure 3

- (i) Give the names of the processes
 I. H
 II. G
- (ii) Name **one** substance that can undergo process F when left in an open container in the laboratory.

- (iii) The process J is called deposition. Using water as an example, write an equation that represents the process of deposition.

(b) Figure 4 shows the heating curve for water.

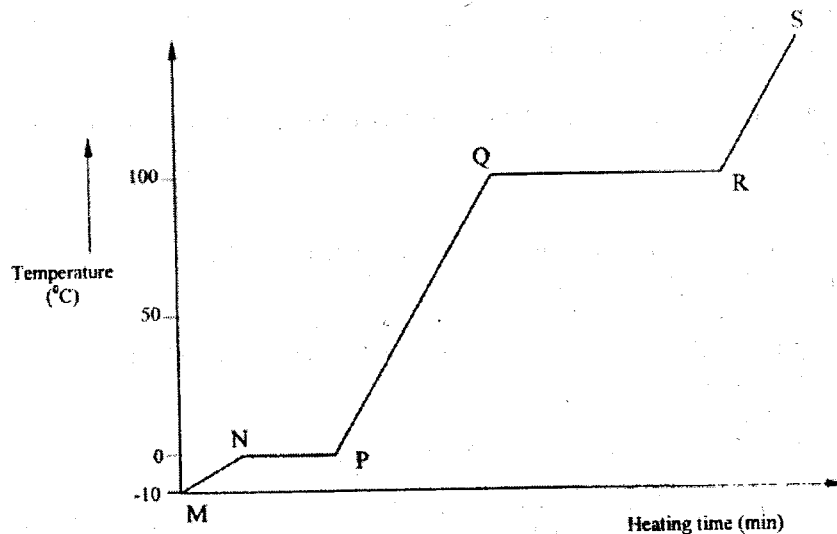


Figure 4

- (i) Give the names of the intermolecular forces of attraction in the segments:
- MN
 - RS
- (ii) The heats of fusion and vaporization of water are 334.4 Jg^{-1} and 1159.4 Jg^{-1} respectively.
- Explain why there is a bit difference between the two
 - How is the difference reflected in the curve?
- (c) Coal, oil and natural gas are major sources of energy. They are known as fossil fuels. Hydrogen is also a source of energy.
- state and explain **two** reasons why hydrogen is a very attractive fuel compared to fossil fuels.
 - State **one** disadvantage of using hydrogen fuel instead of fossil fuels.
- (a) The question required the candidates to study a diagram on changes that take place between states of matter and name specific processes.
- (b) Use the heating for water to show understanding of:
- Intermolecular forces of attraction
 - Heats of fusion of water and vaporization and explain their differences
- (c) Give reasons why hydrogen is a better fuel than fossil fuels
- (d) State why use of hydrogen is not encouraged.

Weaknesses

Candidates performed quite well in parts a(i), (ii), (iii) and part b(i). However they could not:

- Explain why there is a big difference between heat of fusion and heat of vaporization.
- State two reasons why hydrogen is a better fuel compared to fossil fuels.
- They also could not state why using hydrogen is more dangerous than using fossil fuels.

The first weakness is likely to have been caused by use of theoretical teaching as opposed to practical approach. Students should be allowed to carry out experiments to determine the heating/cooling curves of simple substances like water and naphthalene. Detailed explanations of the distinct areas/segments of the curves should

be discussed thoroughly. Questions on such curves for other substances can be given as exercises. The responses are marked and discussed. This enhances the understanding of the topic.

Sources of different fuels, their advantages and disadvantages should be well discussed with particular reference to environmental pollution, cost and any possible dangers they pose.

Expected Responses

- (a) (i) I Condensation
II Melting
(ii) Iodine/ benzoic acid/ Naphthlene/ solid ice/ dry ice
(iii) $\text{H}_2\text{O}_{(g)} \longrightarrow \text{H}_2\text{O}_{(s)}$
- (b) (i) I Van der waals and hydrogen bonding
II Van der waals forces
(ii) I In melting energy is used to overcome the hydrogen bonds and Van der waals forces of attraction.
But during vaporization, extra energy is required to move the molecules away from one-another
II QR is larger than NP
- (c) (i) Hydrogen when burned produces H_2O which is a non-pollutant
Has high energy content. Small amount of hydrogen produces a lot of heat
 H_2 is a renewable energy -- so it cannot be exhausted.
(ii) It can easily explode when burning
OR
High cost of production/ it is expensive

8.4 PAPER 3 (233/3)

1 You are provided with:

- solid A, a metal carbonate M_2CO_3
- solution B, hydrochloric acid for use in Questions 1 and 2
- solution C, 0.30M sodium hydroxide
- methyl orange indicator.

You are required to:

- prepare a dilute solution of hydrochloric acid and determine its concentration;
- determine the solubility of solid A in water.

Procedure:

(Reserve one dry conical flask for use in step 4).

Step 1 Place all of solid A in a 250 ml dry beaker. Add 100 cm^3 of distilled water to solid A in the beaker. Using a glass rod, stir the mixture thoroughly for about two minutes. Leave the mixture to stand and proceed with steps 2 and 3.

Step 2 Using a pipette and a pipette filler, place 25.0 cm^3 of solution B in a 250 ml volumetric flask. Add about 200 cm^3 of distilled water. Shake the mixture well and add distilled water to make up to the mark. Label this as solution D.

Step 3 Fill a burette with solution C. Using a pipette and a pipette filler, place 25.0 cm^3 of solution D into a 250ml conical flask. Add two drops of the indicator provided and titrate solution D with solution C. Record your results in Table 1. Repeat the titration two more times and complete Table 1. Retain the remaining solution D for use in step 5.

Step 4 Filter the mixture obtained in step 1 using a dry filter funnel into a dry conical flask. Label the filtrate as solution A.

Step 5 Clean the burette and fill it with solution D. Using a pipette and a pipette filler, place 25.0 cm^3 of solution A into a 250ml conical flask. Add two drops of the indicator provided and titrate solution A with solution D. Record your results in Table 2. Repeat the titration two more times and complete Table 2.

Table 1

	I	II	III
Final burette reading			
Initial burette reading			
Volume of solution C used (cm^3)			

- (a) Calculate:
- average volume of solution C used
 - moles of sodium hydroxide in the average volume of solution C used
 - moles of hydrochloric acid in 25.0 cm^3 of solution D.
 - the molarity of hydrochloric acid, solution D

Table 2

	I	II	III
Final burette reading			
Initial burette reading			
Volume of solution D used (cm^3)			

- (b) Calculate:
- average volume of solution D used
 - moles of hydrochloric acid in the average volume of solution D used
 - moles of the metal carbonate, solid A in 25.0 cm^3 of solution A
 - the solubility of the metal carbonate, solid A in water.
(Relative forcular mass of metal carbonate = 74, assume density of solution = 1 g/cm^3)

In this question, the candidates were required to use a described procedure in order to:

- Prepare a dilute solution of hydrochloric acid and determine its concentration.
- Use the diluted hydrochloric acid whose concentration has been determined to find the solubility of a metal carbonate M_2CO_3 .

Weaknesses

Most of the candidates were able to use the correct apparatus to prepare the diluted hydrochloric acid, carry out titrations as per the instructions and record the results correctly in the correct tables. Though the results obtained were accurate, few candidates were not able to apply their knowledge on mole concept in order to calculate the concentration of the dilute hydrochloric acid, hence the solubility of the metal carbonate M_2CO_3 .

For many years, the mole concept has been a problem to many candidates

Teachers should set aside adequate time for practicals in quantitative analysis. They should use past papers as examples as well as practicals described in standard text books. Each student should be allowed to carry out the exercises individually. Results of the practical lessons should be discussed immediately.

More questions based on the mole concept should then be given. Individual areas of weaknesses should be identified and the candidates given remedial teaching.

Question 2

You are provided with solid E. Carry out the following tests and write your observations and inferences in the spaces provided.

- (a) Place about one-half of solid E in a dry test-tube. Heat it strongly and test any gas produced using hydrochloric acid, solution B on a glass rod.

Observations

Inferences

(2 marks)

(1 mark)

- (b) Place the rest of solid E in a boiling tube. Add about 10cm^3 of distilled water. Shake well and use 2cm^3 portions for each of the tests below.

- (i) To one portion, add aqueous ammonia dropwise until in excess.

Observations

Inferences

(1 mark)

(1 mark)

- (ii) To a second portion, add about 1cm^3 of hydrochloric acid, solution B.

Observations

Inferences

(1 mark)

(2 marks)

- (iii) To a third portion, add two drops of aqueous lead (II) nitrate and heat the mixture to boiling.

Observations	Inferences
(1 mark)	(1 mark)

Question 2 was on qualitative analysis. The candidates were required to:

- Carry out described tests;
- Write correct observations using scientific language;
- Draw logical conclusions from the observations made.

Weaknesses

- Candidates failed to write the correct observations using acceptable scientific language.
- They also failed to draw logical inferences from the observations.

The weaknesses stated above are likely to have been caused by lack of exposure to practical work during teaching/learning process.

Students should be allowed to use simple apparatus and chemicals to carry out experiments **individually** during learning. This is the only way they would master the psychomotor skills tested during practical examinations.

They should be encouraged to use **all** necessary precautions in order to obtain accurate observations and use correct descriptions of the observations e.g. question 2(a), on heating solid E one of the observations was 'a colourless liquid forms on the cooler part of the test tube'. But many candidates wrote 'water forms on the cooler part of the test tube'!

Once more, teachers and students are reminded that unless the observations are accurate and are correctly described, the inference **cannot** be correct and therefore **all** the marks are lost.

Candidates also lost marks because they could not draw logical inferences e.g. Question 2b(i), they were asked to add aqueous ammonia dropwise until in excess to a solution of Solid E in water. Candidates should know that aqueous ammonia is used to primarily show the presence or absence of Zn^{2+} , Pb^{2+} or Al^{3+} ions depending on the observations. In this case a white ppt was formed. The ppt did not dissolve in excess. The only logical inference was Pb^{2+} or Al^{3+} present or Zn^{2+} Absent. Some candidates knew the correct inference but did not write the correct formula of the ion. It is important to write the correct formula of ions e.g. Al^{3+} and not AL^{3+} .

In question 2b(ii) candidates were asked to add 1 cm^3 of dilute hydrochloric acid to a solution of E in water. In this case the correct observations were:

- No white ppt formed
- No effervescence

The fact that there was no white ppt can only mean that the cation in solid E cannot be Pb^{2+} . It can only be Al^{3+} because AlCl_3 is soluble. Al^{3+} had been implied in question 2b(i). Candidates who inferred presence of Mg^{2+} , Ca^{2+} etc had not connected the observations and inferences in question 2b(i) to those in question 2b(ii). Also the fact that there was no effervescence meant that the anion in solid E cannot be CO_3^{2-} or SO_3^{2-} . It could be a SO_4^{2-} .

Expected Responses

Observations		Inferences
2. (a)	<ul style="list-style-type: none">a colourless liquid condenses on the cooler parts of the test tubeGas produced forms white fumes with HCl	Hydrated salt/compound ammonia
b (i)	White ppt insoluble in excess	Pb^{2+} or Al^{3+}
(ii)	No white ppt No effervescence	Pb^{2+} Absent or Al^{3+} Present CO_3^{2-} - Absent
(iii)	White ppt	SO_4^{2-} - Present

8.5 ADVICE TO TEACHERS

It is necessary for teachers of science to use the practical approach method during teaching and learning. Students should be allowed to experiment, discover and develop creative critical thinking skills required in the education system. Schools should provide adequate equipment and chemicals for use during teaching and practical examinations. It is unfair for candidates to see some apparatus for the first time during examinations.

All topics should be given thorough evaluation. Students with particular weaknesses should be identified early enough. Remedial teaching should be arranged and carefully executed if good results are to be expected.

29.6.2 Chemistry Paper 2 (233/2)

- 1 (a) Two reagents that can be used to prepare chlorine gas are manganese (IV) oxide and concentrated hydrochloric acid.
- (i) Write an equation for the reaction. (1 mark)
- (ii) Give the formula of another reagent that can be reacted with concentrated hydrochloric acid to produce chlorine gas. (1 mark)
- (iii) Describe how the chlorine gas could be dried in the laboratory. (2 marks)
- (b) In an experiment, dry chlorine gas was reacted with aluminium as shown in figure 1.

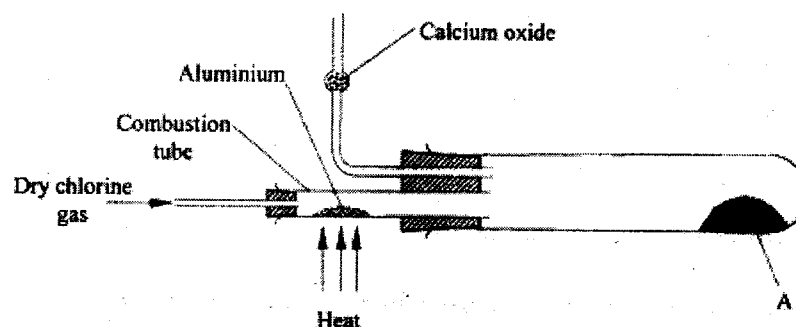
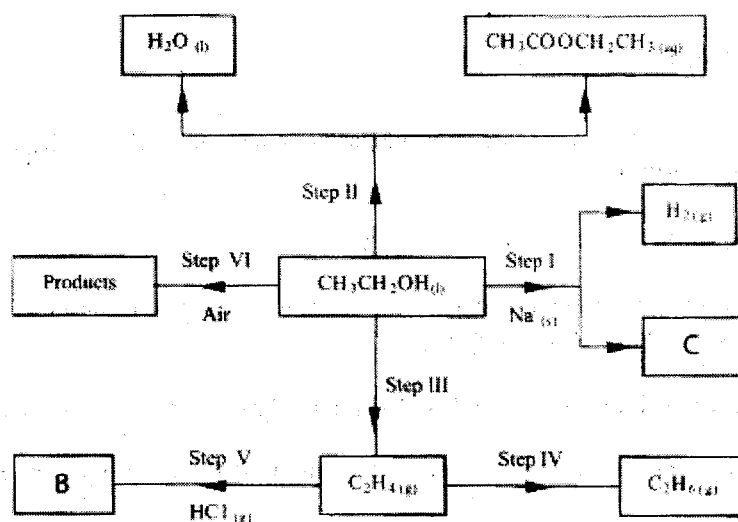


Figure 1

- (i) Name substance A. (1 mark)
- (ii) Write an equation for the reaction that took place in the combustion tube. (1 mark)
- (iii) 0.84 g of aluminium reacted completely with chlorine gas. Calculate the volume of chlorine gas used (Molar gas volume is 24dm^3 , $\text{Al} = 27$). (3 marks)
- (iv) Give two reasons why calcium oxide is used in the set up. (2 marks)
- 2 (a) Draw the structures of the following compounds: (2 marks)
- (i) 2-methylbut-2-ene;
- (ii) heptanoic acid.
- (b) Describe a physical test that can be used to distinguish between methanol and hexanol. (2 marks)
- (c) Use the flow chart below to answer the questions that follow.



- (i) Name:
- the type of reaction that occurs in step II; (1 mark)
 - substance B. (1 mark)
- (ii) Give the formula of substance C. (1 mark)
- (iii) Give the reagent and the conditions necessary for the reaction in step (IV). (3 marks)

3 The set-up below (Figure 2) was used to electrolyse a bromide of metal D, DBr₂.

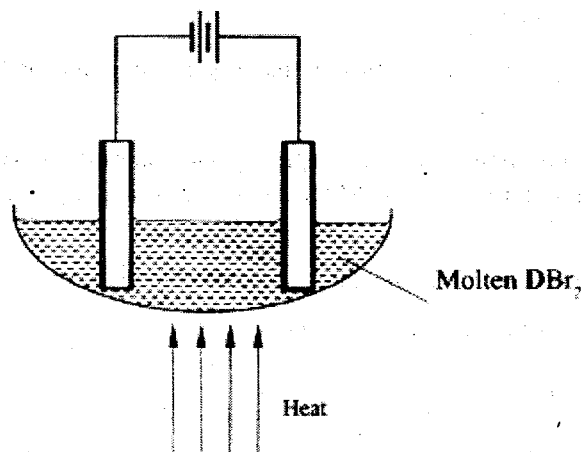


Figure 2

- (i) Write equations for the reactions at the:
- cathode (1 mark)
 - anode. (1 mark)
- (ii) The electrodes used in the experiment were made of carbon and metal D. Which of the two electrodes was used as the anode? Give a reason. (2 marks)

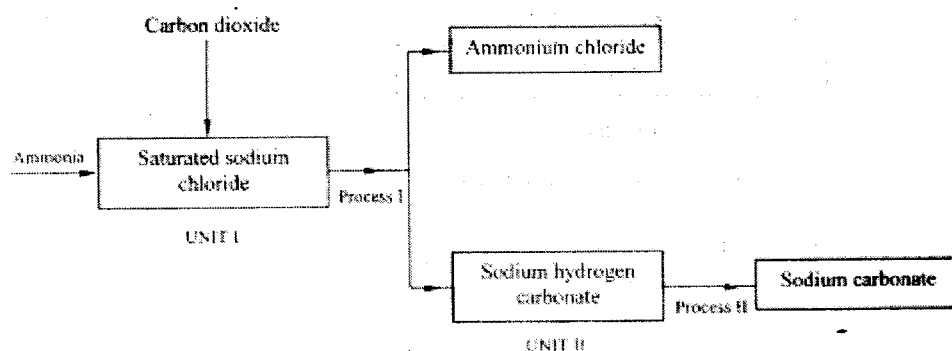
(iii) Give a reason why this experiment is carried out in a fume cupboard. (1 mark)

(iv) When a current of 0.4 A was passed for 90 minutes, 2.31 g of metal D were deposited.

I Describe how the amount of metal D deposited was determined. (3 marks)

II Calculate the relative atomic mass of metal D. (1 Faraday = 96500 coulombs). (3 marks)

4 (a) The schematic diagram shows part of the Solvay process used for the manufacture of sodium carbonate.



(i) Explain how the sodium chloride required for this process is obtained from sea water. (2 marks)

(ii) Two main reactions take place in UNIT I. The first one is the formation of ammonium hydrogen carbonate.

I Write an equation for this reaction. (1 mark)

II Write an equation for the second reaction. (1 mark)

(iii) State how the following are carried out: (2 marks)

I Process I

II Process II

(iv) In an experiment to determine the percentage purity of the sample of sodium carbonate produced in the Solvay process, 2.15 g of the sample reacted completely with 40.0 cm³ of 0.5 M sulphuric acid.

I Calculate the number of moles of sodium carbonate that reacted. (2 marks)

II Determine the percentage of sodium carbonate in the sample. (Na = 23.0, C=12.0, O=16.0) (2 marks)

(b) Name two industrial uses of sodium carbonate. (2 marks)

- 5 (a) **Figure 3** shows the changes that take place between states of matter. Some of them have been identified and others labelled.

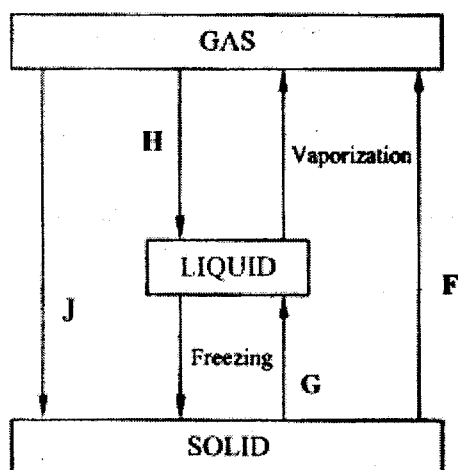


Figure 3

- (i) Give the names of the processes:
- I **H** (1 mark)
- II **G** (1 mark)
- (ii) Name one substance that can undergo process F when left in an open container in the laboratory. (1 mark)
- (iii) The process J is called deposition. Using water as an example, write an equation that represents the process of deposition. (1 mark)
- (b) **Figure 4** shows the heating curve for water.

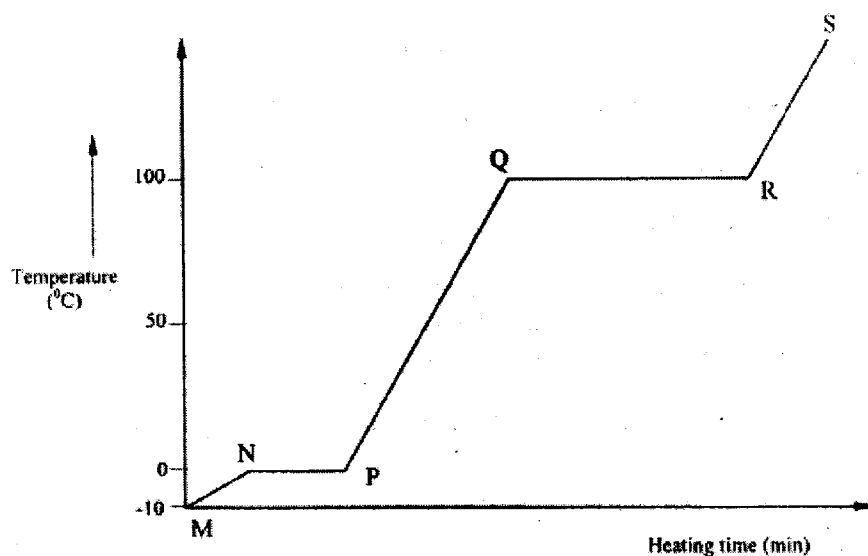


Figure 4

- (i) Give the names of the intermolecular forces of attraction in the segments:

I MN (1 mark)

II RS. (1 mark)

- (ii) The heats of fusion and vaporisation of water are 334.4 Jg^{-1} and 1159.4 Jg^{-1} respectively.

I Explain why there is a big difference between the two. (2 marks)

II How is the difference reflected in the curve? (1 mark)

- (c) Coal, oil and natural gas are major sources of energy. They are known as fossil fuels. Hydrogen is also a source of energy.

(i) State and explain two reasons why hydrogen is a very attractive fuel compared to fossil fuels. (3 marks)

(ii) State one disadvantage of using hydrogen fuel instead of fossil fuels. (1 mark)

- 6 (a) Study the table below and complete it. (W^- and X^{4+} are not the actual symbols of the ions). (2 marks)

Ion	Number of protons	Number of neutrons	Mass Number	Electron arrangement
W^-	20	2.8.8
X^{4+}	14	28

- (b) State the observations that would be made in the following tests to distinguish between metals:

(i) Sodium and copper by burning small pieces of each in air. (2 marks)

(ii) Sodium and Magnesium by placing small pieces of each in cold water which contains two drops of phenolphthalein. (2 marks)

- (c) The atomic numbers of Na and Mg are 11 and 12 respectively. Which of the elements has a higher ionisation energy? Explain. (2 marks)

- (d) Naturally occurring uranium consists of three isotopes which are radioactive.

Isotope	^{234}U	^{235}U	^{238}U
Abundance	0.01%	0.72%	99.27%

- (i) Which of these isotopes has the longest half-life? Give a reason. (1 mark)
- (ii) Calculate the relative atomic mass of uranium. (2 marks)
- (iii) $^{235}_{92}\text{U}$ is an alpha emitter. If the product of the decay of this nuclide is thorium (Th). Write a nuclear equation for the process. (1 mark)
- (iv) State one use of radioactive isotopes in the paper industry. (1 mark)

7. Iron is obtained from haematite using a blast furnace shown in figure 5 below.

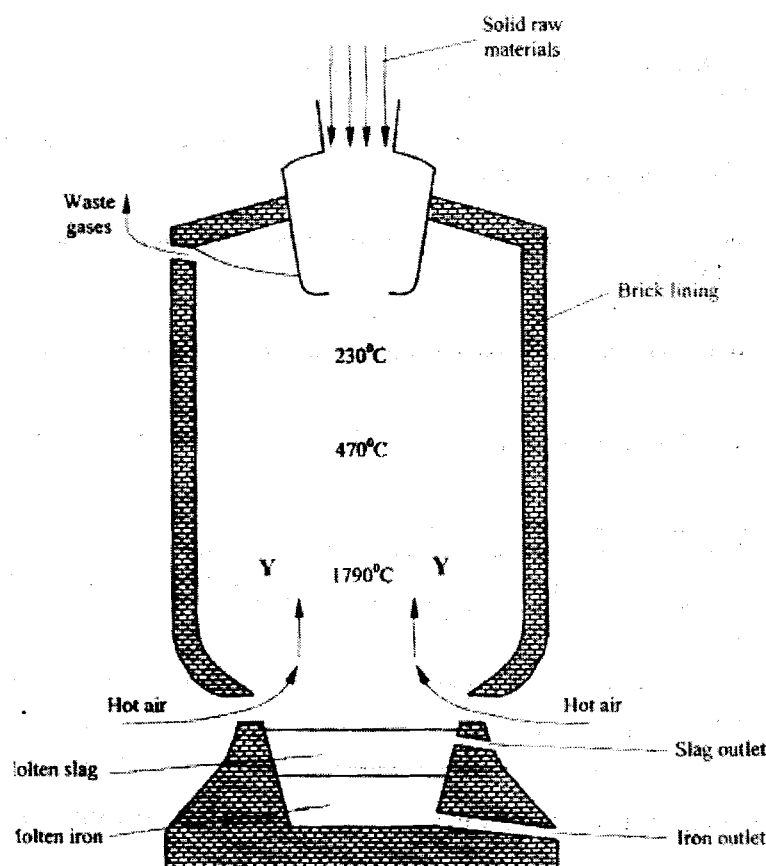


Figure 5

- (a) Four raw materials are required for the production of iron. Three of these are iron oxide, hot air and limestone. Give the name of the fourth raw material. (1 mark)
- (b) Write an equation for the reaction in which carbon (IV) oxide is converted into carbon (II) oxide. (1 mark)
- (c) Explain why the temperature in the region marked Y is higher than that of the incoming hot air. (2 marks)
- (d) State one physical property of molten slag other than density that allows it to be separated from molten iron as shown in figure 5. (1 mark)

- (e) One of the components of the waste gases is Nitrogen (IV) oxide.
Describe the adverse effects it has on the environment. (2 marks)
- (f) Iron from the blast furnace contains about 5% carbon.
- (i) Describe how the carbon content is reduced. (2 marks)
- (ii) Why is it necessary to reduce the carbon content? (1 mark)

29.6.3 Chemistry Paper 3 (233/3)

1 You are provided with:

- solid A, a metal carbonate M_2CO_3
- solution B, hydrochloric acid for use in Questions 1 and 2
- solution C, 0.30M sodium hydroxide
- methyl orange indicator.

You are required to:

- prepare a dilute solution of hydrochloric acid and determine its concentration;
- determine the solubility of solid A in water.

Procedure:

(Reserve one dry conical flask for use in step 4).

Step 1 Place all of solid A in a 250 ml dry beaker. Add 100 cm^3 of distilled water to solid A in the beaker. Using a glass rod, stir the mixture thoroughly for about two minutes. Leave the mixture to stand and proceed with steps 2 and 3.

Step 2 Using a pipette and a pipette filler, place 25.0 cm^3 of solution B in a 250 ml volumetric flask. Add about 200 cm^3 of distilled water. Shake the mixture well and add distilled water to make up to the mark. Label this as solution D.

Step 3 Fill a burette with solution C. Using a pipette and a pipette filler, place 25.0 cm^3 of solution D into a 250ml conical flask. Add two drops of the indicator provided and titrate solution D with solution C. Record your results in Table 1. Repeat the titration two more times and complete Table 1. Retain the remaining solution D for use in step 5.

Step 4 Filter the mixture obtained in step 1 using a dry filter funnel into a dry conical flask. Label the filtrate as solution A.

Step 5 Clean the burette and fill it with solution D. Using a pipette and a pipette filler, place 25.0 cm^3 of solution A into a 250ml conical flask. Add two drops of the indicator provided and titrate solution A with solution D. Record your results in Table 2. Repeat the titration two more times and complete Table 2.

Table 1

	I	II	III
Final burette reading			
Initial burette reading			
Volume of solution C used (cm^3)			

(4 marks)

(a) Calculate:

- average volume of solution C used; (1 mark)
- moles of sodium hydroxide in the average volume of solution C used; (1 mark)
- moles of hydrochloric acid in 25.0 cm^3 of solution D; (1 mark)

(iv) the molarity of hydrochloric acid, solution D.

(1 mark)

Table 2

	I	II	III
Final burette reading			
Initial burette reading			
Volume of solution D used (cm ³)			

(4 marks)

(b) Calculate:

(i) average volume of solution D used;

(1 mark)

(ii) moles of hydrochloric acid in the average volume of solution D used;

(1 mark)

(iii) moles of the metal carbonate, solid A in 25.0cm³ of solution A;

(2 marks)

(iv) the solubility of the metal carbonate, solid A in water.

(Relative formula mass of metal carbonate = 74, assume density of solution = 1g/cm³).

(2 marks)

2 You are provided with solid E. Carry out the following tests and write your observations and inferences in the spaces provided.

(a) Place about one-half of solid E in a dry test-tube. Heat it strongly and test any gas produced using hydrochloric acid, solution B on a glass rod.

Observations

Inferences

(2 marks)

(1 mark)

(b) Place the rest of solid E in a boiling tube. Add about 10cm³ of distilled water. Shake well and use 2cm³ portions for each of the tests below.

(i) To one portion, add aqueous ammonia dropwise until in excess.

Observations

Inferences

(1 mark)

(1 mark)

(ii) To a second portion, add about 1cm³ of hydrochloric acid, solution B.

Observations

Inferences

(1 mark)

(2 marks)

(iii) To a third portion, add two drops of aqueous lead (II) nitrate and heat the mixture to boiling.

Observations

Inferences

(1 mark)

(1 mark)

- 3 You are provided with solid F. Carry out the following tests and record your observations and inferences in the spaces provided.

- (a) Place about one half of solid F in a dry test-tube. Retain the other half of solid F for use in (b). Add all of the absolute ethanol provided to solid F in the test-tube. Shake the mixture.

Observations

(1 mark)

Inferences

(1 mark)

Divide the mixture into two portions.

- (i) Determine the P^H of the first portion using universal indicator solution and a P^H chart.

Observations

(1 mark)

Inferences

(1 mark)

- (ii) To the second portion, add one half of the solid sodium hydrogen carbonate provided.

Observations

(1 mark)

Inferences

(1 mark)

- (b) Place the remaining amount of solid F in a boiling tube. Add 10cm^3 of distilled water and shake. Boil the mixture and divide it into three portions while still warm.

- (i) To the first portion, add the remaining amount of solid sodium hydrogen carbonate.

Observations

(1 mark)

Inferences

(1 mark)

- (ii) To the second portion, add three drops of acidified potassium dichromate (VI) solution and warm.

Observations

(1 mark)

Inferences

(1 mark)

- (iii) To the third portion, add five drops of bromine water.

Observations

(1 mark)

Inferences

(1 mark)

30.6 CHEMISTRY (233)

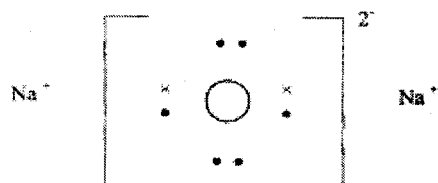
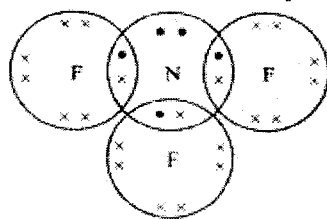


MANYAM FRANCHISE
Discover! Learn! Apply

30.6.1 Chemistry Paper 1 (232/1)

1. (a) Energy required to remove 1 mole of electrons from 1 mole of gaseous atoms. (1 mark)
- (b) B (l)
It loses electrons most readily (1) (2 marks)
2. (a) $\text{Ca}(\text{HCO}_3)_2(\text{aq}) \longrightarrow \text{CaCO}_3(\text{s}) + \text{H}_2\text{O}(\text{l}) + \text{CO}_2(\text{g}) /$
 $\text{Mg}(\text{HCO}_3)_2(\text{aq}) \longrightarrow \text{MgCO}_3(\text{s}) + \text{H}_2\text{O}(\text{l}) + \text{CO}_2(\text{g})$ (1 mark)
- (b) Sodium carbonate (1)
Calcium hydroxide (1)
(Accept correct formulae) (2 marks)
3. (i) 2.8.8
(ii) 2.8.2 (2 marks)
4. (a) Water (1) (1 mark)
- (b) The second/other product of burning candle is carbon (IV) oxide (1). It can be prevented from getting into the environment by passing it through a hydroxide solution/alkaline solution e.g. KOH, NaOH or aqueous ammonia. (1) (2 marks)
5. Oxygen exists as diatomic molecules/simple molecules ($\frac{1}{2}$)
The forces of attraction between the molecules are very weak ($\frac{1}{2}$) therefore less energy is required to separate them ($\frac{1}{2}$).
Atoms in sodium are held by strong metallic bonds (1). These require a lot of energy to break them. ($\frac{1}{2}$) (3 marks)
6. ${}_{30}^{64}\text{E}^{2+}$ $\frac{1}{2}$ mark for 30, 64 + $\frac{1}{2}$ for E^{2+} (1 mark)
7. (a) $\text{Al}^{3+}_{(\text{l})} + 3\text{e} \longrightarrow \text{Al}_{(\text{s})}$ (1)
- (b) 27 g requires 3 Faradays (1)
 $\therefore 1800 \times 1000\text{g}$ require $\frac{3 \times 1800 \times 1000}{27}$ ($\frac{1}{2}$)
 $= 2 \times 10^5$ Faradays ($\frac{1}{2}$) (3 marks)

8.



(2 marks)

9. (a) Heat change when one mole of a solute dissolves in excess of the solvent (1)

(b) (i) $\Delta H_1 = +733 \text{ kJ mol}^{-1}$
 $\Delta H_2 = -406 \text{ kJ mol}^{-1}$
 $\Delta H_3 = -335 \text{ kJ mol}^{-1}$ } (1½)

(c) Molar heat of solution

$$733 - (+406 + 335) = 733 - 406 - 335$$

$$= -8 \text{ kJ mol}^{-1} \text{ (½)}$$

(3 marks)

10. At anode $4\text{OH}^-_{(aq)} \rightarrow 2\text{H}_2\text{O}_{(l)} + \text{O}_{2(g)} + 4e^-$ (1)

At cathode $4\text{H}^+_{(aq)} + 4e^- \rightarrow 2\text{H}_{2(g)}$

OR

$4\text{OH}^-_{(aq)} + 4\text{H}^+_{(aq)} \rightarrow 2\text{H}_2\text{O}_{(l)} + \text{O}_{2(g)} + 2\text{H}_{2(g)}$ (1)

Therefore for every one mole of oxygen gas produced, two moles of hydrogen gas are produced.

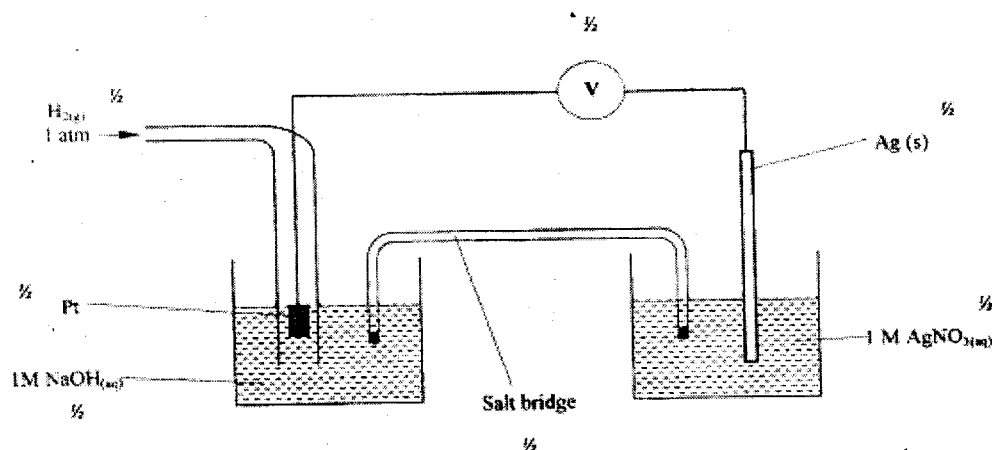
(2 marks)

11.

- To 50 cm^3 of 2.8 M NaOH , add 25 cm^3 of $2.8 \text{ M H}_2\text{SO}_4$ OR 50 cm^3 of $1.4 \text{ M H}_2\text{SO}_4$ (1)
- Heat mixture to concentrate (½)
- Cool it for crystals to form (½)
- Filter (½)
- Dry the residue (½)

(3 marks)

12.



Max. 3 marks

13. Moles of oxygen $= \frac{0.83}{32} = 0.02594$ (½)

Moles of $\text{NaNO}_3 = 2 \times 0.02594$ (½)
 $= 0.05188$

R.M.M. of $\text{NaNO}_3 = 85$

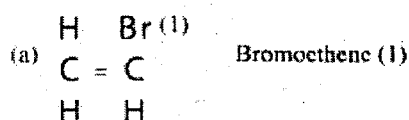
Mass of NaNO_3 converted $= 0.05188 \times 85$ (½)
 4.4098 (½)

% $= \frac{4.4098}{8.53} \times 100$ (½)

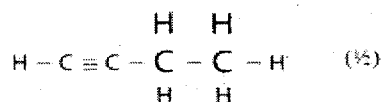
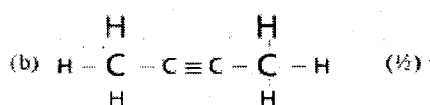
$= 51.698\%$ (½)

(3 marks)

14.



(2 marks)



(1 mark)

15. (a) The gas burns with a blue flame (1)

(b) (i) The iron is less reactive than magnesium (1)

(ii) Heat the iron powder (1)

(3 marks)

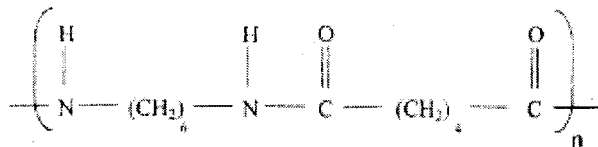
16. (a) To be read from graph (x) = 79 g/100g water

(1 mark)

- (b) R.M.M. of $\text{KNO}_3 = 101$ (½ mark)
Molar concentration = $\frac{79}{101} \times 10$ (1 mark)
= 7.82 M (½ mark)
17. 10 electrons (1)
Single bonds constitute 2 electrons } (1)
Double bond 4 electrons } (2 marks)
- 18.
- | Bottle | Correct Label | |
|--------|------------------|--|
| 1 | Sodium chloride | |
| 2 | Sugar | |
| 3 | Sodium carbonate | |
- (3 marks)
19. (a) Catalyst (1)
(b) Add bromine water or acidified potassium manganate (VII) (1) if they decolourise, (½) then gas is either an alkene or an alkyne (½) 3 marks
20. (a) Chemical change
(b) Physical change
(c) Chemical change (3 marks)
21. Magnesium Phosphide (1 mark)
22. Tests 2 (½) and 3 (½) for test 2 iron is above hydrogen in the reactivity series hence it displaces hydrogen (1). For test 3, dilute sulphuric acid is not an oxidizing agent (1). (3 marks)
23. (a) Pale green solution (½), turns yellow (½)
(b) Sodium hydroxide (1)
(c) Water (1) (3 marks)
24. (a) SiH_4 (silane) (½), it has a higher boiling point (½)
(b) No hydrogen bonding in CH_4 and SiH_4 (1) while the hydrogen bond in H_2O is stronger than that in H_2S (1) (3 marks)
25. (a) Colourless solution becomes brown/black (½)
 $\text{I}_2(\text{aq})/(\text{s})$ (½) (3 marks)
(b) Blue Ppt dissolving to form a deep blue solution (1) $\text{Cu}(\text{NH}_3)_4^{2+}$ (1) (3 marks)
26. (a) Temperature and pressure are directly proportional (1)
(b) With increase in temperature, the gas particles gain more Kinetic energy (1)
They move faster and collide with the walls of the container more frequently hence increasing pressure (1) (3 marks)
27. The amount of hydrogen would reduce (1) increase in pressure shifts the reaction to the side with fewer molecules (1) (2 marks)
28. (a) Energy of the activated/intermediate complex of the uncatalysed reaction (1)

- (b) Catalyst lowers the activation energy (1) therefore more molecules will take part in effective collision (1) **(3 marks)**

29. (a)



- (b) Making synthetic fibre such as for
 - rope
 - blouses
 - stockings **(2 marks)**

30. (a) Crush the roses with a suitable solvent (½) Filter to obtain pigment (½)

- (b) Add pigment to an acid (1). It turns red (1)

30.6.2 Chemistry Paper 2 (233/2)

1. (a) (i) $\text{MnO}_{2(s)} + 4\text{HCl}_{(aq)} \rightarrow \text{MnCl}_{2(aq)} + \text{Cl}_{2(g)} + 2\text{H}_2\text{O}_{(l)}$ **(1 mark)**
 (ii) $\text{KMnO}_4/\text{PbO}_2/\text{CaOCl}_2$ **(1 mark)**
 (iii)
 (iv) Chlorine gas is passed through a U-tube containing anhydrous CaCl_2 , or Cl_2 is passed through conc. H_2SO_4 in a flask. **(2 marks)**

Or accept any other correct method.

- (b) (i) A – Aluminium chloride/ $\text{AlCl}_{3(g)}$ **(1 mark)**

- (ii) $2\text{Al}_{(s)} + 3\text{Cl}_{2(g)} \rightarrow 2\text{AlCl}_{3(s)}$ **(1 mark)**

- (iii) Moles of aluminium metal used = $\frac{0.84}{27} = 0.0311$ **(1 mark)**

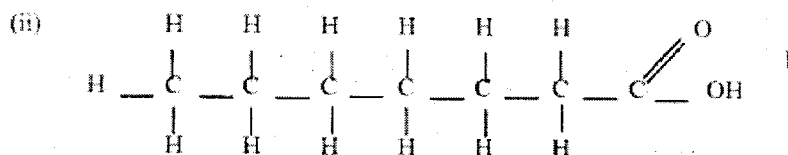
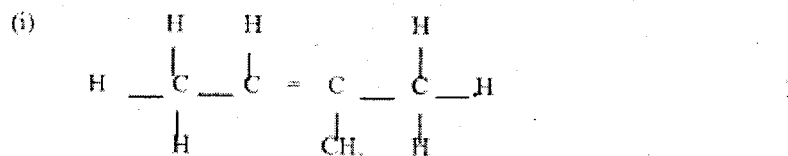
$$\text{Condensed form} = \frac{0.84}{27} \times \frac{3}{2} \times 24 = 1.12 \text{ dm}^3$$

$$\text{Moles of Cl}_2 \text{ gas} = 0.0311 \times \frac{3}{2} = 0.047 \quad \textbf{(1 mark)}$$

$$\therefore \text{Vol. of Cl}_2 = 0.047 \times 24 = 1.12 \text{ dm}^3 \quad \textbf{(1 mark)}$$

- (v)
 - prevent moisture or water vapour from entering the apparatus by absorbing it
 - prevent the hydrolysis of AlCl_3
 - to react with excess chlorine hence prevent environmental pollution
 - prevent pollution by Cl_2 **(2 marks)**

2. (a)



(b) Determine the boiling points of the two alkanols. Hexanol has the highest boiling point. (2 marks)

OR

Add equal amount of water to equal amounts of alkanos and shake. For hexanol, two layers of liquid are formed, methanol forms no layers.

Determine the density of the two alkanols. Hexanol has a higher density than methanol.

Refractive index /m.p.

(c) (i) I Esterification/Condensation (1 mark)

II Chloroethane ($\text{CH}_3\text{CH}_2\text{Cl}$) (1 mark)

Or

Monochloroethane $\text{C}_2\text{H}_5\text{Cl}$

(ii) Sodium ethoxide ($\text{CH}_3\text{CH}_2\text{ONa}$) or $\text{C}_2\text{H}_5\text{ONa}^-$ (1 mark)

(iii) H_2 High Temperature ($150 - 250^\circ$), High pressure ($200 - 300_{\text{at}}$)

Note: - Correct reagent (H_2) -----
 - Correct catalyst
 - High temperature ($150-250^\circ$)/High pressure ($200 - 300_{\text{at}}$) (3 marks)

3. (a) (i) (I) $\text{D}_{(\text{l})}^{2+} + 2\text{e}^- \longrightarrow \text{D}(\text{s})$ (1 mark)

(II) $2\text{Br}^-_{(\text{l})} \longrightarrow \text{Br}_{2(\text{g})} + 2\text{e}^-$ (1 mark)

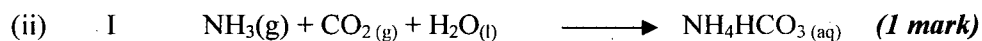
(ii) Anode – Carbon
 Reason: it will not be attacked by/react with bromine gas. (2 marks)

(iii) Bromine gas is poisonous (1 mark)

(iv) I Weigh the cathode metal D before the start of the experiment
 Weigh the cathode after the experiment
 Then get the difference (3 marks)


$$\begin{aligned}
 \text{II} \quad Q &= \text{It} \\
 &= 0.4 \times 90 \times 60 = 2160^\circ\text{C} \quad (1) \\
 1 \text{ mole of D} &= 96500 \\
 \text{R.A.M.} &= \frac{2.31 \times 2 \times 96500}{2160} \quad (1) \\
 &= 206.4 \quad (1) \quad (3 \text{ marks})
 \end{aligned}$$

4. (a) (i) Pump sea water to shallow pond (1), evaporation of H_2O takes place, leaving NaCl to crystallize out (1). (2 marks)



(iii) I Filtration (1 mark)

II Heating (1 mark)



$$\text{Moles of } \text{H}_2\text{SO}_4 = \frac{40 \times 0.5}{1000} = 0.02 \quad (1/2)$$

$$\text{Moles of } \text{Na}_2\text{CO}_3 = 0.02 \quad (1/2) \quad (2 \text{ marks})$$

$$\text{II} \quad \text{Mass of } \text{Na}_2\text{CO}_3 = 0.02 \times 106 = 2.12 \text{ g} \quad (1)$$

$$\% \text{ purity} = \frac{2.12}{2.15} \times 100 = 98.6\% \quad (1) \quad (2 \text{ marks})$$


(b)

- Glass making
- Softening water
- Detergent
- Drugs
- anti-acid
- Textile industry
- Photography
- Paper industry
- In the manufacture of NaOH
- used as a food additive (2 marks)

5. (a) (i) I Condensation (1 mark)

II Melting (1 mark)

(ii) Iodine/ benzoic acid/ Naphthlene/ solid ice/ dry ice (1 mark)



(b) (i) I Van der waals and hydrogen bonding (1 mark)

II Van der waals forces (1 mark)

(ii) I In melting, H-bond & Van der waals are weakened. (2 marks)

In vaporisation, H-bond & Van der waals are broken

II OR is larger than NP OR heating time for QR is

bigger than that of NP

(1 mark)

- (c) (i) Hydrogen when burned produces H_2O which is a non-pollutant (1)
Has high energy content. Small amount of hydrogen produces a lot of energy (1)
 H_2 is a renewable energy – so it cannot be exhausted. (1)

(3 marks)

- (ii) It can easily explode when burning
OR

Accept high cost of production/ it is expensive

1 mark

6.

Ion	Number of protons	Number of neutrons	Mass number	Electron arrangement
W	17 ($\frac{1}{2}$)	20	37 ($\frac{1}{2}$)	2.8.8
X^{4+}	14	14 ($\frac{1}{2}$)	28	2.8. ($\frac{1}{2}$)

(2 mark)

- (b) (i) Sodium burns with a **yellow flame** and changes from grey to White powder

(1 mark)

Copper burns with a **green/blue** flame and changes from brown to a **black** powder

(1 mark)

Sodium: Rapid effervescence, darts or floats on the water surface

: The solution turns pink immediately

(1 mark)

Magnesium: Sinks in the water

: Slow effervescence – the solution turns pink gradually

(1 mark)

- (c) Magnesium (1)
It has a higher nuclear attraction charge which pulls outer elections strongly (1)

(2 marks)

- (d) (i) It is $^{238}_{92}Y$ For highest abundance

(1 mark)

- (ii) The relative atomic mass of Uranium is

$$= \frac{(0.001 \times 234) + (0.727) + (99.27 \times 238)}{100} (1)$$

$$= 237.978 (1)$$

(2 marks)



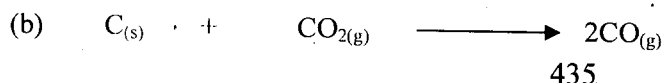
(1 mark)

- (iv) Control thickness of paper

(1 mark)

7. (a) Coke/coal/charcoal/carbon

(1 mark)



(1 mark)

- (c) The reaction between coke/carbon and the incoming hot air is highly exothermic (2 marks)
- (d) Slag is immiscible with molten iron (1 mark)
- (e) Nitrogen (IV) oxide forms acid rain which corrodes metallic materials and destroys vegetation in the environment, aquatic life) (2 marks)
- Or
NO₂ is toxic/poisonous – causes bronchitis, respiratory diseases
- (f) (i) By passing or throwing in oxygen through molten iron which converts carbon into carbon (IV) oxide (2 marks)
- (ii) To increase the tensile strength of the iron produced (1 mark)
- Or
Make the material more brittle
- Or
Makes it more ductile, malleable (any one of the three)

30.6.3 Chemistry Paper 3 (233/3)

1. Table 1

	I	II	III
Final burette reading	22.20	21.50	22.50
Initial burette reading	0.00	0.00	1.00
Volume of solution C used (cm ³)	22.20	21.50	21.50

(4 marks)

- (a) (i) Average volume of solution C used

$$= \frac{21.50 + 21.50}{2} = 21.50$$

(1 mark)

- (ii) Moles of sodium hydroxide in the average volume of solution C used.
1000 cm³ of sodium contains 0.3 moles of NaOH.

$$\therefore 21.50 \text{ cm}^3 \text{ of solution contains } \frac{0.3 \times 21.5}{1000}$$

$$= 0.00645 \text{ moles}$$

(1 mark)

- (iii) Moles of hydrochloric acid in 25.0 cm³ of solution D.
= 0.00645 moles

(1 mark)

- (iv) Molarity of hydrochloric acid in solution D.
25 cm³ of solution contains 0.00645 moles HCl
 $\therefore 1000 \text{ cm}^3 \text{ of solution contains } \frac{0.00645 \times 1000}{25}$
= 0.258M

(1 mark)

Table 2

	I	II	III
Final burette reading	21.50	20.90	20.90
Initial burette reading	0.00	0.00	0.00
Volume of solution D used (cm ³)	21.50	20.90	20.90

(4 marks)

- (b) (i) Average volume of solution D used

$$\frac{20.90 + 20.90}{2} = 20.90 \text{ cm}^3$$

(1 mark)

- (ii) Moles of hydrochloric acid in average volume of solution D used
1000 cm³ of solution contains 0.258 moles HCl

$$\therefore 20.90 \text{ cm}^3 \text{ of solution contains } \frac{0.258 \times 20.90}{1000} \text{ Moles}$$

$$= 0.0054 \text{ moles} \quad (1 \text{ mark})$$

- (iii) Moles of the metal carbonate, solid A in 25.0 cm³ of solution A.
Mole ratio of acid to carbonate 2:1

(1 mark)

$$\frac{1}{2} \times 0.0054$$

$$= 0.0027 \text{ moles.}$$

(1 mark)

- (iv) The solubility of the metal carbonate in g/100g of solution

$$\text{Mass of carbonate} = 0.0027 \times 74$$

$$\text{In } 25.0 \text{ cm}^3 \text{ of solution} = 0.1998 \text{ g.}$$

(1 mark)

$$\therefore 100 \text{ g of solution will contain } \frac{0.1998 \times 100 \text{ g}}{25} \text{ of carbonate}$$

$$= 0.7992 \text{ g/100g of solution} \quad (1 \text{ mark})$$

Observations

Inferences

2. (a) - A colourless liquid condenses on the cooler parts of test tube

- Hydrated salt/compound

- Gas produced forms white fumes with HCl.

- Ammonia gas

(2 marks)

(1 mark)

Observations

Inferences

- (b) (i) White ppt. insoluble in excess
(1 mark)

- Pb²⁺ or Al³⁺ present

(1 mark)

Observations

Inferences

(ii) No white ppt No effervescence (1 mark)	Pb ²⁺ absent or Al ³⁺ present CO ₃ ²⁻ absent (2 marks)
---	---

Observations	Inferences
(iii) White ppt. (1 mark)	SO ₄ ²⁻ present (1 mark)

Observations	Inferences
3. (a) White Solid dissolves to form a Colourless solution (1 mark)	A non polar compound present. (1 mark)

Observations	Inferences
(i) P ^H = 7 (1 mark)	Neutral solution. (1 mark)

Observations	Inferences
(ii) No effervescence (1 mark)	Solution not acidic (1 mark)

Observations	Inferences
(b) - Effervescence giving off a colourless gas. - Colourless solution formed. (1 mark)	Carboxylic/alkanoic acid present Or – COOH present (1 mark)

Observations	Inferences
(ii) Does not turn green (1 mark)	Alcohol absent OH – absent (1 mark)

Observations	Inferences
(iii) Not decolourized (1 mark)	 (1 mark)