

SCHOOL BASED EVALUATION TEST -YEAR 2019



COMPETENCY BASED CURRICULUM EXAM-GRADE 1

STEP FLYER

002

MATHEMATICAL ACTIVITIES

1

YOUR NAME: NAME OF YOUR SCHOOL.....

Count and write.

1. $\triangle \triangle \triangle \triangle = \underline{\quad}$

2. $\circ \circ \circ \circ \circ = \underline{\quad}$

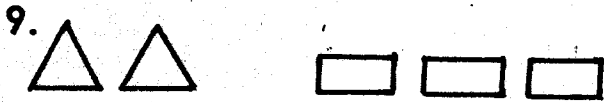
3. $\star \star \star = \underline{\quad}$

4. $\textcircled{\circ} \textcircled{\circ} \textcircled{\circ} \textcircled{\circ} \textcircled{\circ} = \underline{\quad}$


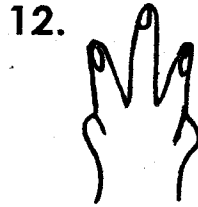

Pair and match equal groups.



Circle the group of 2.



Count and write the number of fingers.



Put together.

14. $2 + 2 = \underline{\quad}$

15. $2 + 1 = \underline{\quad}$

16. $5 + 3 = \underline{\quad}$

17. $4 + 3 = \underline{\quad}$

18. $6 + 2 = \underline{\quad}$

19. $2 + 0 = \underline{\quad}$

Write the next number.

20. 4, _____

21. 6, _____


22. 3, _____

23. 9, _____

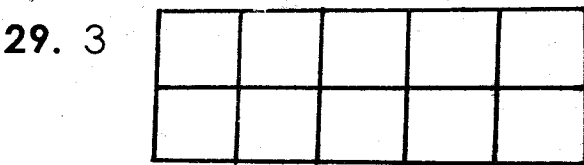
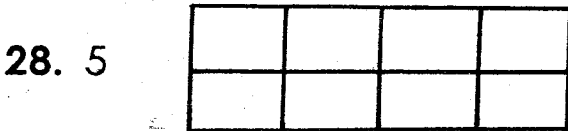
Draw lines through circles.



Circle the group with less objects.



Draw the correct number of circles.



Match the numbers with the objects.





Write the next number.

32. 5, 6, 7, _____

33. 12, 13, 14, _____

Take away.

34.  -  =

35.  -  =

36. $5 - 2 =$ _____

37. $4 - 1 =$ _____

38. $6 + 3 =$ _____

39. $2 - 1 =$ _____

40. $6 - 4 =$ _____

41. Draw 2 triangles _____

Write the missing numbers.

42. 4, _____, 6

43. 7, _____, 9

44. 11, _____, 13

Circle the bigger shapes.



Circle the group with more.

