

SCHOOL BASED EVALUATION TEST

STANDARD FIVE-YEAR 2019 SOCIAL STUDIES & CRE

5



STEP FLYER 002

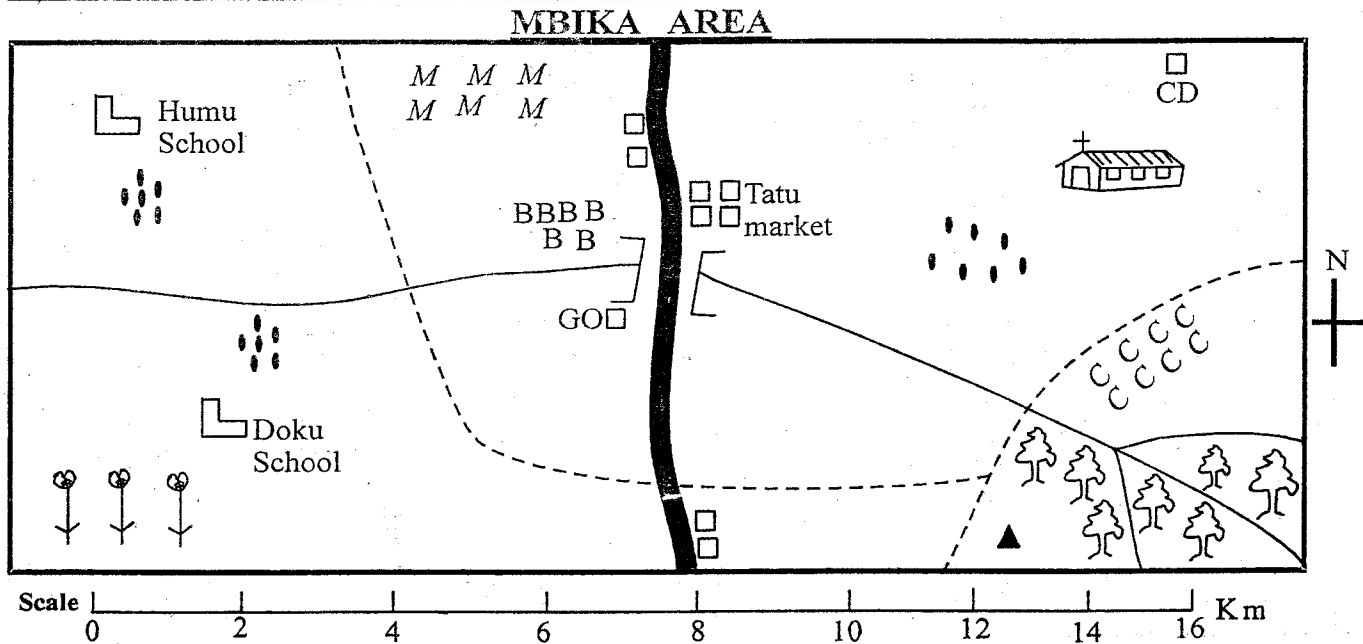
Time : 2 Hours 15 min

READ THESE INSTRUCTIONS CAREFULLY.

1. You have been given this question paper and a separate answer sheet. The question paper contains 90 questions.
2. Make sure that you have written on the answer sheet.

(i) Your name _____ (ii) Name of your school _____

Study the map of Mbika area and use it to answer questions 1 to 7



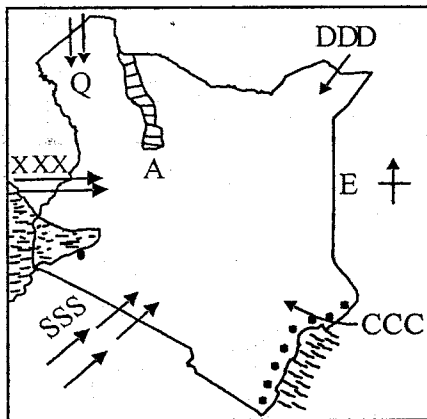
KEY

BBB - Beans	▲ Hill	MMM - Maize	GO - Governor's office
☺ Sisal	— Road	□ Bridge	CD - Cattle dip
CCC - Coffee	🌳 Forest	- - - Sub-county boundary	🏠 Church


- | | |
|--|--|
| <ol style="list-style-type: none"> 1. The head of Mbika area is
A. chief B. women representative
C. senator D. governor 2. Which livestock are kept in Mbika area
A. goat B. cattle C. donkey D. camels 3. Which cash crop is grown in the area
A. coffee B. maize C. beans D. tea 4. The people of Mbika area are
A. muslims B. hindus C. pagans D. christians 5. What is the direction of the church from Doku school
A. North East B. North West
C. South West D. South East | <ol style="list-style-type: none"> 6. The two relief features in the map are
A. church and dip B. forest and school
C. hill and river D. location and hill 7. What is the main means of transport in Mbika area
A. air B. railway
C. water D. road 8. The steep sides of the rift valley are known as
A. Valley B. basin C. escarpment D. plains 9. Title, frame, key and scale are all called _____ of a map.
A. direction B. compass
C. signs D. elements |
|--|--|

10. Cutting down trees without replacing them is called
A. overcrowding B. deforestation
C. afforestation D. reafforestation
11. Which of the following areas has a semi-desert type of vegetation
A. Garisa B. Malindi C. Naivasha D. Kwale
12. Which one of the following countries is **not** a neighbour of Kenya
A. Ethiopia B. Uganda
C. Sudan D. Tanzania
13. The largest relief region in Kenya is the
A. Nyika B. Highlands
C. Riftvalley D. Coastal lowlands
14. The lines drawn on a map running from the north to the south are called
A. Equator B. Latitudes
C. Longitudes D. Compass
15. Which one of the following types of soil is most fertile
A. black cotton B. alluvial
C. volcanic D. loam

Use the map of Kenya below to answer questions 16 to 19.

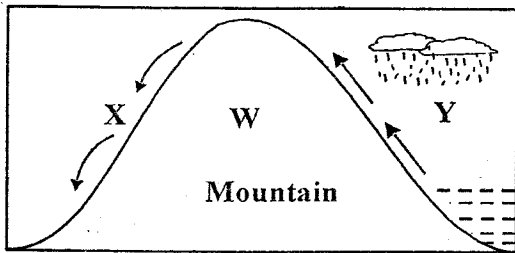


16. The capital city of the country drawn above is
A. Nairobi B. Mombasa
C. Kisumu D. Nakuru
17. The language group that followed route Q during their migration are the
A. cushites B. bantus C. semites D. nilotes
18. The group of Bantus who followed route XXX are
A. Western Bantus B. Coastal Bantus
C. Central Bantus D. Eastern Bantus
19. The group of people who followed route CCC were
A. farmers B. traders
C. fishermen D. pastoralism

20. Which one of the following groups of rivers below have their mouth in the floor of the Rift valley
A. Kerio, malewa, turkwel
B. Sondu, yala, kerio
C. Yala, tana, ewaso nyiro south
D. Athi, Nzoia, Voi
21. An area with very many people is said to be
A. sparsely populated
B. distributed
C. scattered
D. densely populated
22. Which one of the following is **not** a moral value in a society
A. loving one another
B. working hard
C. being unfair to other people
D. being tolerant to others
23. What is fish farming
A. keeping of fish in ponds
B. rearing of fish in ponds
C. keeping of fish in lakes
D. catching of fish in oceans
24. Hills that have resisted erosion are called
A. Nyika B. Volcanoes
C. Ranges D. Inselbergs
25. An example of a lowland area is
A. plateau B. plain C. hill D. valley
26. Growing of flowers is called
A. floriculture B. horticulture
C. flowing D. farming
27. Which one of the following is believed to be original homeland of Bantus
A. South Sudan B. Congo forest
C. Horn of Africa D. Saudi Arabia
28. Which one of the following counties in Kenya is densely populated
A. Kiambu B. Isiolo C. Moyale D. Marsabit
29. One of the following explains how the Akamba and Maasai interacted in the past
A. trade B. war C. marriage D. raid
30. Three of the following communities belong to the mijikenda. Which one is **not**?
A. Wadigo B. Waribe
C. Wachonyi D. Wakamba
31. The road sign shown below shows

A. no through way B. round about
C. danger ahead D. no overtaking
32. How many cities are there in Kenya
A. one B. two C. four D. three

33. Which one of the following towns has no international airport
 A. Nakuru B. Kisumu
 C. Eldoret D. Mombasa
34. What is democracy
 A. decision by few people
 B. government of few communities
 C. choosing our leaders freely and fairly
 D. government by the rich people
35. Which one of the following is **not** an importance of good citizenship?
 A. Peace. B. Hatred C. Harmony D. Unity

Use the diagram below to answer question 36 to 38



36. The type of rainfall shown above is called
 A. hailstone B. convectional
 C. thunderstorm D. relief
37. The side of the mountain marked X is called
 A. windward B. wet side
 C. leeward D. moist side
38. The above type of rainfall is **likely** to be experienced
 A. along the coast B. in plain areas
 C. in high places D. near lake Victoria
39. Mangrove swamps are mostly found
 A. along the lake basin
 B. along the river valley
 C. along the inland swamps
 D. along the coast
40. The **main** problem facing tourism industry in Kenya today is
 A. insecurity
 B. fires
 C. poaching
 D. high taxes charged to tourist
41. A large area covered by many trees growing together is known as
 A. swamp B. plain C. forest D. highlands
42. A _____ can travel and stay for a long period without water.
 A. horse B. camel C. sheep D. elephant
43. The natural home of wild animals is called
 A. forest B. home C. cage D. habitat
44. Elections in Kenya are held after every
 A. 10 B. 5 C. 4 D. 8
45. The word nyika means
 A. plateau B. fertile land
 C. cool land D. dry land

46. A manyatta is a house where _____ community live.
 A. Luo B. Boran C. Maasai D. Giriama
47. Lake magadi is famous for _____
 A. fishing B. soda ash
 C. cement D. flamingoes
48. Which one of the following is a subsistence crop
 A. cassava B. tea
 C. coffee D. pyrethrum
49. Which one of the following types of vegetation is **not** found in a swamp area
 A. reeds B. acacia
 C. waterlilies D. papyrus
50. _____ is a way of life of a community.
 A. behaviour B. culture
 C. dressing D. houses
51. Which one of the following type of soil is found at the coast?
 A. Sandy soil. B. Alluvial soil.
 C. Loamy soil D. Clay soil.
52. The total number of people living in a place is known as
 A. population distribution
 B. population
 C. population density
 D. density
53. Coldness or hotness of a place is known as
 A. weather B. heat
 C. thermometer D. temperature
54. The official counting of people in Kenya is known as
 A. election B. census
 C. population D. membership
55. In the past traditional doctors used _____ to treat people.
 A. blood B. injections C. tablets D. herbs
56. Coffee is grown in large areas called
 A. plantations B. farms C. estates D. gardens
57. The **main** aim of going to school is
 A. to be prefects B. play football
 C. acquire knowledge D. make friends
58. Which one of the following elements of a map can determine the information to be included in the map?
 A. Title. B. Key. C. Scale. D. Frame.
59. Which part of Kenya usually receives convectional rainfall?
 A. Lake Victoria. B. Nyeri.
 C. Kiambu. D. Nyika plateau.
60. A river that flows throughout the year is called _____ river.
 A. temporary B. swamp
 C. permanent D. seasonal

SECTION B

CHRISTIAN RELIGIOUS EDUCATION

61. _____ and _____ disobeyed God and brought death to the world.
A. Adam and sarah B. Abraham and Eve
C. Adam and Eva D. David and Goliath
62. Cain killed his brother Abel because he was
A. lovely B. envious C. kind D. humble
63. God gave Moses the ten commandments at Mt
A. Olives B. Sinai C. Nebo D. Carmel
64. "Respect your father and mother," is the first commandment that has a _____ added (Ephesian 6:2)
A. debt B. quote C. promise D. **curse**
65. Goliath belonged to the _____ army.
A. philistines B. midianites
C. syrians D. amalekites
66. Jacob dreamt about a stairway from earth to heaven at
A. Bethel B. shalom C. Moreb D. Sinai
67. Who was the first king of Israel annointed by Samuel?
A. Saul. B. Solomon C. David D. Ahab
68. I was sold to the Ishmaelite traders twenty pieces of silver by my brothers Who am I?
A. Jacob B. Joseph C. Isaac D. Esau
69. A covenant is an _____ between two parties or more.
A. **promise** B. **argument**
C. agreement D. appointment
70. _____ came to prepare the way for the coming of Jesus christ
A. **John** B. John the baptist
C. Lazarus D. Peter
71. My parents dedicated me to the temple and let me serve in the temple as long as I live I am _____
A. Samuel B. Hannah C. Elkanah D. Eli
72. The announcement of the birth of Jesus to Joseph was done by
A. Isaiah B. Mary C. Angel D. Holy ghost
73. When the wisemen visited Jesus they brought him gifts of _____, _____ and _____
A. Gold, frankincense, myrrh
B. **Gold, myrrh, silver**
C. Myrrh, bronze, gold
D. Frankincense, money, myrrh
74. The time of getting ready for the birth of Jesus christ is called?
A. Christmas B. Easter
C. Advent D. Holy communion
75. Jesus healed _____ lepers but only one came back to thank him.
A. ten B. two C. twelve D. five
76. Which is the last book in the old testament?
A. Genesis. B. Revelation
C. Matthew D. Malachi
77. What lesson do Christians learn from the story of Ananias and Sapphira?
A. honesty B. kindness
C. selfishness D. generosity
78. Which is the eighth commandment?
A. Do not covet.
B. Do not kill.
C. Do not steal.
D. Do not commit adultery
79. Jesus was crucified at
A. Golgotha B. Gethsemane
C. Sinai D. Calvary
80. The first Christian martyr was
A. Jesus B. Stephen C. John D. Peter
81. Which one of the following is a quality of a good leader?
A. selfish B. jealous C. selfless D. mean
82. Abraham's father was called _____
A. Terah B. Ur C. Haron D. Nahor
83. Nicholas a class five pupil found James stealing food in their class. What should Nicholas do as a Christian?
A. help him stealing
B. **report to the area chief**
C. ignore him
D. report to the teacher
84. One of the voluntary services that Jesus offered was
A. healing B. singing C. talking D. drinking
85. Three of the following are gifts of the holy spirit **except**?
A. preaching B. healing
C. speaking in tongues D. joy
86. On his way to Jericho he was injured by robbers and was helped by a _____
A. Samaritan woman B. priest
C. pastor D. good samaritan
87. One of the following is **not** a rite of passage which one is it?
A. Marriage B. Birth. C. Death D. Baptism
88. Jesus promised to send his disciples a helper called _____
A. saviour B. emmanuel C. holyspirit D. messiah
89. Which one of the following is a way of worshipping God?
A. Forgiving others. B. Abusing others.
C. Being selfish D. Cheating
90. A good Christian should do the following **except**
A. pray always B. tell lies
C. help the needy D. sing in church

STEP FLYER
#002
2019
SID 5
SCIENCE

STUDIES 8

CALE

SOCIAL STUDIES

CALE

1 B.	26 D.	1 D.	31 C.	61 C.
2 C.	27 C.	2 B.	32 D.	62 B.
3 C.	28 B.	3 A.	33 A.	63 B.
4 B.	29 C.	4 D.	34 C.	64 C.
5 D.	30 B.	5 A.	35 B.	65 A.
6 A.	31 A.	6 C.	36 D.	66 A.
7 B.	32 B.	7 D.	37 C.	67 A.
8 B.	33 A.	8 C.	38 C.	68 B.
9 D.	34 C.	9 D.	39 D.	69 C.
10 B.	35 D.	10 B.	40 A.	70 B.
11 C.	36 B.	11 A.	41 C.	71 C.
12 D.	37 D.	12 C.	42 B.	72 A.
13 A.	38 C.	13 A.	43 D.	73 C.
14 A.	39 D.	14 C.	44 B.	74 C.
15 B.	40 A.	15 D.	45 D.	75 A.
16 C.	41 B.	16 A.	46 C.	76 D.
17 D.	42 A.	17 D.	47 B.	77 A.
18 B.	43 C.	18 A.	48 A.	78 C.
19 A.	44 C.	19 B.	49 B.	79 A.
20 C.	45 C.	20 A.	50 B.	80 B.
21 D.	46 D.	21 D.	51 A.	81 C.
22 B.	47 A.	22 C.	52 C.	82 A.
23 A.	48 A.	23 B.	53 D.	83 D.
24 C.	49 A.	24 D.	54 B.	84 A.
25 C.	50 D.	25 B.	55 D.	85 D.
		26 A.	56 A.	86 D.
		27 B.	57 C.	87 D.
		28 A.	58 B.	88 C.
		29 A.	59 A.	89 A.
		30 D.	60 C.	90 B.