

FOCUS A365

Another Manyamfranchise.Com Evaluation Test

Gatitu Secondary School

gatitusecondary@gmail.com

Form Three | Mid Term 3 Exams | Agriculture | 2015 | 100 Marks

Instructions: Answer all questions provided in Section A, B and C

Section A: (30 Marks)

1. State the practices that should be carried out on wooden fencing posts to make them long lasting

(4mks)

- (i) _____
- (ii) _____
- (iii) _____
- (iv) _____

2. Name two features in a fence that allow free passage of humans but not animals

(2mks)

- (i) _____
- (ii) _____

3. Give two uses of guard rails in a farrowing pen

(2mks)

- (i) _____
- (ii) _____

4. Give two reasons for having a footbath in a cattle dip

(2mks)

- (i) _____
- (ii) _____

5. Name four main parts of a farm building

(4mks)

- (i) _____
- (ii) _____
- (iii) _____
- (iv) _____

6. Give **four** advantages of individual owner operator tenure system as practiced in Kenya (4mks)

- (i) _____
- (ii) _____
- (iii) _____
- (iv) _____

7. State **two** reasons for land fragmentation in Kenya (2mks)

- (i) _____
- (ii) _____

8. State **four** ways in which land reform can be implemented in Kenya (4mks)

- (i) _____
- (ii) _____
- (iii) _____
- (iv) _____

9. Name **four** settlement schemes that the Kenya Government started as a result of success of the million acre scheme (4mks)

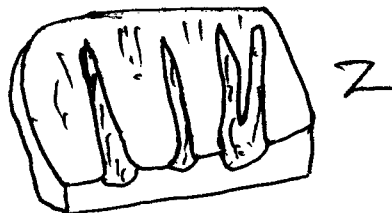
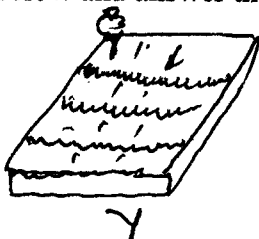
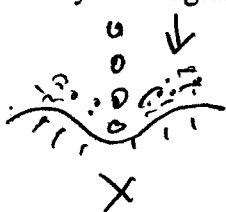
- (i) _____
- (ii) _____
- (iii) _____
- (iv) _____

10. Give two benefits of processing a land title deed (2mks)

- (i) _____
- (ii) _____

Section B: (20mks) Answer all questions in the spaces provided

11. Study the diagrams below and answer the questions that follow:



(b) Outline **six** roles played by trees in soil water conservation

(6mks)

15. (a) Outline **ten** harmful effects of weeds

(10mks)