

COMPASS ASSESSMENT TEST

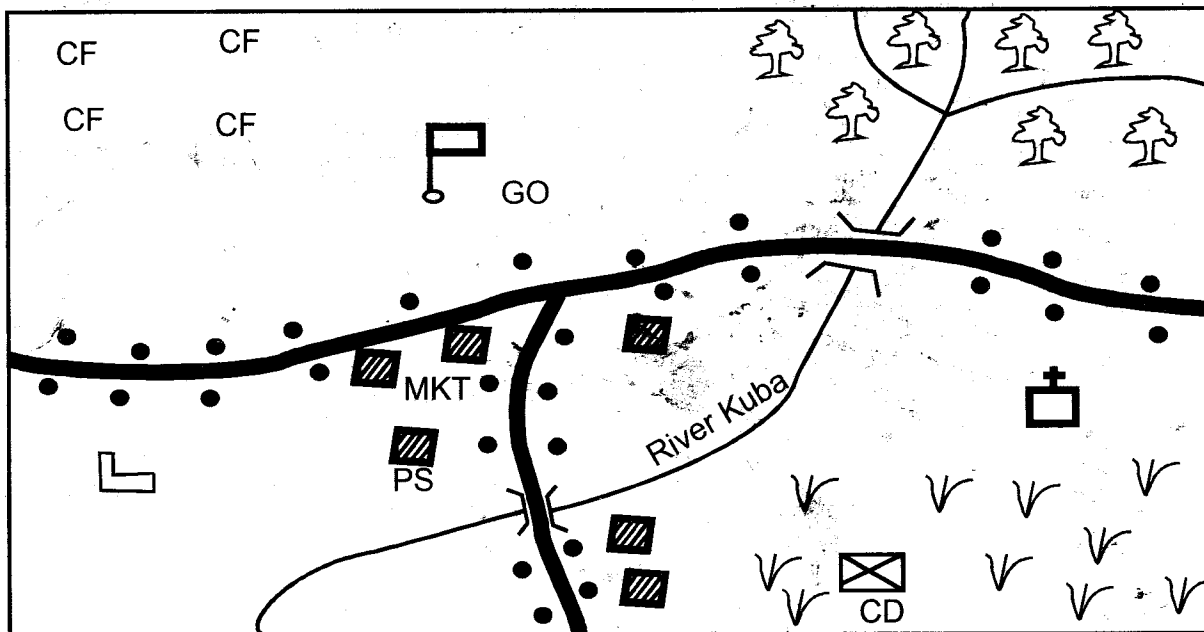


STANDARD 4 - 2018 SOCIAL STUDIES & C.R.E

009

Time : 2Hrs. 15 Mins

POWO AREA



Scale 0 1 2 3 4 5 6 7 8 9 10 KM

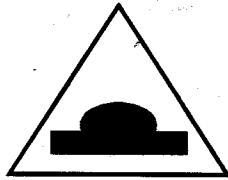
KEY

Forest	Tarmac road	Grass	Cattle dip
Police station	Governor's office	Hut	Coffee farms
Market	River and bridge	Church	Permanent buildings
			School

Use the map of Powo area to answer questions 1-7

- What is the direction of the Governor's office from the school?
A. North west B. South west
C. North east D. South east
- People from Powo area are likely to be
A. Christians B. Pagans
C. Muslims D. Hindus
- What evidence is there in Powo area that shows that there is security?
A. Governor's office B. Senator
C. Church D. Police station
- Which economic activity is **not** carried out in Powo area?
A. Trading B. Fishing
C. Crop farming D. Livestock farming
- Most people in Powo area live
A. along the road B. in the forest
C. along the river D. around cattle dip
- What is the climate of North Eastern region of Powo Area?
A. Cool and warm B. Hot and wet
C. Cool and wet D. Hot and dry
- River Kuba flows from
A. South B. North east
C. North west D. South west
- Sharing of a knife during circumcision can lead to the spread of
A. HIV and AIDS B. anaemia
C. polio D. cancer
- The Kenya National flag has how many colours?
A. six B. three
C. two D. four
- In the past children were named according to all the following **except**
A. Names in the bible
B. names of animals
C. seasons
D. after relatives

11. The road sign below is mainly found



- A. around a corner B. at a busy road
C. at zebra crossing D. at a hilly area

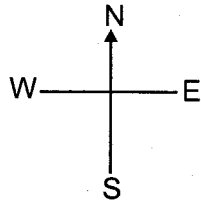
12. Which of the following is a pack animal?

- A. Goat B. Sheep
C. Camel D. Hen

13. In the past the best way of sending messages over long distances was

- A. mobile phones B. letters
C. smoke signals D. use of fast runners

14. The instrument drawn below is called



- A. north pole
B. compass
C. cardinal points
D. scale

15. Lenox, his wife and seven children make up

- A. nuclear family B. extended family
C. street family D. single parent family

16. Kenya is divided into forty seven

- A. wards B. locations
C. counties D. constituencies

17. In the past people were taught good behaviours by their

- A. peers B. age mates
C. elders D. parents only

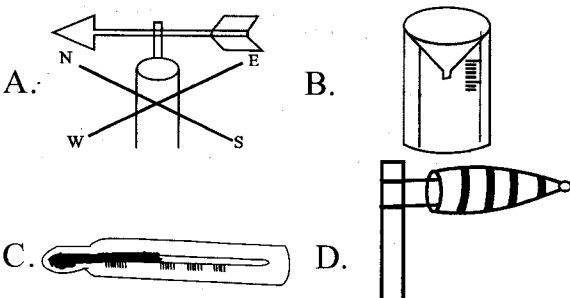
18. Which one of the following is not a product of milk?

- A. Cheese B. Butter
C. Cream D. Sausage

19. The vegetation that grows along the river is called

- A. mangroves B. papyrus
C. riverine D. swampy

20. Which of the following instruments is used to measure the amount of rainfall?



21. Three of the following are children's rights. Which one is **not**?

- A. Right to education
B. Right to life
C. Right to a good job
D. Right to security

22. People who visit our country to see wild animals are called

- A. thieves B. tourists
C. poachers D. rangers

23. People who prayed and offered sacrifices to God when there was drought in the past were called

- A. astronomers B. warriors
C. rain makers D. diviners

24. The type of trade where goods are exchanged for other goods or services is called

- A. currency trade B. foreign trade
C. internal trade D. barter trade

25. Law breakers are also called

- A. criminals B. thieves
C. peace makers D. police officers

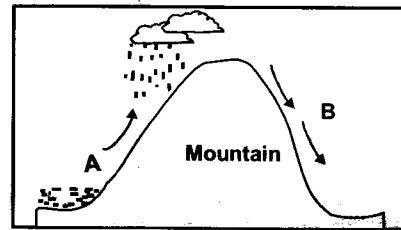
26. Which of the following is the most common means of transport in our county?

- A. Road B. Pipeline
C. Railway D. Air

27. The following are elements of good citizenship **except**

- A. disobedience B. loyalty
C. patriotism D. fairness

Use the diagram below for questions 28 - 29



28. Which type of rainfall is shown above?

- A. Cyclonic B. relief
C. convectional D. mountain

29. The side of the mountain marked **B** is called

- A. windward side B. wet side
C. rain shadow D. right sides

30. Rules which govern people on how to behave are known as

- A. moral laws B. taboos
C. constitution D. religious rules

31. Madaraka Day is celebrated on _____ every year.

- A. 20th October B. 1st June
C. 1st May D. 12th December

32. Keeping livestock and growing of crops together is called

- A. mixed farming B. pastoral farming
C. arable farming D. commercial farming

33. Many trees growing together form


- A. a river B. hill
C. forest D. plateau

34. A citizen who loves his / her country is called

- A. patriot B. citizen
C. patriotism D. citizenship

35. The daily changes in the atmosphere of a given place at a particular time is known as
 A. climate B. temperature
 C. weather D. altitude
36. Animals, plants, insects and birds in their natural habitat referred to as
 A. environment B. tourism
 C. wildlife D. habitat
37. Large farms where beef cattle are reared are known as
 A. cattle dips B. sheds
 C. paddocks D. ranches
38. When a person dies a _____ is conducted.
 A. naming B. wedding
 C. birthday D. burial
39. A compass has how many cardinal points?
 A. Six B. Four
 C. Two D. Eight
40. Which one of the following crops is used for making insecticides?
 A. Pyrethrum B. Maize
 C. Tea D. Cotton
41. Which colour of our national flag symbolises land?
 A. Red B. Black
 C. White D. Green
42. Which of the following duties was **not** performed by boys in the past?
 A. Making fences
 B. Hunting
 C. Cooking for the family
 D. Looking after livestock
43. The small roads connecting or joining major roads are called
 A. by pass B. feeder roads
 C. tarmac roads D. highways
44. People who are related by blood, marriage or adoption form a
 A. clan B. family
 C. nation D. society
45. The official counting of people in a country is known as
 A. voting B. election
 C. census D. registration
46. In Kenya elections are held after every _____ years.
 A. 10 B. 5
 C. 15 D. 2
47. Which of these tools was not used for agriculture in traditional African society?
 A. Hoes B. Digging sticks
 C. Knives D. Tractors
48. Which of the following economic activities is **mainly** carried out in savannah region?
 A. Cash crop farming B. Pastoralism
 C. Trading D. Fishing
49. The hotness or coldness of a place is known as
 A. temperature B. wind
 C. climate D. sunshine

50. Forests are important in all the following ways **except**
 A. they are sources of fuel
 B. they attract rainfall
 C. they are natural homes for criminals
 D. they are sources of medicines
51. Sick animals are treated by
 A. poachers B. veterinary doctors
 C. herbalists D. medicinemen
52. Which physical feature is drawn below?



- A. hill B. plain
 C. valley D. swamp
53. Which of the following types of soils is used in the pottery industry?
 A. Loam soils B. Clay soils
 C. Alluvial soils D. Sandy soils
54. The traditional iron workers were also known as
 A. traders B. diviners
 C. herbalists D. blacksmiths
55. Hides and skins are raw materials for making
 A. mats B. leather
 C. fertilizers D. coats
56. Rivers that flow during the rainy seasons only are known as
 A. permanent rivers B. dry rivers
 C. seasonal rivers D. small rivers
57. Children are taken to school to
 A. sleep B. play
 C. learn D. eat
58. Which one is not a product from traditional industry?
 A. Basket B. Car
 C. Pot D. Knife
59. The county government is headed by
 A. president
 B. governor
 C. county commissioner
 D. inspector general
60. Which of the following was not a form of entertainment in the past?
 A. Watching television B. Songs
 C. Reciting stories D. Wrestling

SECTION B

CHRISTIAN RELIGIOUS EDUCATION

61. The old testament has how many books?
 A. 27 B. 33
 C. 39 D. 66
62. The Lord's day is also known as _____ day.
 A. weekend B. Sabbath
 C. Sunday D. Friday

63. Prophet _____ was taken to heaven in a chariot of fire.
A. Elijah B. Jeremiah
C. Elisha D. Moses
64. Which of the following person in the bible was known as the father of faith?
A. Joseph B. Isaac
C. Jesus D. Abraham
65. Noah sent two birds to confirm if the flood had dried. Which was the second bird?
A. Raven B. Eagle
C. Crow D. Dove
66. Lake Galilee was also called
A. Tiberias B. Bethsaida
C. Jordan D. Red sea
67. It took _____ days for the Noah's flood to dry up.
A. 40 B. 70 C. 150 D. 100
68. Who told Hannah at the temple at Shiloh that she behaved like she was drunk?
A. Eli B. Elkanah
C. Peninah D. Samuel
69. Why did Adam and Eve hide from God when they heard Him coming?
A. They spoke with the snake
B. They were naked
C. They were afraid of God
D. They were angry
70. God told Abraham to go to mount _____ and offer His son Isaac as a sacrifice
A. Sinai B. Carmel
C. Horeb D. Moriah
71. "Where can we buy enough food to feed all these people? These words were spoken by Jesus to
A. Peter B. John
C. James D. Philip
72. How many baskets of leftovers remained after Jesus fed the five thousand men?
A. 12 B. 3 C. 7 D. 5
73. Simon Peter had a brother called _____ who was also a disciple of Jesus
A. James B. John
C. Andrew D. Matthew
74. Mary, Martha and their brother Lazarus lived in
A. Bethany B. Nazareth
C. Jericho D. Jerusalem
75. How many days had Lazarus been in the tomb before Jesus arrived?
A. 3 B. 7 C. 6 D. Four
76. The first four disciples of Jesus worked as _____ before Jesus called them
A. shepherds B. fishermen
C. priests D. carpenters
77. Who was the father of James and John the disciples of Jesus?
A. Jesse B. Zechariah
C. John the baptist D. Zebedee
78. Who among the following disciples of Jesus walked on water when Jesus commanded him to do so?
A. Peter B. John
C. James D. Andrew
79. Which one of the following is not a quality of a good leader?
A. Kind B. Loving
C. Reliable D. Unfair
80. Jesus Christ was baptised by _____ in river _____
A. John the baptist, Jordan
B. John the baptist, Nile
C. Levi, Jordan
D. Joseph, Jordan
81. Jesus drove one people trading in the temple at
A. Jericho B. Jerusalem
C. Bethlehem D. Nazareth
82. Jesus fed the 4000 men using
A. 5 loaves of bread, 2 fish
B. 7 fish, few loaves of bread
C. few fish, 5 loaves of bread
D. 7 loaves of bread, few fish
83. Which one of the following is not a moral value?
A. Pride B. Gentleness
C. Love D. Selfishness
84. On which mountain did Jesus pray until He experienced sweat of blood?
A. Golgotha B. Nebo
C. Olives D. Sinai
85. When Jesus was on the cross He said "Eli, Eli Lama Sabachthani?" Some people heard him and said he was calling
A. Moses B. God
C. Abraham D. Elijah
86. Who among Jesus disciples asked Him to wash His hands just like the feet?
A. James B. Simon Peter
C. Philip D. Luke
87. In which city did the Roman officer ask Jesus to heal his servant who was at home?
A. Jericho B. Capernaum
C. Nazareth D. Bethlehem
88. Which of the following curse was pronounced by God to the snake in the garden of Eden?
A. Eating dust forever
B. Labour pain
C. Toiling to make land productive
D. Being subject to man
89. The daughter - in- law to Naomi who decided to follow her to her homeland was
A. Orpha B. Chillion
C. Ruth D. Hannah
90. Who among Jesus disciples was a tax collector before Jesus called Him?
A. Peter B. Luke
C. Matthew D. John