



Manyam Franchised Tests

SOCIAL 2012

|

KCPE

|

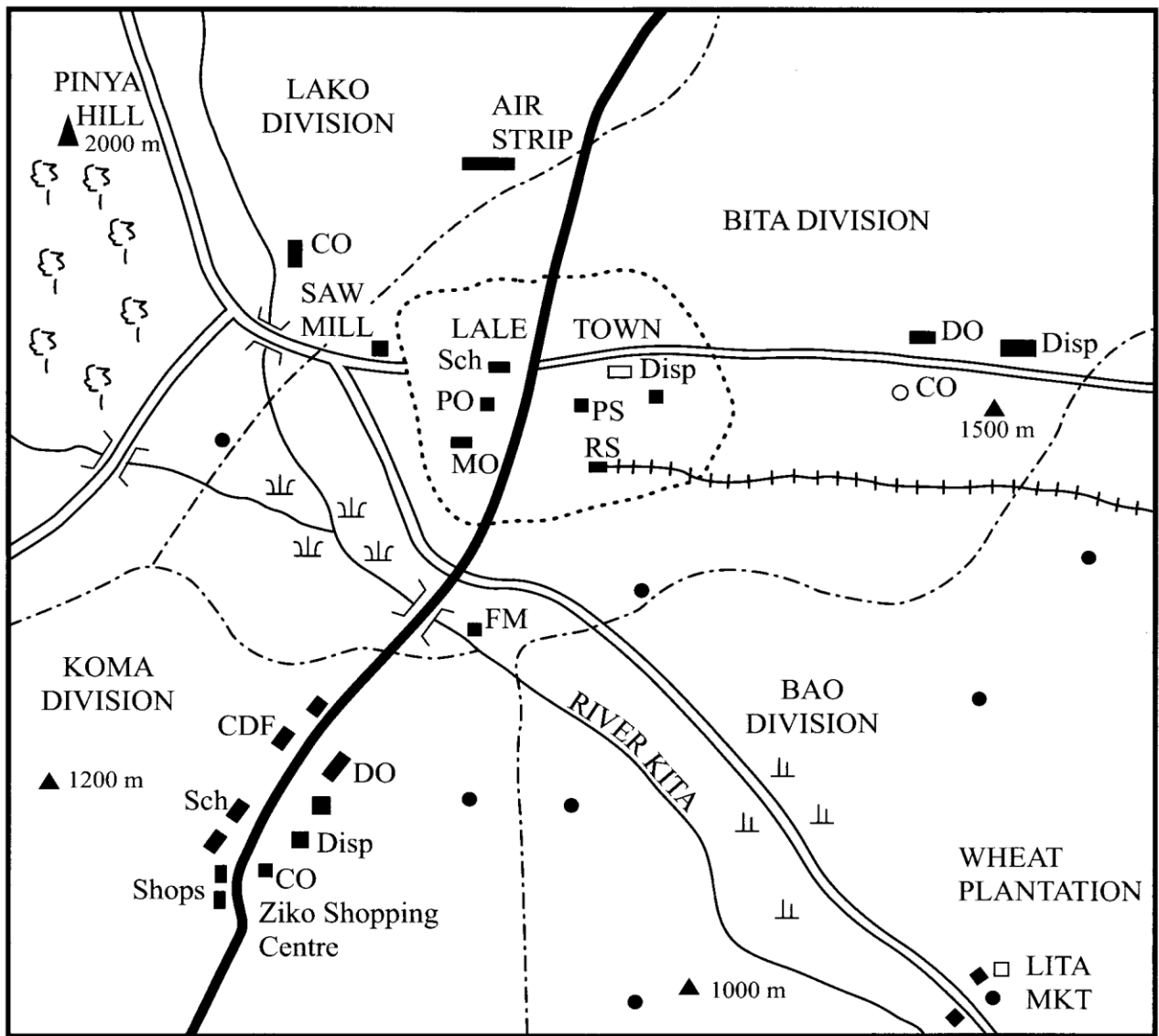
REVISIONS












NAME..... SCHOOL..... DATE.....

PART 1 SOCIAL STUDIES KITA AREA

Study the map of Kita area provided and answers questions 1 to 7.

PART I SOCIAL STUDIES KITA AREA



KEY			
	Tarmac Road	CDF	Constituency Development Fund Office
	Murrum Road	CO	Chief's Office
	River	Disp	Dispensary
	Railway	DC	District Commissioner
	Divisional Boundary	DO	Divisional Office
	River Bridge	PO	Post Office
	Municipal Boundary	PS	Police Station
	Permanent Buildings	Mkt	Market
	House	Sch	School
	Forest	RS	Railway Station
	Scrub; Papyrus Swamp	MO	Municipal Council Office
		FM	Flour Mill

- The general direction of flow of river Kita is
 - North East and South West
 - North West to South East
 - South East to North West
 - South West and North East
- The approximate length of the tarmac road in Kita area is
 - 10km
 - 13km
 - 19km
 - 23km
- The **main** means of transport in Kita area is
 - Water transport
 - Railway
 - Air
 - Road
- The highest point in Kita area is
 - 1000m
 - 1200m
 - 1500m
 - 2000m
- Which one of the following divisions is likely to have a cool and wet climate?
 - Iako Division
 - Bitu Division
 - Bao Division
 - Koma division
- Kenda found a person breaking into a shop at Ziko shopping centre. Which one of the following would be the appropriate office in Kita area for him to report the crime?
 - The head teacher's office
 - The chief's office
 - The CDF office

D. Municipal Council office

7. A tourist was travelling along the Murram Road from Lita market towards Pinya Hill.

Which one of the following is the **correct** order of the natural vegetation that he saw on the way?

- A. Forest, papyrus, scrub
- B. Papyrus, scrub, forest
- C. Scrub, papyrus, forest
- D. Forest, scrub, papyrus

8. One of the results of the interaction between the Agikuyu and the Maasai during the pre-colonial period was that the

- A. Agikuyu learnt the skill of crop farming from the Maasai
- B. Agikuyu intermarried with the Maasai
- C. Maasai borrowed the art of circumcision from the Agikuyu
- D. Maasai learnt the practice of cattle keeping from the Agikuyu

9. The statements below describe a type of climate in Africa

- (i) It has hot and dry summers
- (ii) It has cool and wet winters
- (iii) Its average rainfall is between 500mm – 1000mm
- (iv) It is experienced in areas that lie about 35° North and South of the equator

The type of climate described above is

- A. Mediterranean climate
- B. Equatorial climate
- C. Semi-desert climate

D. Tropical continental climate

10. Three of the following statements are true about the Kingdoms of Old Ghana and Buganda. Which one is **not**? Both kingdoms

- A. Had powerful rulers
- B. had a standing army
- C. Prospered due to trade
- D. Declined when slave trade was abolished

11. Which one of the following was a characteristic of African traditional education?

- A. Children started learning after initiation
- B. Songs were used as a method of teaching
- C. Parents avoided teaching their own children
- D. Children were not allowed to choose what to learn

12. Which one of the following is a modern method of preserving fish?

- A. Sun-drying
- B. Smoking
- C. Salting
- D. Canning

13. Laibon Lenana collaborated with the British because he wanted

- A. His people to get western education
- B. to acquire better breeds of cattle
- C. to get support against his enemies
- D. to be trained as a soldier

14. Which one of the following statements describes directly democracy?

- A. All citizens are involved in making decisions
- B. Citizens must agree with what the government decides
- C. All decisions are made by the head of state
- D. Citizens elect representatives to make decisions for them

15. Which one of the following minerals is **correctly** matched with the method of mining through which it is extracted?

Mineral	Method of mining
A. Gold	Dredging
B. Copper	Panning
C. Soda ash	Adit
D. Petroleum	Drilling

16. Which one of the following soil conservation methods is used to control gully erosion?

- A. Constructing terraces
- B. Planting cover crops
- C. Building gabions
- D. Contour ploughing

17. Jane, a standard eight pupil, was punished by her class teacher for arguing against some school rules. Which of the following fundamental freedoms was Jane denied?

- A. Freedom of worship
- B. Freedom of expression
- C. Freedom of association
- D. Freedom of assembly

18. Who among the following members of a school management committee ensures that money is used properly?

- A. The chairperson
- B. The sponsor
- C. The head teacher
- D. The treasurer

19. Which one of the following statements is **true** about the policy of assimilation used by the French in Senegal?

- A. Africans became citizens of France
- B. The French were made to learn African languages
- C. The French appointed Africans to rule Senegal
- D. Africans were refused to vote in general elections

20. Which one of the following is a qualification for a person who wishes to be elected as a member of the National Assembly in Kenya? One must be

- A. Civil servant
- B. Over 35 years of age
- C. registered as a voter
- D. a Kenyan by birth

21. Which one of the following types of marriages allows a man to marry up to four wives

- A. Christian marriage
- B. Muslim marriage
- C. Hindu marriage
- D. Traditional African marriage

22. Three of the following are reasons why European powers scrambled for Africa. Which one is not?

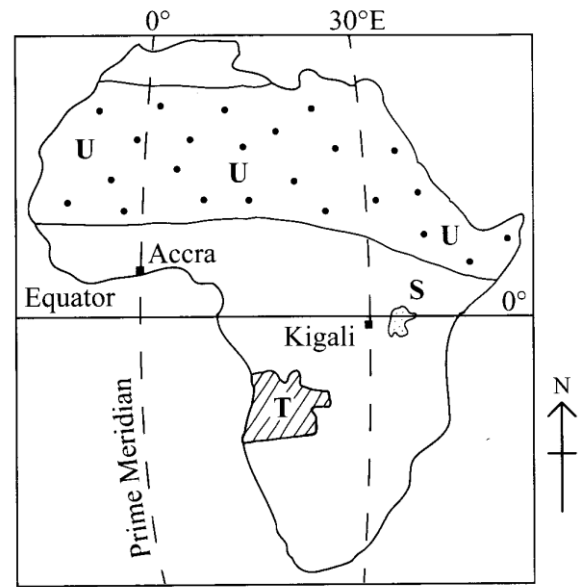
- A. They wanted land to resettle some of their population

- B. They wanted to control areas where they would get more slaves
 - C. They wanted to establish markets for their manufactured goods
 - D. They were looking for sources of raw materials for their industries
23. Which one of the following is the main reason why the Kariba dam was built?
- A. To create a lake for fishing
 - B. To provide water for irrigation
 - C. To control floods on the River Zambezi
 - D. To generate hydro-electric power
24. Which one of the following archaeological sites in Eastern Africa is correctly matched with the country where it is found?

Archaeological site Country

- | | |
|--------------------|----------|
| A. Olduvai gorge | Uganda |
| B. River Omo Basin | Tanzania |
| C. Olorgesallie | Kenya |
| D. Ishango | Ethiopia |
25. Which one of the following activities is **likely** to weaken national unity in Kenya
- A. Employing relatives
 - B. Amending the constitution
 - C. Using a national language
 - D. Pardoning reformed criminals

Use the map of Africa below to answer questions 26-29



26. The dotted area marked U is sparsely populated because it
- A. is forested
 - B. is hot and dry
 - C. is mountainous
 - D. experiences floods
27. If the time at Accra is 9:00a.m. What is the time at Kigali?
- A. 11:00a.m
 - B. 11:00p.m
 - C. 7:00a.m
 - D. 7:00p.m
28. The country marked T was colonized by
- A. Britain
 - B. Spain
 - C. Portugal
 - D. Germany
29. The **main** economic use of the lake marked S is that
- A. Provides water for irrigation

- B. is used as a fishing ground
 C. is a tourist attraction
 D. is used as a transport route
30. The green colour of the National flag of Kenya represents the
- A. love for the country
 B. rich agricultural land
 C. beauty of the forest
 D. peace enjoyed by the citizens
31. Which one of the following groups of communities lives in West Africa?

Ankole
 Nuer
 Banyoro

A.

Zulu
 Xhosa
 Ngoni

B.

Amhara
 Bemba
 Berbers

C.

Hausa
 Soninke
 Ashanti

D.

32. The following are some events that took place in Kenya before independence
- (i) Jomo Kenyatta was arrested
 (ii) Kikuyu Central Association was formed
 (iii) Africans were recruited to fight in the Second World War
- Which one of the following is the **correct** order in which these events took place?
- A. (i), (ii) and (iii)
 B. (i), (iii) and (ii)
 C. (ii), (iii) and (i)
 D. (iii), (i) and (ii)
33. Family planning is encouraged in Kenya because it

- A. Makes it easy for the government to carry out population census
 B. enables the government to plan for future developments
 C. makes families raise manageable numbers of children
 D. makes it possible for families to earn money
34. Which one of the following types of industries has existed in Kenya since the pre-colonial period?
- A. Leather processing
 B. Cotton ginning
 C. Paper making
 D. Fruit canning
35. The *Harambee* movement was introduced in Kenya in order to
- A. promote equality among the people
 B. increase government revenue
 C. enable people to share national wealth
 D. promote development in the country
36. Which one of the following is the main reason why Africans in Kenya started the Mau Mau War? They wanted
- A. African culture to be respected
 B. To regain their independence
 C. the *Kipande* system to be abolished
 D. African reserves to be done away with
37. The areas under forests in Kenya have been reducing at a fast rate due to human activities. The **main** action the government should take to control the destruction is to
- A. Punish those found cutting down forest trees

B. encourage people to use paraffin instead of wood for cooking

C. educate people on the importance of conserving forests

D. increase the price of timber

38. Below are statements describing a group of people found in Kenya?

(i) They were the first foreigners to settle in Kenya

(ii) They intermarried with African communities along the coast

(iii) Their main occupation was trade

The group of people described above is the

A. British

B. Arabs

C. Germans

D. Chinese

39. Which one of the following factors enables horticultural farming in the Netherlands to be carried out throughout the year?

A. Applying fertilizers in the farms regularly

B. Growing of crops on reclaimed land

C. Growing crops in green houses

D. Spraying of crops regularly

40. The statements below describe a method of fishing

(i) The method is used to catch large fish and whales

(ii) it use a net that has floats at the top and weights at the bottom

(iii) the net is attached to a large ship by a rope or string

(iv) A small boat is used to spread the net around a shoal of fish

(v) A string at the bottom of the net is pulled to close up the fish in the net then it is pulled to the ship

The method described above is

A. gill net method

B. drift net method

C. basket method

D. purse scining method

41. Below are conditions that favour the growth of a certain crop

(i) High rainfall

(ii) High temperatures

(iii) Deep well drained soils

(iv) Protection from strong winds

The conditions listed above favour the growth of

A. Coffee B. pyrethrum

C. wheat D. cocoa

42. Three of the following are elements of goods citizenship in Kenya

Which one is NOT

A. Being patriotic to the country

B. Obeying the laws of the country

C. Owning property in the country

D. Participating in the general elections

43. The symbol of spears on the national coat of arms in Kenya represents the

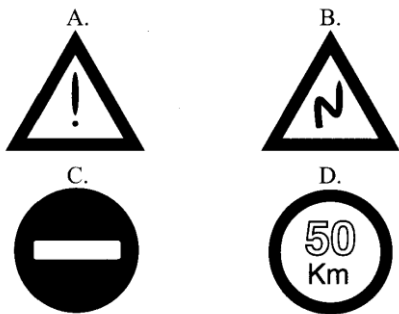
A. ability of people to work hard

B. readiness to defend our country

C. protection of wildlife from poachers

- D. strength of the people
44. Which one of the following is a role of the local community to a school?
- A. providing resources to the school
- B. overseeing admission of pupils to the school
- C. appointing head teachers for the school
- D. supervising teachers in the school

45. Which one of the following road signs shows a motorist that there could be danger ahead?



46. Below are characteristics of a type of vegetation found in Africa?
- (i) Trees are tall and near each other
- (ii) There are creepers on trees
- (iii) Trees are evergreen
- (iv) Trees branches form a canopy

The type of vegetation described above is the

- A. bamboo forest
- B. savannah woodland
- C. savannah grassland
- D. tropical rain forest
47. The **main** reason why petroleum products are transported using a pipeline is that it

- A. reduces the number of heavy vehicles on roads
- B. costs less than using other forms of transport
- C. protects the petrol from being stolen
- D. ensures that petrol is safe from fire

48. Which one of the following crops in Kenya is grown mainly for export?

- A. Tea
- B. Cotton
- C. Maize
- D. Bananas

49. Which one of the following regions in Kenya is **correctly** matched with its representatives to the Legislative council in 1957?

Region	Representative
A. North Nyanza	Oginga Odinga
B. Rift valley	Daniel Moi
C. Ukambani	Benard Mate
D. Central region	David Muimi

50. Which one of the following towns in Kenya is an agricultural collection centre?

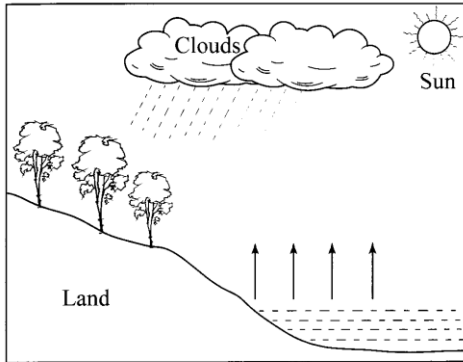
- A. Thika B. Malindi
- C. Kisumu D. Eldoret

51. Which one of the following groups of tourists attractions are found in Northern Africa?

- A. Mummies, Pyramids and sand dunes
- B. Gorillas, waterfalls and hot springs
- C. Tropical forests, mountains and slave trade market sites
- D. Migration of wildebeests, Rift valley and Portuguese historical sites

52. Lake Chad was formed as a result of
- Volcanic activity
 - human activity
 - down wrapping
 - river erosion

Use the diagram below to answer questions 53 and 54



53. The arrows pointing towards the clouds represent
- Rain
 - water vapour
 - lightening
 - sun rays
54. In which one of the following parts of Eastern Africa is the type of rainfall represented on the diagram commonly experienced?
- On the slopes of Mt. Kilimanjaro
 - On the Ethiopian highlands
 - Around Lake Victoria
 - Central Tanzania
55. Which one of the following is the main factor that contributes to low agricultural production in Northern Kenya?
- Long periods of dry weather conditions

- Shortage of suitable land for cultivation
 - Uncontrolled soil erosion
 - Over dependence on relief food
56. Three of the following are benefits of a society that is free from corruption Which one is not
- It allows equal treatment for all citizens
 - It leads to fair distribution of resources
 - It enables the government to provide good services
 - it enables some people to become rich in a short time
57. One of the recent means of communication to be introduced in Africa is the
- radio
 - telegram
 - television
 - mobile phone
58. The process where citizens vote for a proposed constitution is known as
- General election
 - by-election
 - Consensus
 - referendum
59. In Kenya, a member of the national assembly may loose the seat as a result of
- Making little contributions during debates in parliament
 - failing to make regular visits to the constituency

- C. missing eight sittings in parliament continuously
 - D. being sacked from the cabinet
60. Which one of the following would be the main factor to consider when deciding where to set up a *Jua kali* industry?
- A. Availability of market
 - B. Availability of raw materials
 - C. Nearness to a source of power
 - D. Nearness to a source of water

CHRISTIAN RELIGIOUS EDUCATION

61. Which one of the following is the main reason why God placed human beings in the Garden of Eden? He wanted them to
- A. Give names to the animals in the garden
 - B. eat the fruits of the trees in the garden
 - C. take care of the garden
 - D. have a family while in the garden
62. Abraham left Haran to an unknown land because he
- A. wanted to obey his father
 - B. wanted to obey God
 - C. had many animals
 - D. wanted to get more land
63. Which one of the following activities was performed by the Israelites on the Passover night in Egypt? They
- A. smeared blood on door posts
 - B. selected animals for sacrifice
 - C. prayed in the temples
 - D. collected manna

64. God revealed Himself to the Israelites during the exodus through the

- A. flaming torch
- B. burning bush
- C. wind and rain
- D. cloud and fire

65. Which one of the following commandments promises long life for those who obey it?
- A. 'Observe the Sabbath and keep it holy'
 - B. Respect your father and your mother
 - C. Worship no other God but me
 - D. Do not commit adultery

66. Who among the following people was a judge in Israel?

- A. Elkanah
- B. Joshua
- C. Esther
- D. Deborah

67. A lesson that Christians learn from the incident when David killed Goliath is that they should be

- A. tolerant
- B. patient
- C. courageous
- D. repentant

68. He asked wisdom. God added him wealth and honour. Who was he?

- A. Solomon
- B. Ahab
- C. Jeroboam
- D. Rehoboam

69. Prophet Isaiah foretold that the Messiah would be called

- A. the King of Kings
B. the giver of life
C. the son of the most high
D. a wonderful counsellor
70. "I choose you before I gave you life, and before you were born I selected you to be a prophet to the nationals". These words were spoken by God to prophet
- A. Samuel
B. Jeremiah
C. Amos
D. Hosea
71. When Emperor Augustus ordered a census to be taken, Joseph went to the town of Bethlehem because
- A. It was a religious centre
B. it was nearer to Nazareth
C. it was his ancestors birth place
D. he was commanded by an angel
72. Who among the following women witnessed the dedication of baby Jesus in the temple?
- A. Martha
B. Anna
C. Elizabeth
D. Mary Magdalene
73. "You are my own dear Son. I am pleased with you" (Luke 3:22). These words were spoken during the
- A. resurrection of Jesus
B. transfiguration of Jesus
C. birth of Jesus
D. baptism of Jesus
74. Which one of the following groups of people made up the first disciples of Jesus?
- A. Andrew, John, Simon, James
B. Simon, Judah, James, Andrew
C. Levi, Thomas, John, Simon
D. Matthew, John, Phillip, Andrew
75. Which one of the following statements is a teaching of Jesus from the Sermon on the Mount?
- A. Love God with all your heart
B. Let the children come to me
C. Happy are the pure in heart
D. You must be born again
76. Jesus teaches about forgiveness in the parable of
- A. a friend at midnight
B. the prodigal son
C. the mustard seed
D. the sower
77. Which one of the following events took place during the crucifixion of Jesus?
- A. The disciples were filled with the Holy Spirit
B. The rooster crowd
C. Moses and Elijah appeared to Jesus
D. The curtain in the temple tore in two
78. The Christian ceremony held to mark Christ's victory over death is
- A. Easter
B. Christmas
C. Pentecost
D. Ascension

79. Christians in the early church **best** showed their unity by
- A. singing praise
 - B. baptizing one another
 - C. sharing food
 - D. reciting scriptures
80. Paul was chosen by God to preach the Gospel **mainly** to
- A. The gentiles
 - B. The Jews
 - C. Women
 - D. Slaves
81. Which one of the following beliefs about God is found in **both** the Apostles Creed and traditional African communities? God is
- A. Three in one
 - B. The creator
 - C. All knowing
 - D. Everywhere
82. In a traditional African communities, sacrifices are made in order to
- A. Prove one's abilities
 - B. Show one's bravery
 - C. Appreciate God's gift of life
 - D. Reduce one's livestock
83. In traditional African communities, initiation is carried out **mainly** because
- A. parents are able to give presents to the initiates
 - B. it helps them to know those initiates who are able to lead others
 - C. it prepares the initiates for marriage
 - D. it enables the initiates to learn about the society
84. In both Christianity and traditional African communities. Children are told stories **mainly** to
- A. keep them busy
 - B. entertain them
 - C. teach them about their past
 - D. teach them moral values
85. Your deskmate Timothy asks you for advice on how to use money given to him by his uncle. As a Christian, what will you tell him to do?
- A. give him the money
 - B. donate some to the needy
 - C. buy himself a pair of shoes
 - D. return it to the uncle
86. Mary and Joan have been close friends. Of late they have started showing signs of disagreements. As a Christian, what advice would you give them?
- A. Seek for guidance and counselling
 - B. stop talking to each other
 - C. forget about each other and get new friends
 - D. stop seeing each other
87. Brian has been spending a lot of time playing games and his parents are complaining that his performance in class has dropped. As a Christian, what advice can you give her?
- A. Do the work as well as she can
 - B. ask a friend to do the work for her
 - C. report the matter to her parents
 - D. ask for permission to go home

89. Anna, a standard eight pupil has been found to be pregnant. A friend has advised her to carry out an abortion. As a Christian, what action should she take?

- A. Stop going to school
- B. Get married immediately
- C. Follow the friend's advice
- D. Keep the pregnancy

90. Joseph, a standard seven pupil meets George a standard Four pupil in the company of smoking cigarettes. He fears that George might also be involved. As a Christian, what is the **best** action for Joseph to take?

- A. Report the matter to the parents
- B. Tell George the dangers of smoking
- C. Let the class teacher know about it
- D. Report the matter to the Chief

SECTION B

ISLAMIC RELIGIOUS EDUCATION

61. Which one of the following *Surahs* asks Muslims to proclaim Allah's favour?

- A. *Al-Inshirah*
- B. *A-Tiin*
- C. *Dhuha*
- D. *Al-Qadar*

62. *Surah Al-Fatiha* teaches Muslims to follow the path of those who

- A. earned Allah's forgiveness
- B. earned Allah's grace
- C. performed *Swalat*
- D. praised Allah

63. The main message of *Surah Al-Qariah* is

- A. the last day

- B. oneness of Allah
- C. importance of time
- D. evil of piling wealth

64. The *Surah* that warns Muslims against delay in the performance of *Swalat* is

- A. *Al-Kafirun*
- B. *Al-Quraish*
- C. *Al-Humaza*
- D. *Al-maun*

65. "Woe to every slanderer and backbiter". This verse is quoted from *Surah*

- A. *Al-Fiil*
- B. *Al-Humaza*
- C. *Al-Bayyinah*
- D. *Al-Qariah*

66. Your neighbour has a habit of throwing dirt at your doorstep. According to the teaching of the Prophet (P.b.u.h); which one of the following is the **best** action for you to take in order to solve this problem?

- A. Move to another house
- B. Report to the chief
- C. Ignore the neighbour
- D. Advise the neighbour

67. "Whoever is not thankful to people is not thankful to". Which one of the following words completes the quoted *Hadith* of the Prophet?

- A. A. Parents
- B. Oneself
- C. Allah (s.w.)
- D. Prophet (P.b.u.h.)

68. Which among the following statements is **true** about the congregational prayer?
- A. It should have a minimum of two people
 - B. It should have a maximum of forty people
 - C. It must be performed in a central mosque
 - D. It is only performed on Friday
69. Which one of the following occasions is optional *ghusl* performed?
- A. After giving birth
 - B. After experiencing
 - C. After menstruation period
 - D. After washing a dead body
70. In *Swalatul Janaza*, the prayer for the Prophet (P.b.u.h.) is said after the
- A. first *Takbir*
 - B. second *Takbir*
 - C. third *Takbir*
 - D. Fourth *Takbir*
71. Which one of the following is a ritual of *Umrah*?
- A. stoning *Jamarat*
 - B. visiting *Arafat*
 - C. performing *twawaf*
 - D. offering a sacrifice
72. Ibrahim, a standard eight pupil was asked by his non-Muslim friend, "how does a person convert to Islam?" Which one of the following statements answers the question?
- A. By reciting *Surah Fatiha*
 - B. By reciting the *Kalima*
 - C. By performing *Wudhu*
 - D. By performing *Swalat*
73. Muslims can show tolerance towards followers of other religions by
- A. praying with them
 - B. giving them money
 - C. giving them Muslim names
 - D. living with them peacefully
74. On her way to school, Maryam a Standard one pupil met her uncle. Maryam should greet her uncle by saying
- A. "*Assalamu Aleikum*"
 - B. "*Swabah – ul- kheir*"
 - C. "*How are you*"
 - D. "*Good morning*"
75. Which one of the following is the best way of caring for people infected with HIV/AIDS?
- A. Pray for them
 - B. Provide them with food
 - C. Encourage them to live positively
 - D. Keep their status a secret
76. Which one of the following is a miracle of *Nabi Issa*?
- A. Turning a rod into a snake
 - B. Bringing the dead back to life
 - C. Dividing the Red Sea into two
 - D. Producing light from his armpit
77. The correct meaning of *Tawakul* is
- A. developing fear of Allah
 - B. believing in Allah only
 - C. worshipping Allah only

- D. developing trust in Allah
78. Which one of the following names of Allah shows that He is the creator?
- A. *Al-khaaliq*
 - B. *Al-Qahhaar*
 - C. *Al-Wahhab*
 - D. *Al-Razzap*
79. The correct order of events of the last day is
- A. *Mahshar, bath, Hukmu, Jannah/naar*
 - B. *Mahshar, Hukmu, Baath, Jannah/Naar*
 - C. *Baath, Mahshar, Hukmu, Jannah/Naar*
 - D. *Baath, Hukmu, Mahshar, Jannah/Naar*
80. Which one of the following is the **correct** way of caring for the school environment?
- A. Sweeping the compound
 - B. Uprooting plants
 - C. Eating in the dining hall
 - D. Playing on the grass
81. Amina, a standard one pupil has received a gift from her father. Which one of the following is the **best** way of thanking her father?
- A. Singing for him
 - B. Praying for him
 - C. Embracing him
 - D. Clapping for him
82. Nassir, a standard seven finds Hassan and Ali fighting in the playground. The **best** course of action for Nassir to take is to
- A. shout at them to stop fighting
 - B. call the head boy to assist
 - C. separate them and advised them
 - D. separate them and leave them
83. At the age of twelve, Muhammad (P.b.u.h) travelled to..... in the company of his uncle Abu Talib
- A. *Al-Faruuq*
 - B. *As-Swiddiq*
 - C. *Al-A'lim*
 - D. *Al-Amin*
85. Which one of the following is **not** a method of persecution of Muslims by the Quraish of Makka?
- A. Boycotting of the Muslims
 - B. Bombing their houses
 - C. Killing them
 - D. Beating them
86. Which one of the following is **not** an activity performed by Prophet Muhammad (P.b.u.h.) **immediately** after *Hijrah*?
- A. Fighting the battle of Badr
 - B. Construction of a mosque
 - C. Established of Muslim brotherhood
 - D. Drawing of Madina constitution
87. Friday is an important day to Muslims because it is
- A. the first day of the week
 - B. the birthday of the prophet (P.b.u.h)
 - C. the day the Prophet (P.b.u.h) migrated to medina
 - D. the day by the prophet Adam (A.S.) was created

88. Which among the following is the correct order of the first four months in the Islamic calendar?
- A. Muharram, Safar, Rabbiul-awwal, Rabbiu-thani
 B. Muharram, Rabbiul-awwal, Rabbiu-thani, Safar
 C. Muharram, Safar, Rabbiu-thani, Rabbiu-awwal
 D. Muharram, Rabbiul-awwal, Safar, Rabbiu-thani
89. The main lesson that Muslims learn from the story of *Nabi Nuh* is
- A. forgiveness
 B. generosity
 C. patience
 D. humility
90. Which one of the following is the place of worship for the Hindus?
- A. Synagogue
 B. Temple
 C. Church
 D. Mosque
- A. *Agni* B. *Akash*
 C. *Vayu* D. *Prithvi*
63. The white dress of Goddess Saraswati is a symbol of
- A. purity
 B. power
 C. wealth
 D. strength
64. Who among the following *Tirthankars* adopted the path of Diksha at the age of a hundred years?
- A. Adinath
 B. Shantinath
 C. Parshvanath
 D. Mallinath
65. Which one of the following *Daan* was given to Vaman by King Bali after the performance of *Yajna*?
- A. Kingdom B. Land
 C. Gold D. Money
66. The Buddhists regard the Jatak Katha as sacred because it contains
- A. Anand's teaching on Lord Buddha
 B. sayings of Lord mahavir
 C. life history of King Ashok
 D. stories of Lord Buddha's past life
67. Which one of the following is a reason why idol worship is discouraged in the book of Satyarth Prakash
- A. Paramatma will punish evil doers
 B. paramatma is eternal
 C. Paramatma is formless
 D. Paramatma is the source

SECTION C

HINDU RELIGIOUS EDUCATION

61. Which one of the following attributes of Paramatma is displayed through the worship of the sun?
- A. *Nirgun Nirakar*
 B. *Sat chit anand*
 C. *Sagun Sakar*
 D. *Sarva Drashta*
62. The sound OM is heard through the medium of

68. Which one of the following scriptures is **correctly** matched with its followers?

Scriptures	Followers
A. Shiksha Patri	Swami Narayan
B. Kalpa Sutra	Buddhists
C. Dhamma Pada	Sikhs
D. Guru Granth Sahib	Jains

69. Sikhs earn their living through honest means. By doing so, they practise the principle of

- A. *Naam Japna*
- B. *Wand ke Chahna*
- C. *Ishna Karma*
- D. *Dharam Ki Kirat*

70. Which one of the following principles emphasizes on the protection of living beings?

- A. *Asteya* B. *Ahimsa*
- C. *Staya* D. *Aparigraha*

71. Below are statements describing the principle of Punarjanma

- (i) *the body becomes lifeless*
- (ii) *the soul leaves the body*
- (iii) *the body is cremated*
- (iv) *the soul is born again*

Which one of the following is the **correct** order of the principle?

- A. (i), (ii), (iii), (iv)
- B. (ii), (iii), (iv), (i)
- C. (ii), (i), (iii), (iv)
- D. (iv), (iii), (i), (ii)

72. Which among the following is a teaching of Lord Buddha?

- A. Following the Veda
- B. Practising non-violence
- C. Performance of *Puja*
- D. Observing fast

73. Snehal, a standard six pupil visited her Muslim friends during Idd celebrations. By doing so she practised the principle of

- A. *Kshama*
- B. *Shaucham*
- C. *Brahmacharya*
- D. *Anekantavad*

74. Which one of the following principles, if practised will stop the spread of HIV/AIDS?

- A. *Brahmacharya*
- B. *Dhee*
- C. *Akrodha*
- D. *Vidya*

75. In which one of the following rituals is the Muhapati used?

- A. *Aarti*
- B. *Vandan*
- C. *Samaik*
- D. *Pachkan*

76. Which one of the following Karkars is **correctly** matched with its meaning?

Karkars	Meaning
A. Kesh	Maintaining decency
B. Kirpan	readiness to protect others
C. Kaccha	righteous deeds
D. Kada	connecting with God

77. Which one of the following is a place of worship for the Buddhists?
- A. Mandir B. Derasar
C. Gurudwara D. Stupa
78. Which one of the following statements describes the temple of Badrinath?
- A. The temple was built by Adi Shankaracharya
B. The temple contains three wooden Murtis
C. The temple is a seventy storeyed building
D. The temple was visited by Lord Rama
79. Which one of the following events did not take place on the day of Dashera?
- A. Arjun performed Puja of Shami tree
B. Lord Rama killed Ravan
C. Lord Shiva saved Ganesh
D. Durga killed demon Mahisasur
80. On which day of Paryushan do jains celebrate the birth of Lord Mahavir?
- A. Fifth
B. Fourth
C. Third
D. Second
81. Sikhs celebrate Vaisakhi **mainly** because
- A. it marks the beginning of the harvest season
B. it is the day Khalsa Panth was established
C. it is the day of Bhangra dance
D. it is the day Nishan Sahib is changed
82. Who among the following Karmayogi inspires the youth to sacrifice their lives for Dharma?
- A. Guru Amardas
B. Bhagini Nivedita
C. Samarth Ramdas
D. King Bhagirath
83. The *Yoga Asana* that helps the spinal cord and abdomen muscles is
- A. *Ardha Chakrasana*
B. *Pada hastasana*
C. *Sapta Vajrasana*
D. *Bhujang Asana*
84. Namdev was able to convince the idol of Vitthal to accept his milk offering through
- A. *Karma Yoga*
B. *Jnana Yoga*
C. *Raja Yoga*
D. *Bhakti Yoga*
85. The main reason why people living with HIV/AIDS should be treated with compassion is because
- A. HIV/AIDS victims experience mental suffering
B. they need encouragement to carry on with life
C. the society stigmatises \HIV/AIDS victims
D. anyone can be infected by the disease
86. Anil, a standard seven pupil finds his classmates smoking in the toilet. The **correct** action for him to take is
- A. warn the classmates on the harmful effects of cigarettes

- B. join his classmates in smoking the cigarettes
- C. take the cigarettes and throw them away
- D. run to the staffroom and call the class teacher
87. When the teacher entered the class, the pupils greeted her by saying "Namaste". By doing so, they practises the *Sadachar* of
- A. love B. friendship
- C. faith C. respect
88. Which one of the following if practised will show simplicity in action?
- A. Taking part in cleaning the classroom
- B. visiting friends and relatives
- C. listening to the radio
- D. Playing football with friends
89. Which one of the following rivers originates from the Himalaya Mountains?
- A. Narmada B. Saraswati
- C. Godavari D. Sindhu
90. The festival that is celebrated during the months of Sharvana and Bhadrapad is
- A. *Guru Purnima*
- B. *Raksha Bandhan*
- C. *Rama Namvi*
- D. *Buddha Jayanti*