

NAME \_\_\_\_\_ INDEX NUMBER \_\_\_\_\_

SCHOOL \_\_\_\_\_ DATE \_\_\_\_\_

## FISHING

1. 1990 Q 2

a) Apart from fishing, name two other economic activities that are practised along the East African Coastal waters.

.....  
.....

b) i) Explain why fish farming should be encouraged in Kenya.

.....  
.....  
.....  
.....  
.....

ii) Describe five measures other than fish farming that African countries have undertaken to promote the growth of the fishing industry.

.....  
.....  
.....  
.....  
.....  
.....

c) Why do most African countries support the international law that limits territorial waters of each country to distance of 320 kms?

.....  
.....  
.....

**2. 1994 Q 4(Sec B)**

a) Describe trawling as a fishing method.

.....

.....

.....

.....

.....

.....

.....

b) Explain why major fishing grounds of the world are found in the temperate regions of the Northern Hemisphere

.....

.....

.....

.....

.....

c) Explain why fresh water fishing is more important than sea fishing in Tanzania.

.....

.....

.....

.....

d) Explain how the fishing industry has contributed to the economy of Kenya.

.....

.....

.....

.....

**3. 1997 Q 3**

a) State three reasons why marine fisheries in Kenya are underdeveloped.

.....

.....

.....

b) State three ways through which fish farming contributes to the economy of Kenya.

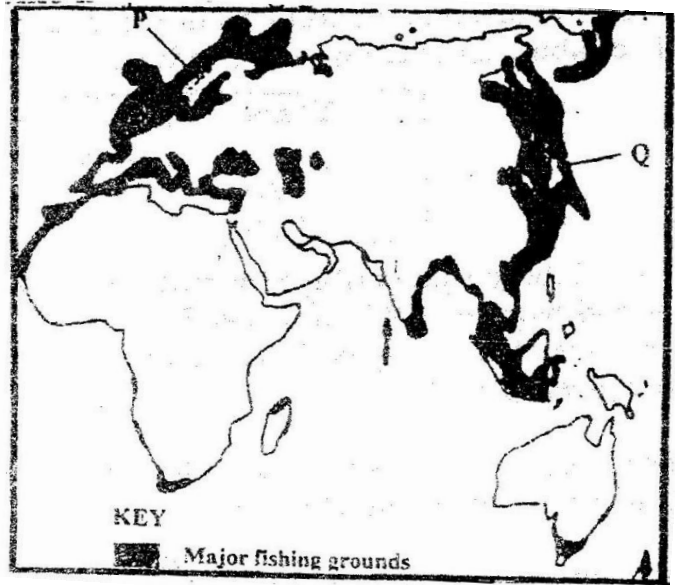
.....

.....

.....

4. 1999 Q 8

The map below shows some major fishing grounds in the world. Use it to answer question (a)



(a) (i) Name the countries marked P and Q

(2 marks)

.....

.....

(ii) Explain four conditions that favour fishing in the shaded coastal waters (8 marks)

.....

.....

.....

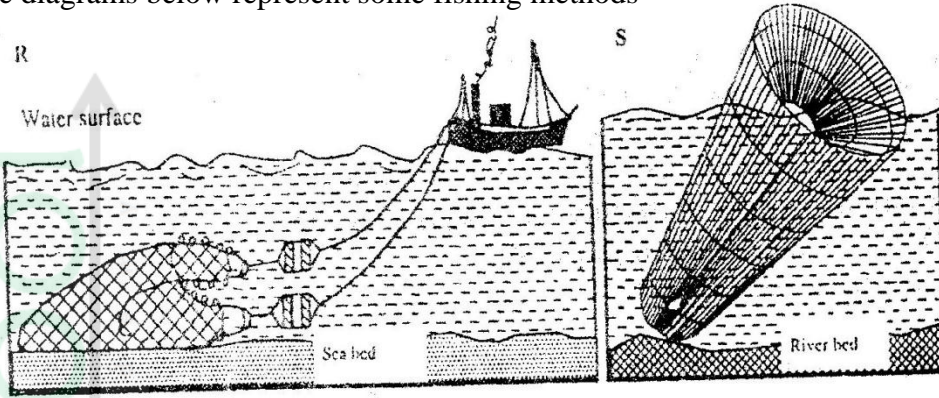
.....

.....

.....

.....

(b) The diagrams below represent some fishing methods



(i) Name the methods R and S

.....  
.....

(ii) Describe how each of the two methods is used in fishing

.....  
.....  
.....  
.....  
.....  
.....  
.....  
.....  
.....  
.....

(c) Explain three measures used to conserve fish in Kenya

.....  
.....  
.....  
.....  
.....  
.....

a) State three measures that have been taken to conserve fisheries in Kenya.

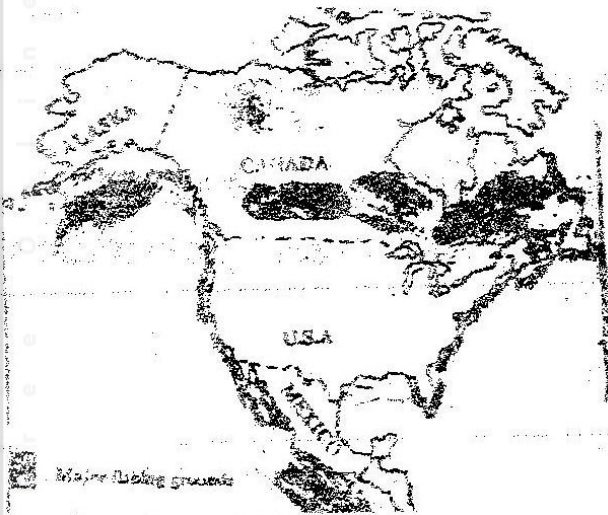
.....  
.....  
.....

b) Give four reasons why Norway is a great fishing nation.

.....  
.....  
.....  
.....

6. 2003 Q 9

Use the map of North America (in question paper) to answer question (a)



a) i) Name two methods of fishing used in the shaded areas

.....  
.....

ii) Name two types of fish caught along the west coast of Canada

.....  
.....

iii) Explain how the following factor favours fishing in the shaded areas.

- Indented coastline.

.....

.....

.....

b) Explain four ways in which marine fisheries in Kenya can be conserved.

.....

.....

.....

.....

c) i) Give three methods used to preserve fish

.....

.....

.....

ii) Explain three problems experience by fishermen while fishing in Lake Victoria.

.....

.....

.....

.....

.....

7. 2012 Q2 P1

(a) State **two** methods used in deep sea fishing. (2 marks)

.....

.....

(b) State **three** ways in which the government of Kenya is promoting the fishing industry. (3 marks)

.....

.....

.....