

FOCUS A365

Another Manyamfranchise.Com Evaluation Test

FORM 4 TERM 1 GEOGRAPHY PP2 EXAMINATIONS 2018

NAME: _____ ADM NO: _____ CLASS: _____

INSTRUCTIONS TO CANDIDATES:

- (a) This paper has **two** Sections **A** and **B**.
- (b) Answer all the questions in Section **A**.
- (c) Answer question **6** and any other **two** questions from Section **B**.
- (d) All answers must be written in the answer booklet provided.

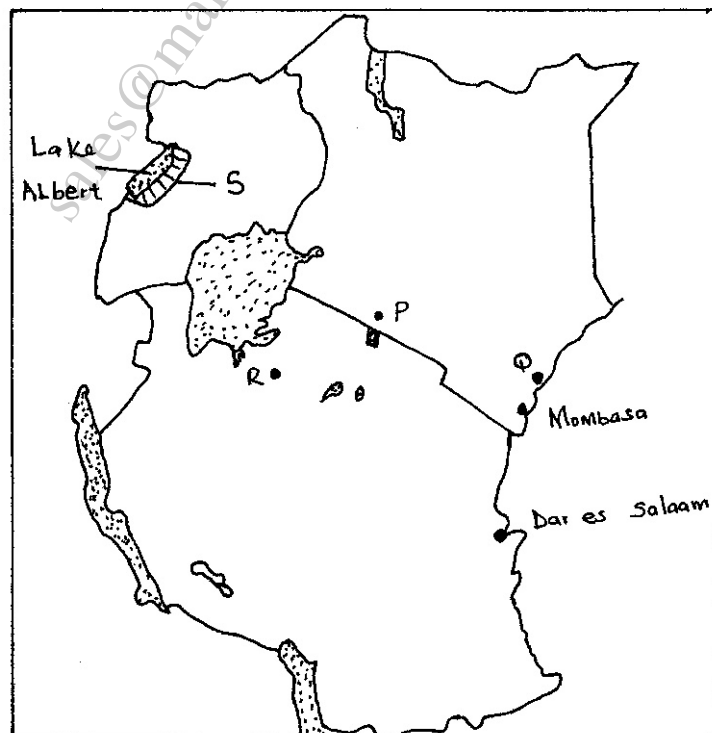
<http://notes.atikaschool.org>
sales@manyamfranchise.com [9728 450 4251]

Answer question 6 and any other two questions from this section.

6. The table **below** shows the number of tourists who visited Kenya between 1996 and 1999. Use it to answer questions that follow.

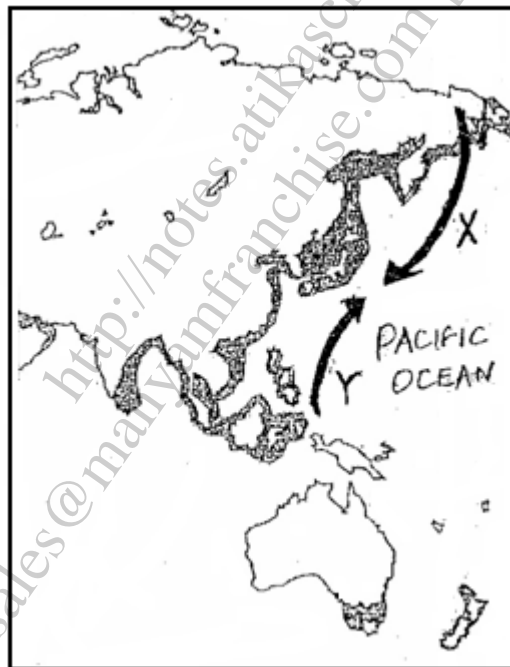
Country/Year	1996	1997	1998	1999
Britain	100,000	80,000	60,000	40,000
N. America	80,000	50,000	45,000	48,000
Germany	70,000	40,000	35,000	30,000
S.E Asia	40,000	30,000	25,000	25,000

- (a) Using 1cm to represent 10,000 people, draw a comparative bar graph to represent the data above. (8 marks)
- (b) State **four** possible reasons for the general decline in the number of tourists since 1997. (4 marks)
- (c) (i) Define eco-tourism. (1 mark)
- (ii) State **two** objectives of eco-tourism. (2 marks)
- (d) (i) Explain **three** factors that hinder tourism in Kenya. (6 marks)
- (ii) Identify **four** measures the Kenyan government has undertaken to promote tourism in the country. (4 marks)
7. Use the map of East Africa to answer questions (a)(i) and (ii).



- (a) (i) Name the minerals mined at the following marked areas **P, Q, R, S**. (4 marks)
- (ii) Give **three** categories of minerals. (3 marks)
- (b) Explain how placer method of mining is carried out. (5 marks)
- (c) (i) Name **two** ports through which some of the minerals mined in East Africa are exported. (2 marks)
- (ii) State **three** ways in which mining derelicts can be reclaimed. (3 marks)
- (d) Explain **four** ways in which gold mining has contributed to the economy of South Africa. (8 marks)

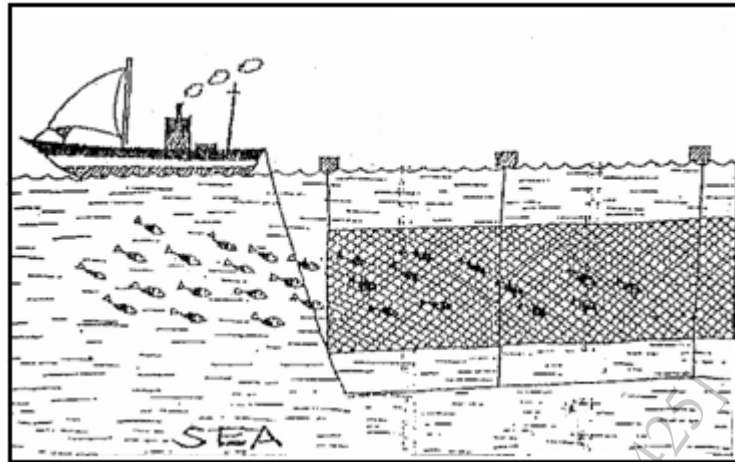
8. Use the map of the North-West Pacific **below** to answer question (a).



3

- (a) (i) Name the ocean currents marked **X** and **Y**. (2 marks)
- (ii) Name **two** main countries involved in fishing in the North West Pacific fishing ground. (2 marks)
- (iii) Explain **three** human factors which favour fishing in the North West Pacific fishing ground. (6 marks)

- (b) The diagram **below** shows a fishing method.



- (i) Describe how the method is used in catching fish. (5 marks)
- (c) (i) Explain **three** measures being taken by the government of Kenya to conserve marine fisheries. (6 marks)
- (ii) State **four** problems experienced in the marketing of fish in Kenya. (4 marks)
9. (a) (i) What is a polder? (1mk)
- (ii) Name **two** methods used in land rehabilitation in Kenya. (2mks)
- (iii) State **three** measures used to control tsetse flies in Lambwe Valley. (3mks)
- (b) (i) Name **two** Rivers which are sources of water to Mwea Irrigation Scheme. (2mks)
- (ii) Name **two** subsistence crops grown in Mwea Irrigation scheme. (2mks)
- (iii) Explain **three** human factors which influenced the location of Mwea Irrigation Settlement. (6mks)
- (c) (i) State **three** benefits of the Delta Plan Project. (3mks)
- (ii) Outline **three** similarities of land reclamation in Kenya and the Netherlands. (6mks)

10. (a) (i) Name **two** districts to the West of Rift Valley where tea is grown on large scale. (2 marks)
- (ii) State **five** physical conditions that favour tea growing in Kenya. (5 marks)
- (b) Describe the stages involved in the cultivation of tea from land preparation to harvesting. (6 marks)
- (c) (i) Explain **five** problems facing tea farming in Kenya. (10 marks)
- (ii) Name **two** countries in the world which are the leading importers Of Kenyan tea. (2marks)

<http://notes.atikaschool.org>
sales@manyamfranchise.com [0728 450 425]