

THE KENYA NATIONAL EXAMINATIONS COUNCIL  
Kenya Certificate of Secondary Education

231/3 -

**BIOLOGY**  
**(PRACTICAL)**

- Paper 3

Nov. 2018 - 1¾ hours

Name ..... Index Number .....

Candidate's Signature ..... Date .....

**Instructions to candidates**

- (a) Write your name and index number in the spaces provided above.  
(b) Sign and write the date of examination in the spaces provided above.  
(c) Answer **all** the questions in the spaces provided.  
(d) You are required to spend the first 15 minutes of the 1¾ hours allowed for this paper reading the whole paper carefully before commencing your work.  
(e) Additional pages must **not** be inserted.  
(f) **This paper consists of 7 printed pages.**  
(g) **Candidates should check the question paper to ascertain that all the pages are printed as indicated and that no questions are missing.**  
(h) **Candidates should answer all the questions in English.**

**For Examiner's Use Only**


Question	Maximum Score	Candidate's Score
1	14	
2	12	
3	14	
Total Score	40	



1. The photographs below represent three mammalian bones, labelled E, F and G.



E



F



G

- (a) With reasons, identify the bones.

Bone	Identity	Reason(s)
E	.....	.....
	.....	.....
	.....	.....
F	.....	.....
	.....	.....
	.....	.....
G	.....	.....
	.....	.....
	.....	.....

(3 marks)

(2 marks)

(2 marks)

- (b) Name the joints formed at the anterior and posterior ends of F.

Anterior end ..... (1 mark)

Posterior end ..... (1 mark)

879

A427

- (c) State the types of movement facilitated by the joint at the anterior end of specimen labelled F. (1 mark)

.....

.....

- (d) (i) Name the substance found inside the living tissue of the specimen represented in photograph F. (1 mark)

.....

.....

- (ii) State the function of the substance named in (d) (i) above. (1 mark)

.....

.....

- (e) (i) Name the muscle bundle usually attached onto the front of the specimen represented in photograph F. (1 mark)

.....

- (ii) State the function of the muscle bundle named in (e) (i) above. (1 mark)

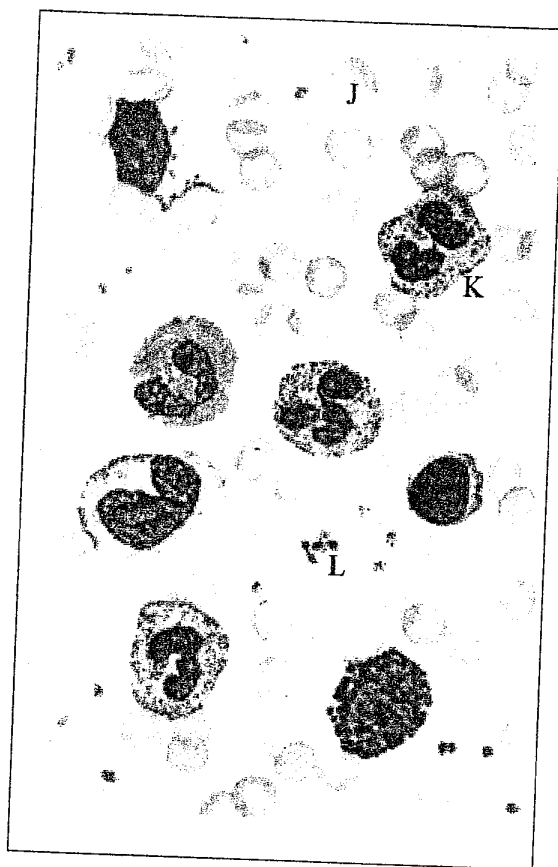
.....

879

A427



2. Below is a photograph of a blood smear from a normal individual. The arrangement is arbitrary and the number of blood elements is greater than what would normally occur in an actual microscopic field.



- (a) (i) Name the blood elements labelled J, K and L. (3 marks)

J .....

K .....

L .....

- (ii) State **one** function of each of the elements named in (a) (i) above. (3 marks)


J .....

K .....

L .....



- (b) The photograph below is of a section of the human intestines of a patient suffering from a common parasitic disease.



- (i) Name the disease. (1 mark)

.....

- (ii) Name the parasite that causes the disease in (b) (i) above. (1 mark)

.....

- (iii) State **two** control measures for the disease. (2 marks)

.....

.....

- (iv) State the effects of having the parts labelled **G** in the patient's intestines. (2 marks)

.....

.....

3. You are provided with a specimen labelled **H**. With the aid of a hand lens, examine the external features of the specimen.

(a) (i) What part of a plant is specimen **H**? (1 mark)

.....

(ii) Give **two** reasons for your answer in (a) (i) above. (2 marks)

.....

.....

(b) Open up specimen **H** longitudinally.

Use a hand lens to observe the internal structures of specimen **H**.

(i) Draw and label the internal cut surface and associated structures of specimen **H**. (5 marks)

(ii) Explain how you would determine the magnification of the drawing made in (b) (i) above. (2 marks)

.....

.....

.....

- (iii) State the mode of dispersal for seeds of specimen **H**. (1 mark)

.....

.....

- (iv) Explain how seeds of specimen **H** are dispersed through the mode stated in (b) (iii) above. (3 marks)

.....

.....

.....

.....

**THIS IS THE LAST PRINTED PAGE.**

