

SCHOOL BASED EVALUATION TEST

STANDARD SIX-YEAR 2019 SOCIAL STUDIES & CRE

6



STEP FLYER (002)

TIME: 2hrs 15mins

READ THESE INSTRUCTIONS CAREFULLY.

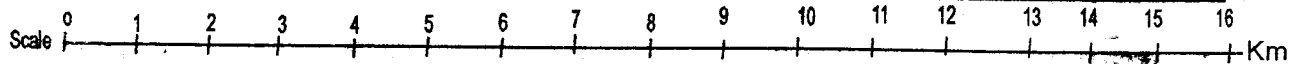
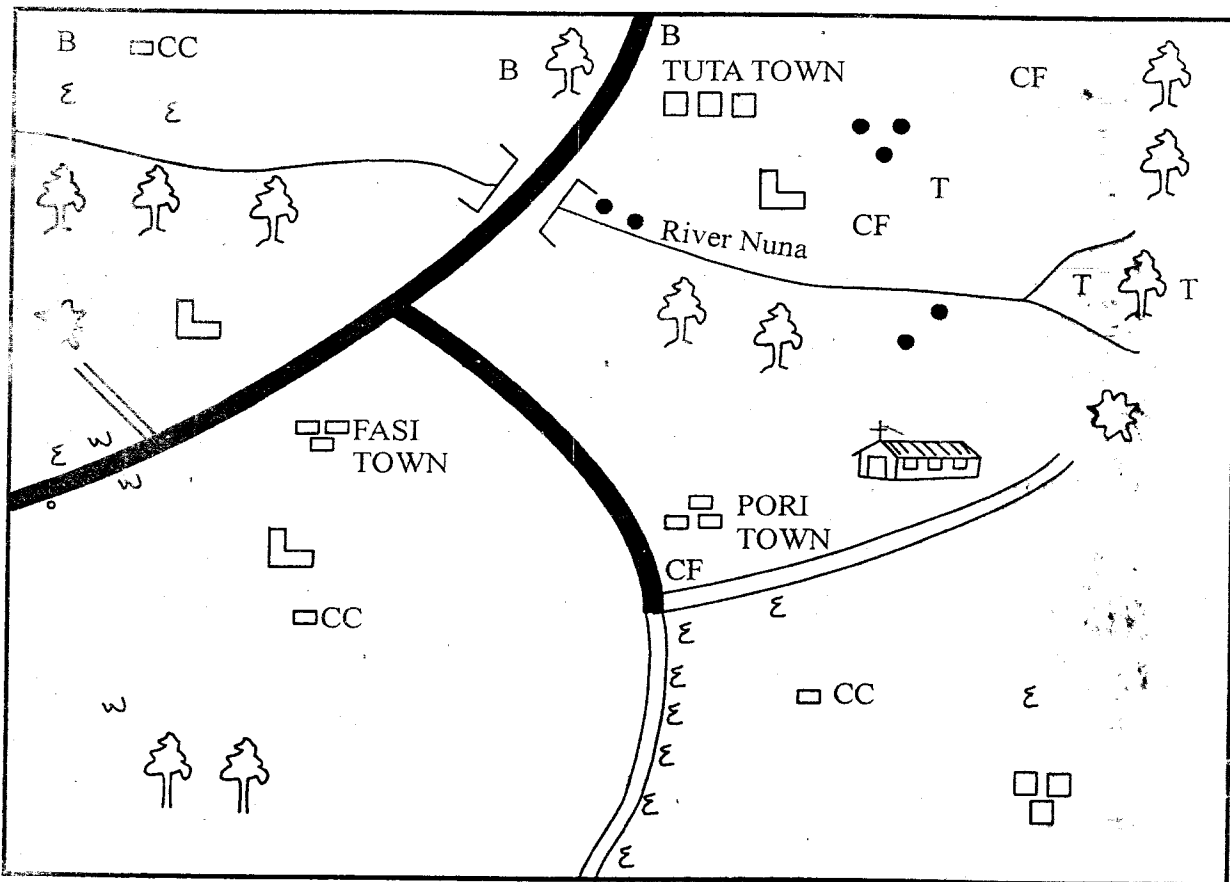
1. You have been given this question paper and a separate answer sheet. The question paper contains 90 questions.
2. Make sure that you have written on the answer sheet.

(i) Your name

(ii) Name of your school

Study the map of Nuru area and use it to answer questions 1 to 7

NURU AREA

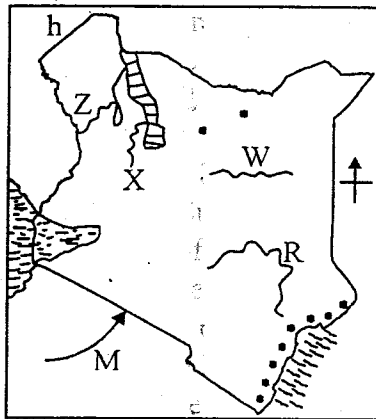


KEY

● ● ● Settlements	└ School	T - Tea	□ □ Permanent buildings
🌳 Forest	⚒ Quarry	CC - Chiefs Camps	— Tarmac road
🌉 River and bridge	B Bananas	~ Murrum road	⛪ Church

1. The religion of the people of Nuru area is
A. not shown B. Christianity
C. Hinduism D. Islam
2. How many locations are there in Nuru area
A. four B. one
C. three D. five
3. The climate of the area is **likely** to be
A. cool and wet B. dry and warm
C. cold and dry D. hot and dry
4. The other cash crop that is **likely** to be grown in Nuru area is
A. sisal B. cotton
C. cashewnuts D. pyrethrum
5. The **main** economic activity in Nuru area is
A. fishing B. crop farming
C. beef farming D. dairy farming
6. What product is **likely** to be extracted from the quarry
A. copper B. cement
C. stones D. diatomite
7. The head of Nuru area is
A. chief
B. senator
C. governor
D. ward administrator
8. Trade between two countries is called
A. Bilateral trade
B. regional trade
C. import and export trade
D. international trade
9. Who among the following was in the structure of traditional Ameru government?
A. Kaima B. Nabongo
C. Njuri Ncheke D. Kokwet
10. Which one of the following is **not** used for small scale fishing?
A. Handlines. B. Basket.
C. Traps. D. Trawling.
11. Which one of the following is **not** an example of a processing industries
A. coffee pulp processing
B. paper factories
C. sugar factories
D. milk dairies
12. The **main** cause of road accidents in Kenya is
A. Carelessness of drivers
B. overloading
C. speeding of vehicles
D. poor state of roads
13. Which one of the following raw materials is used for making cement?
A. Diatomite. B. Soda ash.
C. Limestone. D. Sand.
14. Three of the following factors influence population distribution. Which one does not?
A. region B. transport
C. soil D. rainfall
15. An example of a lowland forest in Kenya is
A. Nyandarua B. Mau forest
C. Arabuko sokoke D. Londian forest
16. The most effective way of communicating information to the majority of Kenyans today is by use of a
A. radio B. mobile phones
C. television D. newspaper
17. Which one of the following minerals mined in Kenya is widely used
A. Flourspar. B. Soda ash
C. Diatomite D. Limestone
18. The Bantu people were forced to migrate from Shungwaya region due to
A. scarcity of land to cultivate
B. invasion by the Europeans
C. attack by the hostile neighbours
D. breakout of diseases
19. The walls of the Rift valley are called
A. slopes B. hills
C. mountains D. escarpments
20. People initiated at the same time formed
A. an age group B. an age set
C. a society D. village
21. Which one of the following organized resistance against the British in Kenya
A. The Abawanga B. The kikuyu
C. The Giriama D. The maasai

Use the map of Kenya below to answer questions 22 to 25.

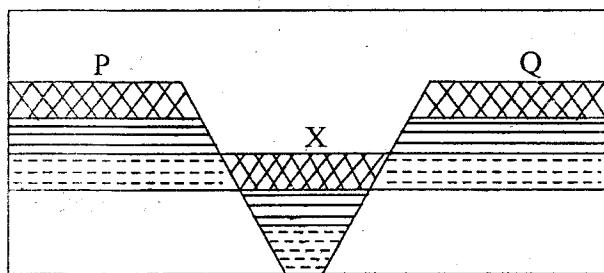


22. The river marked X is
 - A. Turkwel
 - B. Kerio
 - C. Tana
 - D. Ewaso nyiro north
23. The river marked W is called
 - A. Ewaso nyiro north
 - B. Lorian
 - C. Omo
 - D. Ewaso Nyiro south
24. The river marked R has its mouth at
 - A. Ngong hills
 - B. Lake Naivasha
 - C. Mt. Kenya
 - D. Indian Ocean
25. The group of people who followed the route marked M originally lived in
 - A. The Arabian desert
 - B. Congo forest
 - C. South Sudan
 - D. Horn of Africa
26. Which one of the following is true about the speaker of any assembly in Kenya?
 - A. He/she is elected by the executive of the assemblies.
 - B. Is appointed by the president.
 - C. Elected by the members from his political party.
 - D. Is elected by members of the assemblies.
27. The type of soil that is used by the maasai to decorate their bodies is
 - A. sandy soil
 - B. clay soil
 - C. red ochre soil
 - D. alluvial soil

28. Which one of the following lakes is **not** found in the floor of the Rift valley
 - A. Lake Nakuru
 - B. Lake Magadi
 - C. Lake Naivasha
 - D. Lake Victoria
29. Who among the following was the first prime minister in Kenya?
 - A. Raila Odinga
 - B. Jomo Kenyatta
 - C. Oginga odinga
 - D. Musalia mudavadi
30. Ologesaile and Kariandusi are both
 - A. pre historic sites
 - B. trading centres
 - C. national museum
 - D. mining centre
31. Cultural artefacts are important **mainly** because
 - A. they were made in the past
 - B. they tell the history of the community
 - C. they were made by special people
 - D. they attract people to come and see them
32. Mashujaa day is celebrated on
 - A. 1st June
 - B. 12th December
 - C. 10th October
 - D. 20th October
33. The following are three arms of government which one is **not**?
 - A. Police.
 - B. Judiciary
 - C. Executive
 - D. Legislature
34. Which of the following is the **main** duty of Kenya police?
 - A. Judging thieves.
 - B. Saluting the president.
 - C. Beating the wrong doers.
 - D. Maintaining law and order.
35. One of the following is **not** a characteristic of traditional agriculture. Which one is it
 - A. the farmers use simple tools
 - B. the farmers owned their land
 - C. it was practised on small scale
 - D. the farmers depend on family labour
36. Which one of the following is the **main** factor that influences distribution of people in a place?
 - A. Reliable rainfall.
 - B. The security.
 - C. Culture.
 - D. Longitude.

37. One of the following is **not** an element of a good leader. Which one is it?
 A. Passionate. B. Loving.
 C. Impatient. D. Loyal.
38. Horticulture crops are **mainly** transported by
 A. air B. pipeline
 C. railway D. road
39. National parks in Kenya are managed by
 A. Kenya army
 B. Kenya wildlife service
 C. National police service
 D. Kenya airports authority
40. The biggest country in Eastern Africa is
 A. Somalia. B. Uganda.
 C. Ethiopia. D. Sudan.
41. Which one of the following is an area which lies below sea level in Ethiopia?
 A. Dallol B. Abaya
 C. Biwala D. Ras Dashan
42. Which one of the following is a traditional industry?
 A. Meat canning.
 B. Tea processing.
 C. Iron smelting.
 D. Textile industry.

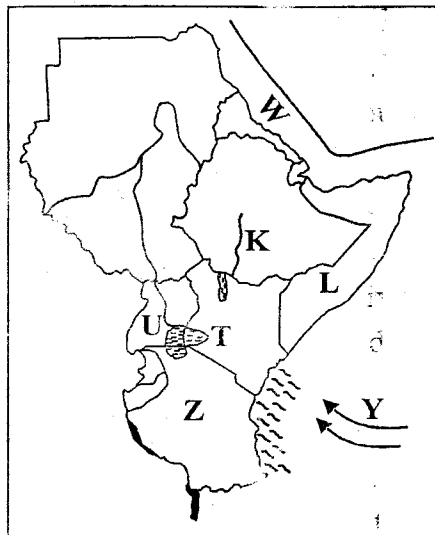
Use the diagram below to answer questions 43 to 45.



43. The highlands marked P and Q are
 A. Ngong hills and Mau ranges
 B. Mau ranges and Aberdare ranges
 C. Shimba hills and Nyandarua ranges
 D. Mau ranges and Mathews
44. The above feature was formed through
 A. blocking B. faulting
 C. folding D. volcanicity

45. Which one of the following mountains is **likely** to be found in the area marked X?
 A. Mt Kenya. B. Mt. Longonot.
 C. Mt Elgon. D. Mt. Kilimanjaro.

Use the map of Eastern Africa to answer questions 46 to 50.



46. The mass of water marked W is called
 A. Indian ocean B. Red sea
 C. Mediterranean sea D. Atlantic ocean
47. The country marked U was colonised by
 A. The Italians B. The French
 C. The German D. The British
48. The river marked K is
 A. River Juba B. River Omo
 C. River Tana D. River Turkwel
49. The staple food of the country marked Z is
 A. maize B. livestock
 C. bananas D. rice
50. The **main** economic activity of the community that migrated along the route marked Y was
 A. pastoralism B. fishing
 C. trading D. cultivation
51. The sides of a mountain that experiences a lot of rainfall is called
 A. leeward B. relief
 C. rainshadow D. windward

52. The major threat to natural forests in Kenya is
 A. drought
 B. cutting down trees for settlement
 C. cutting of trees for fire
 D. forest fires
53. Which one of the following mountains has its top covered by snow
 A. Mt. Longonot. B. Mt. Ndoto
 C. Mt. Elgon. D. Mt. Kilimanjaro
54. The most important human right is the
 A. right to information
 B. right to life
 C. right to worship
 D. right to association
55. Which of the following communities was ruled by a king before the coming of the Europeans
 A. Mijikenda B. Nandi
 C. Maasai D. Abawanga
56. Which one of the following is the main source of revenue to the government?
 A. Taxes. B. Loans.
 C. Grants. D. Fines.
57. The vegetation that grows well in salty waters region is
 A. equatorial forest
 B. woodland forest
 C. mangrove forest
 D. acacia forest
58. The title governor is given to the head of a
 A. region B. county
 C. location D. sub-county
59. The capital city of Tanzania is called
 A. Jinja B. Dar-es salaam
 C. Arusha D. Dodoma
60. In order for one to be elected to parliament one must have attained the age of
 A. 21 years B. 18 years
 C. 55 years D. 35 years

SECTION II

CHRISTIAN RELIGIOUS EDUCATION.

61. On the fifth day God created
 A. earth, sea and plants
 B. sea animals and birds
 C. heavenly bodies
 D. sky
62. God asked Abraham to move from _____ to _____
 A. Haran to canaan
 B. Ur to canaan
 C. Ur to Haran
 D. Haran to sodom
63. The three sons of Noah were
 A. Shem, Ham, Japheth
 B. Shem, Joseph, Ham
 C. Ham, Shem, Jacob
 D. Shem, Japheth, Joseph
64. Joseph showed his kindness and forgiveness in Egypt when he
 A. refused to sleep with potiphar's wife
 B. gave his brothers food
 C. interpreted dreams
 D. was made a leader in prison
65. _____ was a woman judge in Egypt
 A. Naomi B. Deborah
 C. Ruth D. Esther
66. Who among the following is a person with disability
 A. nurse B. epileptic
 C. engineer D. teacher
67. Who among the following was anointed by Samuel as the first king of Israel
 A. Solomon B. Saul
 C. David D. Ahab
68. When king Ahab took Naboth's vineyard, he broke which commandment?
 A. Do not kill
 B. Do not steal
 C. Do not covet
 D. Do not commit adultery
69. On which mountain did Elijah pray until fire came down?
 A. Carmel B. Zion
 C. Sinai D. Horeb
70. Christians should take care of people with special needs because
 A. The Lord will praise them
 B. They will be showing off
 C. They will be doing the will of God
 D. The pastor will reward them

71. The book of Exodus **mainly** explains?
 A. The life and journey of the Israelites.
 B. The creation of God.
 C. The miracles of Elijah.
 D. The preachings of John the baptist.
72. Jesus was born in Bethlehem and placed in a
 A. manger B. basket
 C. kennel D. hive
73. When Jesus was baptised in river Jordan
 A. a star appeared
 B. the curtains were torn
 C. heavens opened
 D. he started sweating blood droplets
74. Three of the following are temptations of Jesus **except**
 A. changing stones into bread
 B. jumping from the highest point of the temple
 C. worshipping the devil
 D. changing fish into snakes
75. According to Christian teachings the greatest commandment of all is
 A. humility B. love
 C. kindness D. generosity
76. Jesus taught the parable of the prodigal son to teach Christians about?
 A. Love. B. Forgiveness
 C. humility D. prayer
77. Jesus was crucified between two thieves, one of the thieves was _____
 A. forgiving B. repentant
 C. generous D. crying
78. The books of the bible were written by
 A. prophets
 B. angels
 C. people inspired by Holy spirit
 D. Joseph and Jesus
79. Children need to obey their parents because
 A. their parents are adults
 B. they will be parents too
 C. it is God's command
 D. they would die in peace
80. Who among the following disciples of Jesus was the most loved
 A. Peter B. Andrew
 C. John D. James
81. Saul's name changed to _____ after conversion.
 A. Paul B. Peter
 C. Jonah D. Philip
82. David and Jonathan vowed to remain _____ forever.
 A. foes B. enemies
 C. allies D. partners
83. King solomon prayed to God to give him
 A. confidence B. humility
 C. women D. wisdom
84. According to traditional African societies, shrines are places of
 A. burying the wizards
 B. settling disputes
 C. offering sacrifices
 D. receiving demonic powers
85. How did Jesus teach Christians to treat their enemies?
 A. Forgive them.
 B. Avoid them.
 C. Abuse them.
 D. Hate them.
86. When Christians share with the poor they?
 A. become wealth
 B. show kindness
 C. show selfishness
 D. become mean
87. Sun, moon and stars were created on the
 A. fourth day
 B. second day
 C. fifth day
 D. second day
88. Cynthia helps an old man to carry his luggage. This shows that she is _____
 A. proud B. kind
 C. mean D. generous
89. Young boys and girls should avoid sexual activities because?
 A. It is for adults only.
 B. Their bodies are the temple of God
 C. They will become addicts
 D. It pleases God
90. During the holidays school going children can spend their leisure time
 A. playing
 B. strolling on the streets
 C. visiting the sick
 D. fighting with friends

SCHOOL BASED EVALUATION ~~A~~

TEST

STANDARD SIX - YEAR 2019

MARKING SCHEME

SCIENCE

S/STUDIES & C.R.E

1 C	39 A	1 B	40 D	79 C
2 B	40 A	2 C	41 A	80 C
3 D	41 D	3 A	42 C	81 A
4 C	42 A	4 D	43 B	82 C
5 A	43 C	5 B	44 B	83 D
6 C	44 D	6 C	45 B	84 C
7 B	45 B	7 D	46 B	85 A
8 A	46 A	8 A	47 D	86 B
9 C	47 C	9 C	48 B	87 A
10 D	48 D	10 D	49 A	88 B
11 A	49 A	11 B	50 C	89 B
12 C	50 D	12 A	51 D	90 C
13 D		13 C	52 B	
14 A		14 A	53 D	
15 D		15 C	54 B	
16 C		16 A	55 D	
17 A		17 D	56 A	
18 D		18 C	57 C	
19 C		19 D	58 B	
20 B		20 B	59 D	
21 B		21 B	60 A	
22 C		22 C	61 B	
23 A		23 A	62 C	
24 A		24 A	63 A	
25 D		25 D	64 B	
26 B		26 B	65 B	
27 D		27 D	66 B	
28 D		28 D	67 B	
29 C		29 C	68 C	
30 A		30 A	69 A	
31 D		31 B	70 C	
32 C		32 D	71 A	
33 A		33 C	72 A	
34 D		34 D	73 C	
35 D		35 B	74 D	
36 B		36 A	75 B	
37 C		37 C	76 B	
38 B		38 A	77 B	
		39 B	78 C	